



Shade the region shown.

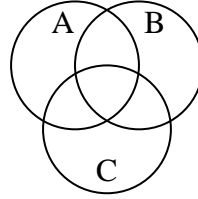
1) $(B \cup A) \cap C$



2) $A - (C \cup B)$



3) $(C \cup B) - A$



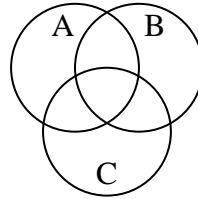
4) $B - (C \cup A)$



5) $B \cap A$



6) $C \cap A \cap B$



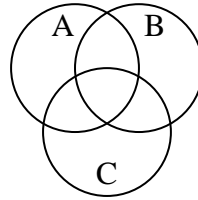
7) $A \cup (C - B)$



8) $B - (C \cap A)$



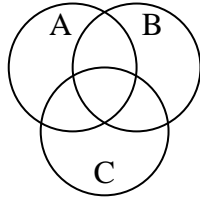
9) $A \cup C$



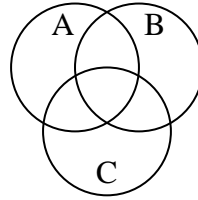
10) $(A \cup C) \cap B$



11) $C - (A \cap B)$



12) $(B \cup C) \cap A$



Answers

1. _____

2. _____

3. _____

4. _____

5. _____

6. _____

7. _____

8. _____

9. _____

10. _____

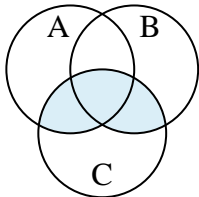
11. _____

12. _____

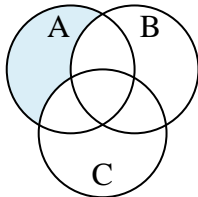


Shade the region shown.

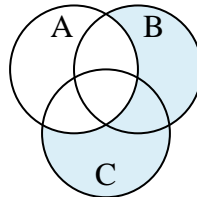
1) $(B \cup A) \cap C$



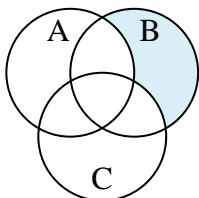
2) $A - (C \cup B)$



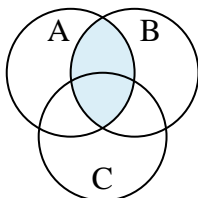
3) $(C \cup B) - A$



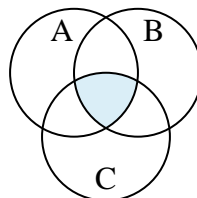
4) $B - (C \cup A)$



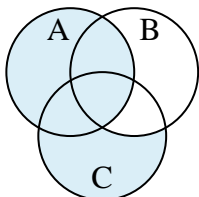
5) $B \cap A$



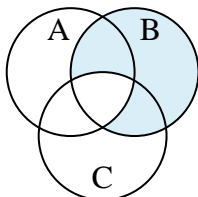
6) $C \cap A \cap B$



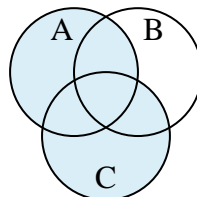
7) $A \cup (C - B)$



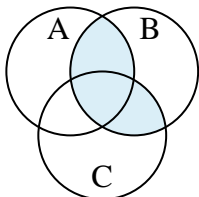
8) $B - (C \cap A)$



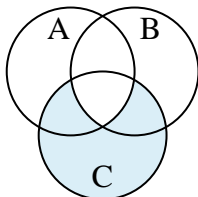
9) $A \cup C$



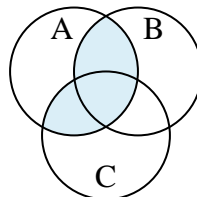
10) $(A \cup C) \cap B$



11) $C - (A \cap B)$



12) $(B \cup C) \cap A$



Answers

1. $(B \cup A) \cap C$

2. $A - (C \cup B)$

3. $(C \cup B) - A$

4. $B - (C \cup A)$

5. $B \cap A$

6. $C \cap A \cap B$

7. $A \cup (C - B)$

8. $B - (C \cap A)$

9. $A \cup C$

10. $(A \cup C) \cap B$

11. $C - (A \cap B)$

12. $(B \cup C) \cap A$