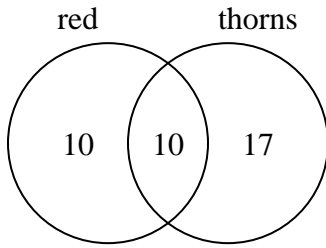




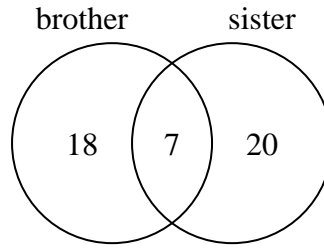
Use the diagram to solve each problem.

- 1) The diagram below shows the attributes of flowers in a flower shop.



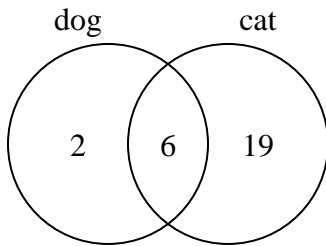
How many flowers were red with thorns?

- 2) The diagram below shows the gender of students siblings.



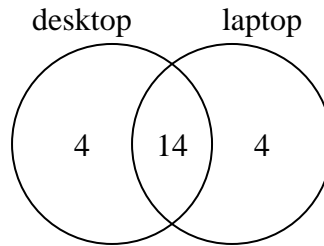
How many students had a brother?

- 3) The diagram below shows the pets students in a class owned.



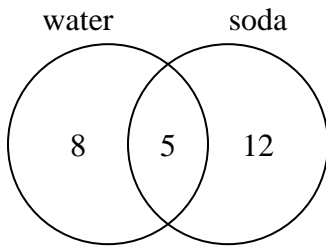
How many people had only a cat?

- 4) The diagram below shows the types of computers students owned.



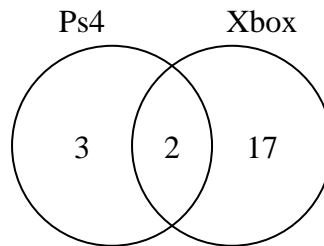
How many students owned both a desktop and a laptop computer?

- 5) The diagram below shows the drinks people consumed at the football game.



How many people drank both water and soda?

- 6) The diagram below shows the game consoles students owned.



How many people did not own both a Ps4 and a Xbox?

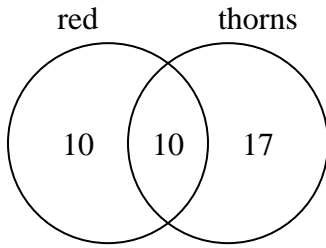
Answers

- 1. _____
- 2. _____
- 3. _____
- 4. _____
- 5. _____
- 6. _____



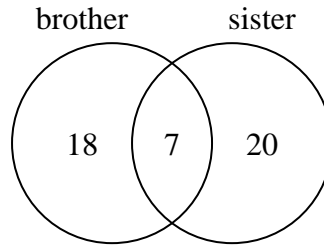
Use the diagram to solve each problem.

- 1) The diagram below shows the attributes of flowers in a flower shop.



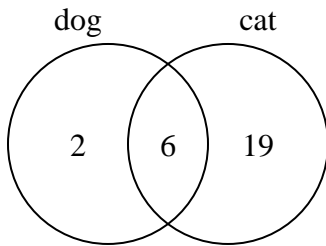
How many flowers were red with thorns?

- 2) The diagram below shows the gender of students siblings.



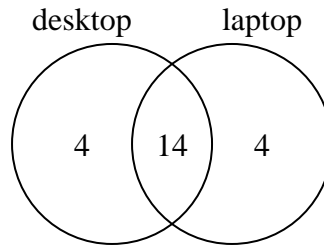
How many students had a brother?

- 3) The diagram below shows the pets students in a class owned.



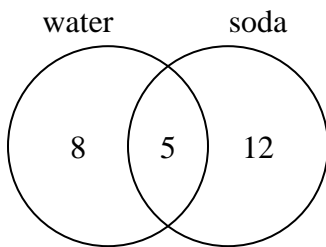
How many people had only a cat?

- 4) The diagram below shows the types of computers students owned.



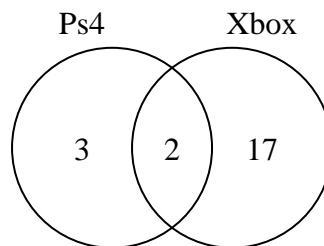
How many students owned both a desktop and a laptop computer?

- 5) The diagram below shows the drinks people consumed at the football game.



How many people drank both water and soda?

- 6) The diagram below shows the game consoles students owned.



How many people did not own both a Ps4 and a Xbox?

Answers

- 1. 10
- 2. 25
- 3. 19
- 4. 14
- 5. 5
- 6. 20