



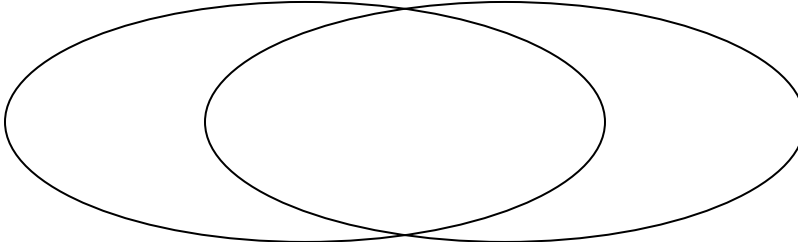
Solve each problem.

- 1) The table below shows the physical traits of several pets in a pet shelter. Use the chart to fill in the Venn Diagram.

	Fluffy	Bubbles	Alfus	Sparkles	Emily	Coco
Type	Cat	Dog	Dog	Cat	Dog	Dog
Breed	Pure	Mixed	Pure	Pure	Mixed	Pure

Dog

Pure Breed

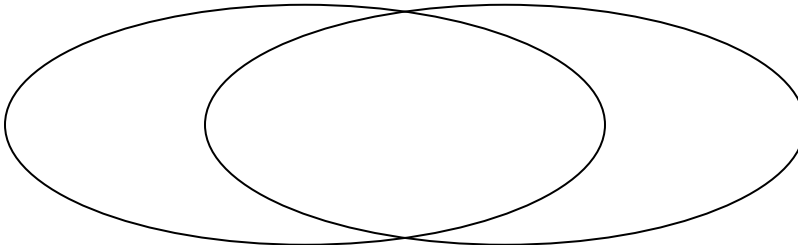


- 2) The table below shows the attributes of several types of candy. Use the chart to fill in the Venn Diagram.

	Yum-Yums	Bananza	Ribbles	Fidgies	Dubbles	Googlies
Type	Hard	Hard	Hard	Soft	Hard	Soft
Package	Bag	Box	Bag	Box	Box	Box

Hard Candy

Box Package

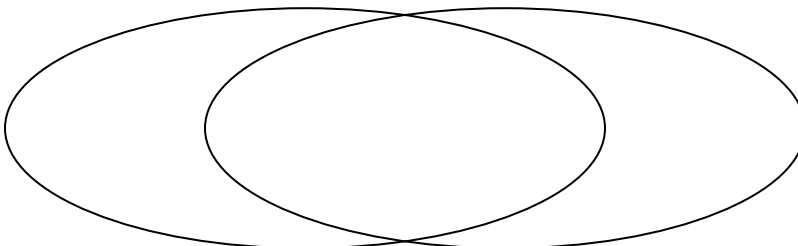


- 3) The table below shows the information on several pizza places. Use the chart to fill in the Venn Diagram.

	Oven Baked	Slice of Life	Luigi's Pizza	John's Pizza	Pizza Bros	Za Pizza
Type	Chain	Chain	Chain	Chain	Family Owned	Chain
Delivery	Pay	Free	Free	Free	Free	Pay

Chain Store

Free Delivery

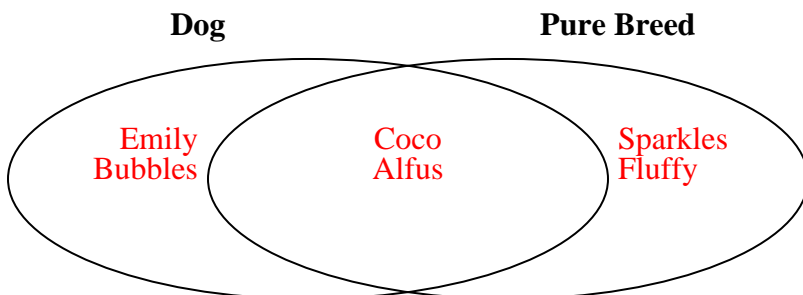




Solve each problem.

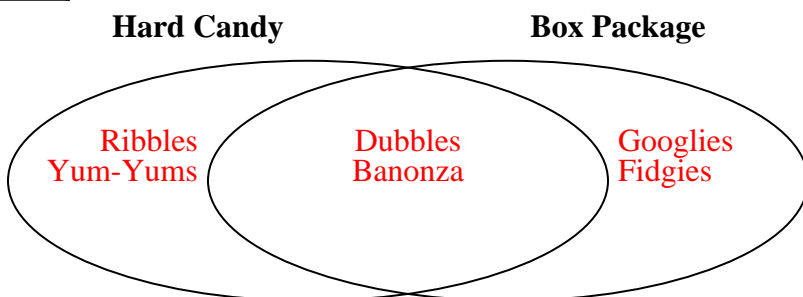
- 1) The table below shows the physical traits of several pets in a pet shelter. Use the chart to fill in the Venn Diagram.

	Fluffy	Bubbles	Alfus	Sparkles	Emily	Coco
Type	Cat	Dog	Dog	Cat	Dog	Dog
Breed	Pure	Mixed	Pure	Pure	Mixed	Pure



- 2) The table below shows the attributes of several types of candy. Use the chart to fill in the Venn Diagram.

	Yum-Yums	Bananza	Ribbles	Fidgies	Dubbles	Googlies
Type	Hard	Hard	Hard	Soft	Hard	Soft
Package	Bag	Box	Bag	Box	Box	Box



- 3) The table below shows the information on several pizza places. Use the chart to fill in the Venn Diagram.

	Oven Baked	Slice of Life	Luigi's Pizza	John's Pizza	Pizza Bros	Za Pizza
Type	Chain	Chain	Chain	Chain	Family Owned	Chain
Delivery	Pay	Free	Free	Free	Free	Pay

