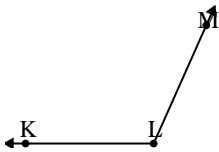




Solve each problem.

Answers

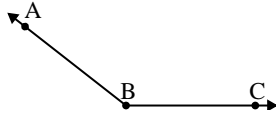
1)



Which choice best represents $\angle KLM$?

- A. 7°
- B. 114°
- C. 37°
- D. 139°

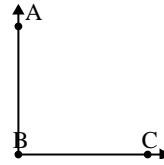
2)



Which choice best represents $\angle ABC$?

- A. 66°
- B. 142°
- C. 109°
- D. 0°

3)

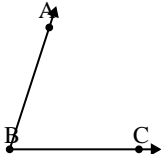


Which choice best represents $\angle ABC$?

- A. 153°
- B. 8°
- C. 46°
- D. 90°

1. _____
2. _____
3. _____
4. _____
5. _____
6. _____
7. _____
8. _____
9. _____

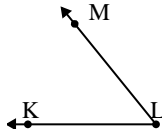
4)



Which choice best represents $\angle ABC$?

- A. 177°
- B. 98°
- C. 150°
- D. 72°

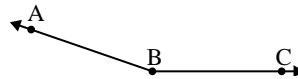
5)



Which choice best represents $\angle KLM$?

- A. 131°
- B. 25°
- C. 157°
- D. 51°

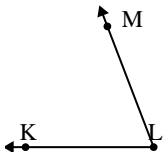
6)



Which choice best represents $\angle ABC$?

- A. 87°
- B. 56°
- C. 161°
- D. 110°

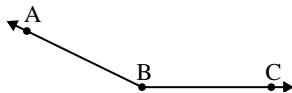
7)



Which choice best represents $\angle KLM$?

- A. 142°
- B. 36°
- C. 178°
- D. 69°

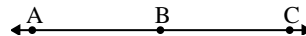
8)



Which choice best represents $\angle ABC$?

- A. 154°
- B. 179°
- C. 48°
- D. 7°

9)

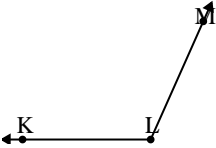


Which choice best represents $\angle ABC$?

- A. 144°
- B. 180°
- C. 119°
- D. 46°

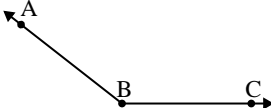


Solve each problem.

1) 

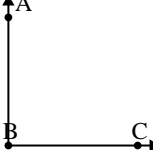
Which choice best represents $\angle KLM$?

A. 7°
 B. 114°
 C. 37°
 D. 139°

2) 

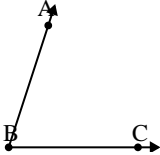
Which choice best represents $\angle ABC$?

A. 66°
 B. 142°
 C. 109°
 D. 0°

3) 

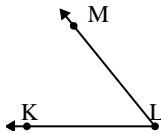
Which choice best represents $\angle ABC$?

A. 153°
 B. 8°
 C. 46°
 D. 90°

4) 

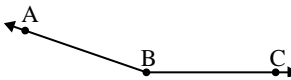
Which choice best represents $\angle ABC$?

A. 177°
 B. 98°
 C. 150°
 D. 72°

5) 

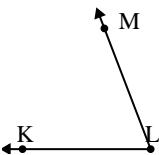
Which choice best represents $\angle KLM$?

A. 131°
 B. 25°
 C. 157°
 D. 51°

6) 

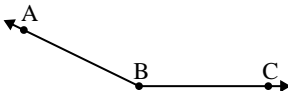
Which choice best represents $\angle ABC$?

A. 87°
 B. 56°
 C. 161°
 D. 110°

7) 

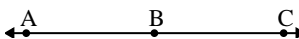
Which choice best represents $\angle KLM$?

A. 142°
 B. 36°
 C. 178°
 D. 69°

8) 

Which choice best represents $\angle ABC$?

A. 154°
 B. 179°
 C. 48°
 D. 7°

9) 

Which choice best represents $\angle ABC$?

A. 144°
 B. 180°
 C. 119°
 D. 46°

Answers

1. **B**
2. **B**
3. **D**
4. **D**
5. **D**
6. **C**
7. **D**
8. **A**
9. **B**