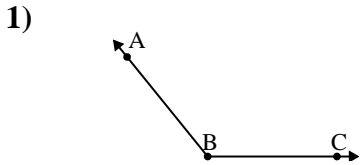




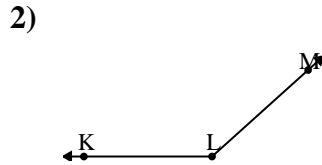
Solve each problem.

Answers



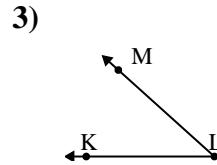
Which choice best represents $\angle ABC$?

- A. 129°
- B. 48°
- C. 153°
- D. 175°



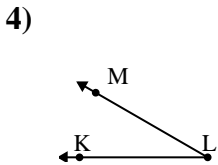
Which choice best represents $\angle KLM$?

- A. 176°
- B. 66°
- C. 40°
- D. 138°



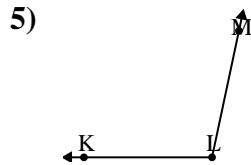
Which choice best represents $\angle KLM$?

- A. 148°
- B. 126°
- C. 42°
- D. 94°



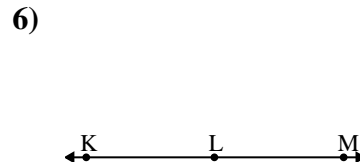
Which choice best represents $\angle KLM$?

- A. 30°
- B. 7°
- C. 156°
- D. 66°



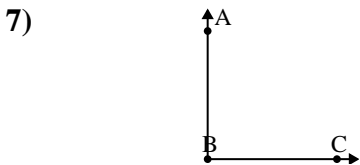
Which choice best represents $\angle KLM$?

- A. 129°
- B. 102°
- C. 13°
- D. 56°



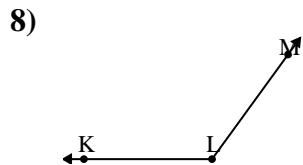
Which choice best represents $\angle KLM$?

- A. 28°
- B. 146°
- C. 2°
- D. 180°



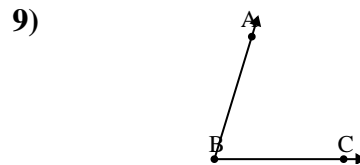
Which choice best represents $\angle ABC$?

- A. 35°
- B. 90°
- C. 172°
- D. 62°



Which choice best represents $\angle KLM$?

- A. 67°
- B. 153°
- C. 18°
- D. 126°



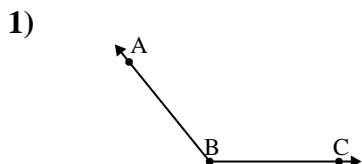
Which choice best represents $\angle ABC$?

- A. 123°
- B. 42°
- C. 157°
- D. 73°

1. _____
2. _____
3. _____
4. _____
5. _____
6. _____
7. _____
8. _____
9. _____

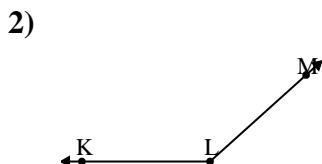


Solve each problem.



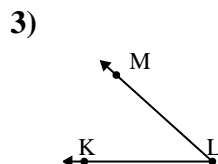
Which choice best represents $\angle ABC$?

- A. 129°
- B. 48°
- C. 153°
- D. 175°



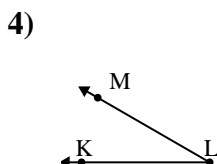
Which choice best represents $\angle KLM$?

- A. 176°
- B. 66°
- C. 40°
- D. 138°



Which choice best represents $\angle KLM$?

- A. 148°
- B. 126°
- C. 42°
- D. 94°



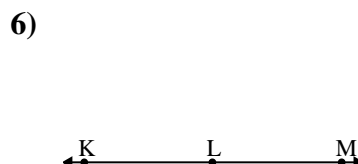
Which choice best represents $\angle KLM$?

- A. 30°
- B. 7°
- C. 156°
- D. 66°



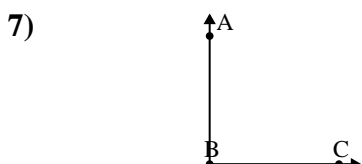
Which choice best represents $\angle KLM$?

- A. 129°
- B. 102°
- C. 13°
- D. 56°



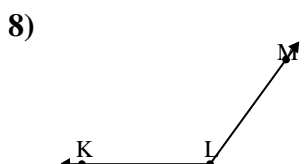
Which choice best represents $\angle KLM$?

- A. 28°
- B. 146°
- C. 2°
- D. 180°



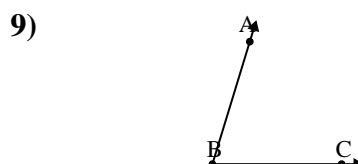
Which choice best represents $\angle ABC$?

- A. 35°
- B. 90°
- C. 172°
- D. 62°



Which choice best represents $\angle KLM$?

- A. 67°
- B. 153°
- C. 18°
- D. 126°



Which choice best represents $\angle ABC$?

- A. 123°
- B. 42°
- C. 157°
- D. 73°

Answers

- 1. **A**
- 2. **D**
- 3. **C**
- 4. **A**
- 5. **B**
- 6. **D**
- 7. **B**
- 8. **D**
- 9. **D**