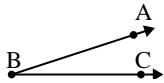




Solve each problem.

Answers

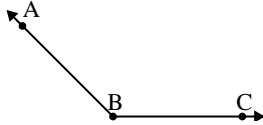
1)



Which choice best represents  $\angle ABC$ ?

- A.  $91^\circ$
- B.  $18^\circ$
- C.  $173^\circ$
- D.  $133^\circ$

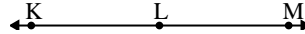
2)



Which choice best represents  $\angle ABC$ ?

- A.  $157^\circ$
- B.  $37^\circ$
- C.  $135^\circ$
- D.  $7^\circ$

3)



Which choice best represents  $\angle KLM$ ?

- A.  $57^\circ$
- B.  $180^\circ$
- C.  $12^\circ$
- D.  $158^\circ$

1. \_\_\_\_\_

2. \_\_\_\_\_

3. \_\_\_\_\_

4. \_\_\_\_\_

5. \_\_\_\_\_

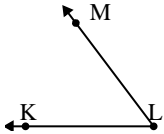
6. \_\_\_\_\_

7. \_\_\_\_\_

8. \_\_\_\_\_

9. \_\_\_\_\_

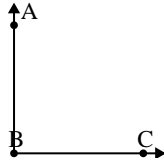
4)



Which choice best represents  $\angle KLM$ ?

- A.  $147^\circ$
- B.  $13^\circ$
- C.  $53^\circ$
- D.  $170^\circ$

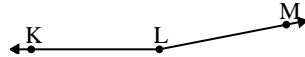
5)



Which choice best represents  $\angle ABC$ ?

- A.  $90^\circ$
- B.  $114^\circ$
- C.  $50^\circ$
- D.  $4^\circ$

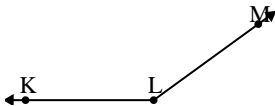
6)



Which choice best represents  $\angle KLM$ ?

- A.  $107^\circ$
- B.  $169^\circ$
- C.  $11^\circ$
- D.  $39^\circ$

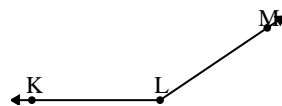
7)



Which choice best represents  $\angle KLM$ ?

- A.  $144^\circ$
- B.  $38^\circ$
- C.  $104^\circ$
- D.  $2^\circ$

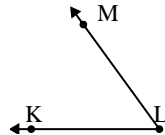
8)



Which choice best represents  $\angle KLM$ ?

- A.  $86^\circ$
- B.  $40^\circ$
- C.  $146^\circ$
- D.  $173^\circ$

9)



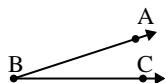
Which choice best represents  $\angle KLM$ ?

- A.  $54^\circ$
- B.  $89^\circ$
- C.  $28^\circ$
- D.  $151^\circ$



Solve each problem.

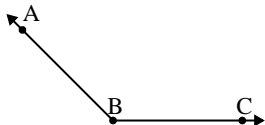
1)



Which choice best represents  $\angle ABC$ ?

- A.  $91^\circ$
- B.  $18^\circ$
- C.  $173^\circ$
- D.  $133^\circ$

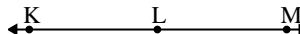
2)



Which choice best represents  $\angle ABC$ ?

- A.  $157^\circ$
- B.  $37^\circ$
- C.  $135^\circ$
- D.  $7^\circ$

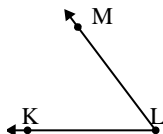
3)



Which choice best represents  $\angle KLM$ ?

- A.  $57^\circ$
- B.  $180^\circ$
- C.  $12^\circ$
- D.  $158^\circ$

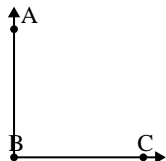
4)



Which choice best represents  $\angle KLM$ ?

- A.  $147^\circ$
- B.  $13^\circ$
- C.  $53^\circ$
- D.  $170^\circ$

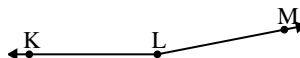
5)



Which choice best represents  $\angle ABC$ ?

- A.  $90^\circ$
- B.  $114^\circ$
- C.  $50^\circ$
- D.  $4^\circ$

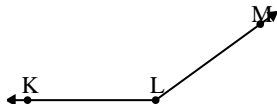
6)



Which choice best represents  $\angle KLM$ ?

- A.  $107^\circ$
- B.  $169^\circ$
- C.  $11^\circ$
- D.  $39^\circ$

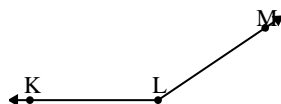
7)



Which choice best represents  $\angle KLM$ ?

- A.  $144^\circ$
- B.  $38^\circ$
- C.  $104^\circ$
- D.  $2^\circ$

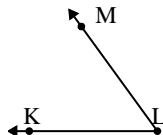
8)



Which choice best represents  $\angle KLM$ ?

- A.  $86^\circ$
- B.  $40^\circ$
- C.  $146^\circ$
- D.  $173^\circ$

9)



Which choice best represents  $\angle KLM$ ?

- A.  $54^\circ$
- B.  $89^\circ$
- C.  $28^\circ$
- D.  $151^\circ$

Answers

- 1. **B**
- 2. **C**
- 3. **B**
- 4. **C**
- 5. **A**
- 6. **B**
- 7. **A**
- 8. **C**
- 9. **A**