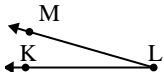




Solve each problem.

Answers

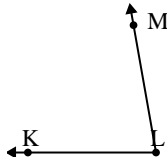
1)



Which choice best represents  $\angle KLM$ ?

- A.  $16^\circ$
- B.  $83^\circ$
- C.  $104^\circ$
- D.  $131^\circ$

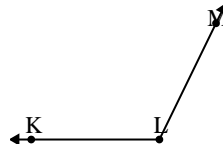
2)



Which choice best represents  $\angle KLM$ ?

- A.  $80^\circ$
- B.  $15^\circ$
- C.  $134^\circ$
- D.  $102^\circ$

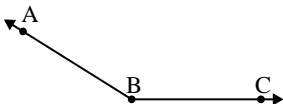
3)



Which choice best represents  $\angle KLM$ ?

- A.  $93^\circ$
- B.  $38^\circ$
- C.  $116^\circ$
- D.  $11^\circ$

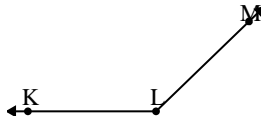
4)



Which choice best represents  $\angle ABC$ ?

- A.  $121^\circ$
- B.  $100^\circ$
- C.  $54^\circ$
- D.  $148^\circ$

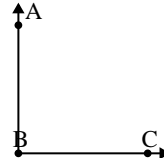
5)



Which choice best represents  $\angle KLM$ ?

- A.  $161^\circ$
- B.  $12^\circ$
- C.  $136^\circ$
- D.  $95^\circ$

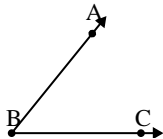
6)



Which choice best represents  $\angle ABC$ ?

- A.  $33^\circ$
- B.  $60^\circ$
- C.  $132^\circ$
- D.  $90^\circ$

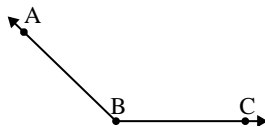
7)



Which choice best represents  $\angle ABC$ ?

- A.  $98^\circ$
- B.  $10^\circ$
- C.  $51^\circ$
- D.  $136^\circ$

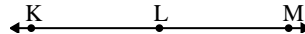
8)



Which choice best represents  $\angle ABC$ ?

- A.  $75^\circ$
- B.  $136^\circ$
- C.  $13^\circ$
- D.  $49^\circ$

9)



Which choice best represents  $\angle KLM$ ?

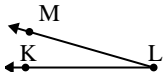
- A.  $7^\circ$
- B.  $157^\circ$
- C.  $104^\circ$
- D.  $180^\circ$

1. \_\_\_\_\_
2. \_\_\_\_\_
3. \_\_\_\_\_
4. \_\_\_\_\_
5. \_\_\_\_\_
6. \_\_\_\_\_
7. \_\_\_\_\_
8. \_\_\_\_\_
9. \_\_\_\_\_



Solve each problem.

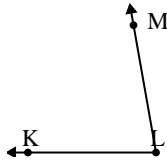
1)



Which choice best represents  $\angle KLM$ ?

- A.  $16^\circ$
- B.  $83^\circ$
- C.  $104^\circ$
- D.  $131^\circ$

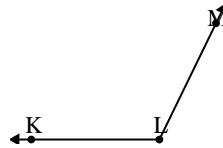
2)



Which choice best represents  $\angle KLM$ ?

- A.  $80^\circ$
- B.  $15^\circ$
- C.  $134^\circ$
- D.  $102^\circ$

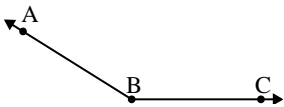
3)



Which choice best represents  $\angle KLM$ ?

- A.  $93^\circ$
- B.  $38^\circ$
- C.  $116^\circ$
- D.  $11^\circ$

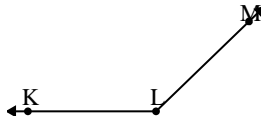
4)



Which choice best represents  $\angle ABC$ ?

- A.  $121^\circ$
- B.  $100^\circ$
- C.  $54^\circ$
- D.  $148^\circ$

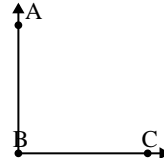
5)



Which choice best represents  $\angle KLM$ ?

- A.  $161^\circ$
- B.  $12^\circ$
- C.  $136^\circ$
- D.  $95^\circ$

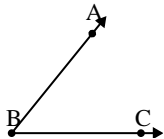
6)



Which choice best represents  $\angle ABC$ ?

- A.  $33^\circ$
- B.  $60^\circ$
- C.  $132^\circ$
- D.  $90^\circ$

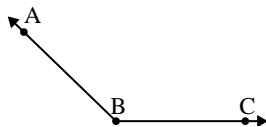
7)



Which choice best represents  $\angle ABC$ ?

- A.  $98^\circ$
- B.  $10^\circ$
- C.  $51^\circ$
- D.  $136^\circ$

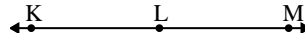
8)



Which choice best represents  $\angle ABC$ ?

- A.  $75^\circ$
- B.  $136^\circ$
- C.  $13^\circ$
- D.  $49^\circ$

9)



Which choice best represents  $\angle KLM$ ?

- A.  $7^\circ$
- B.  $157^\circ$
- C.  $104^\circ$
- D.  $180^\circ$

Answers

- 1.     **A**
- 2.     **A**
- 3.     **C**
- 4.     **D**
- 5.     **C**
- 6.     **D**
- 7.     **C**
- 8.     **B**
- 9.     **D**