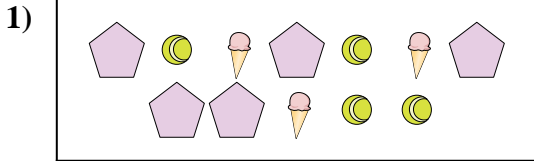




Compare the number of shapes.



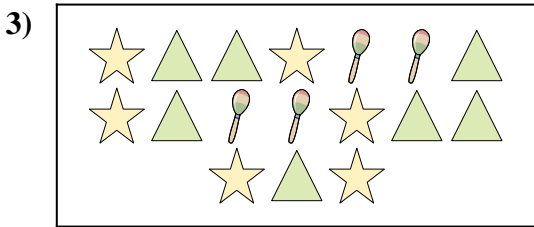
Are there less or less ?

- A.
- B.




Are there more or more ?

- A.
- B.




Are there less or less ?

- A.
- B.



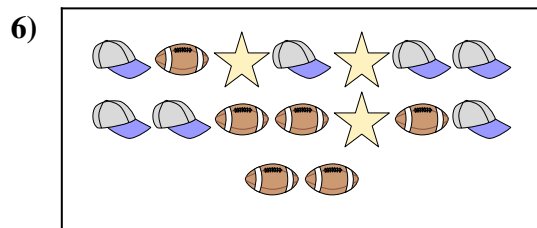
Are there less or less ?

- A.
- B.



Are there less or less ?

- A.
- B.



Are there less or less ?

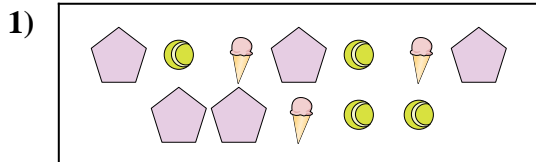
- A.
- B.

Answers

- 1. _____
- 2. _____
- 3. _____
- 4. _____
- 5. _____
- 6. _____




Compare the number of shapes.



Are there less or less ?

A.

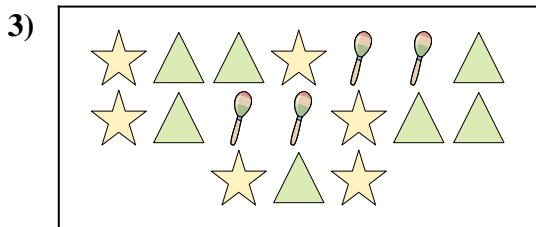
B.



Are there more or more ?

A.


B.



Are there less or less ?

A.


B.



Are there less or less ?

A.

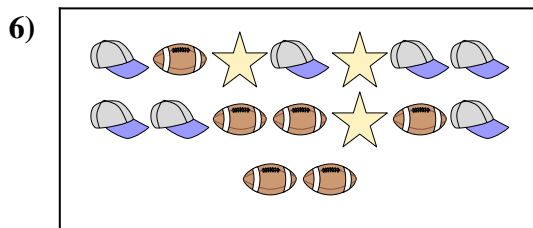
B.



Are there less or less ?

A.

B.



Are there less or less ?

A.

B.

Answers

1. **A**

2. **A**

3. **B**

4. **B**

5. **A**

6. **B**