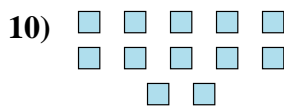
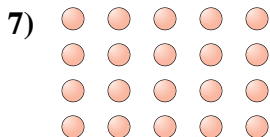
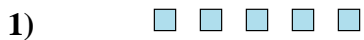




Determine if the number of shapes is even or odd.



Answers

1. _____

2. _____

3. _____

4. _____

5. _____

6. _____

7. _____

8. _____

9. _____

10. _____



Determine if the number of shapes is even or odd.



5




11



18



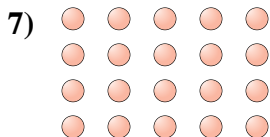
7



20



8



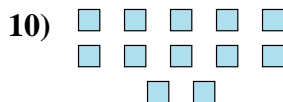
20



12



17



12

Answers

1. odd

2. odd

3. even

4. odd

5. even

6. even

7. even

8. even

9. odd

10. even