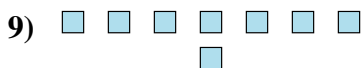
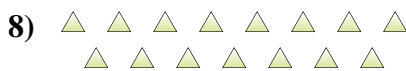
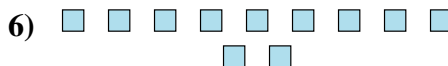
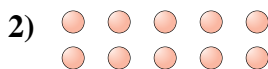





Determine if the number of shapes is even or odd.


Answers

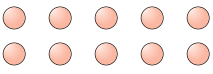



- 1. \_\_\_\_\_
- 2. \_\_\_\_\_
- 3. \_\_\_\_\_
- 4. \_\_\_\_\_
- 5. \_\_\_\_\_
- 6. \_\_\_\_\_
- 7. \_\_\_\_\_
- 8. \_\_\_\_\_
- 9. \_\_\_\_\_
- 10. \_\_\_\_\_



Determine if the number of shapes is even or odd.

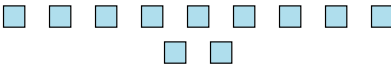
1)   
18

2)   
10

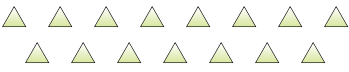
3)   
6

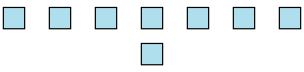
4)   
13


5)   
6

6)   
11

7)   
12

8)   
15

9)   
8

10)   
16

Answers

1. even

2. even

3. even

4. odd

5. even

6. odd

7. even

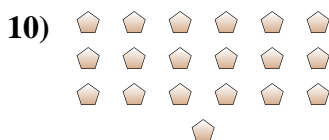
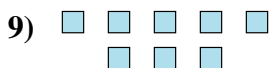
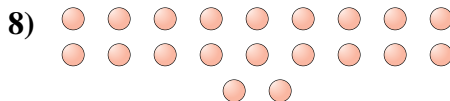
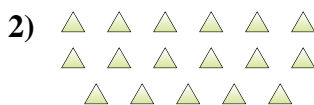
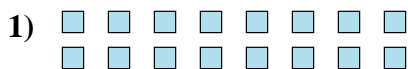
8. odd

9. even

10. even



Determine if the number of shapes is even or odd.



Answers

1. \_\_\_\_\_

2. \_\_\_\_\_

3. \_\_\_\_\_

4. \_\_\_\_\_

5. \_\_\_\_\_

6. \_\_\_\_\_

7. \_\_\_\_\_

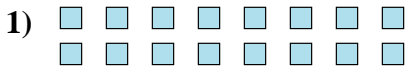
8. \_\_\_\_\_

9. \_\_\_\_\_

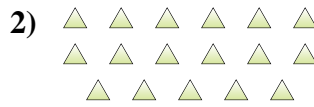
10. \_\_\_\_\_



Determine if the number of shapes is even or odd.



16



17



5



6



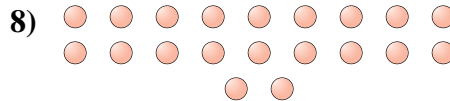
13



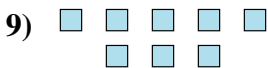
15



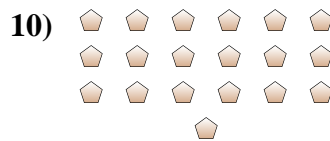
8



20



8



19

Answers

1. even

2. odd

3. odd

4. even

5. odd

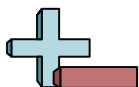
6. odd

7. even


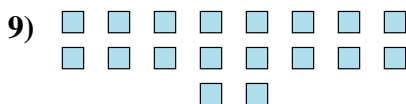
8. even

9. even

10. odd



Determine if the number of shapes is even or odd.



Answers

1. \_\_\_\_\_
2. \_\_\_\_\_
3. \_\_\_\_\_
4. \_\_\_\_\_
5. \_\_\_\_\_
6. \_\_\_\_\_
7. \_\_\_\_\_
8. \_\_\_\_\_
9. \_\_\_\_\_
10. \_\_\_\_\_



Determine if the number of shapes is even or odd.



5



12



6



8



5



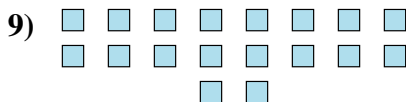
5




5



9



18



17

Answers

1. odd

2. even

3. even

4. even

5. odd

6. odd

7. odd

8. odd

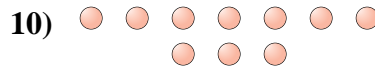
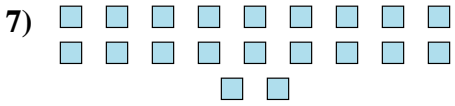
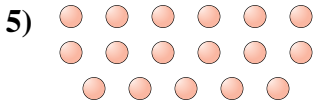
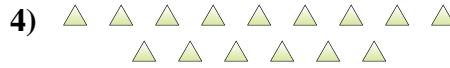
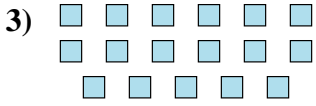
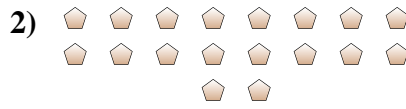
9. even

10. odd



Determine if the number of shapes is even or odd.

Answers



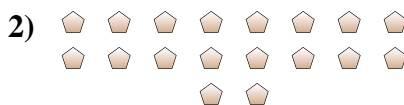
1. \_\_\_\_\_
2. \_\_\_\_\_
3. \_\_\_\_\_
4. \_\_\_\_\_
5. \_\_\_\_\_
6. \_\_\_\_\_
7. \_\_\_\_\_
8. \_\_\_\_\_
9. \_\_\_\_\_
10. \_\_\_\_\_



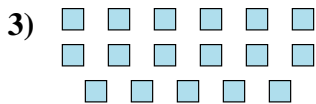
Determine if the number of shapes is even or odd.



19



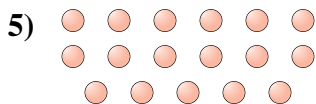
18



17



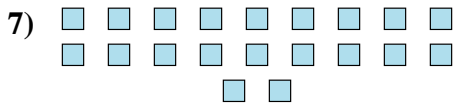
15



17



13



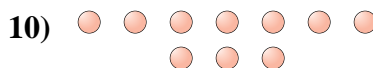
20



7



6



10

Answers

1. odd

2. even

3. odd

4. odd

5. odd

6. odd

7. even

8. odd

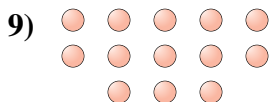

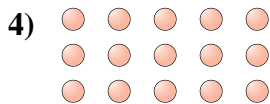
9. even

10. even





Determine if the number of shapes is even or odd.



Answers

1. \_\_\_\_\_

2. \_\_\_\_\_

3. \_\_\_\_\_

4. \_\_\_\_\_

5. \_\_\_\_\_

6. \_\_\_\_\_

7. \_\_\_\_\_

8. \_\_\_\_\_

9. \_\_\_\_\_

10. \_\_\_\_\_



Determine if the number of shapes is even or odd.



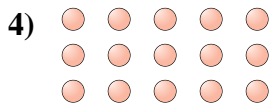
6




14



10



15



17



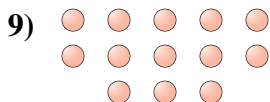
7



13



10



13



8

Answers

1. even

2. even

3. even

4. odd

5. odd

6. odd

7. odd

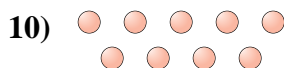
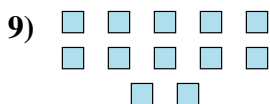
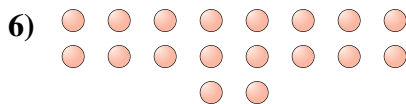
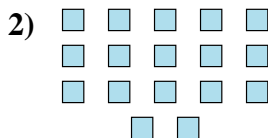
8. even

9. odd

10. even



Determine if the number of shapes is even or odd.



Answers

1. \_\_\_\_\_

2. \_\_\_\_\_

3. \_\_\_\_\_

4. \_\_\_\_\_

5. \_\_\_\_\_

6. \_\_\_\_\_

7. \_\_\_\_\_

8. \_\_\_\_\_

9. \_\_\_\_\_

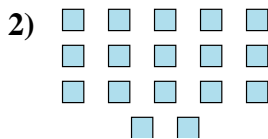
10. \_\_\_\_\_



Determine if the number of shapes is even or odd.



10



17



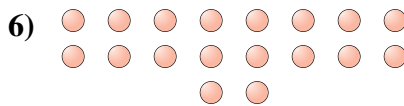
11



19



14



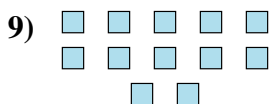
18



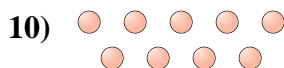
18



8



12



9

Answers

1. even

2. odd

3. odd

4. odd

5. even

6. even

7. even

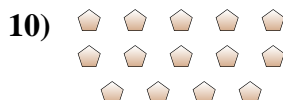
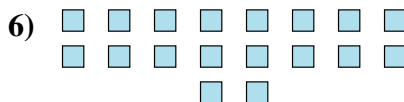

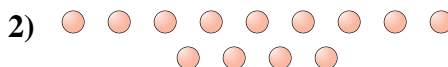
8. even

9. even

10. odd



Determine if the number of shapes is even or odd.



Answers

1. \_\_\_\_\_

2. \_\_\_\_\_

3. \_\_\_\_\_

4. \_\_\_\_\_

5. \_\_\_\_\_

6. \_\_\_\_\_

7. \_\_\_\_\_

8. \_\_\_\_\_

9. \_\_\_\_\_

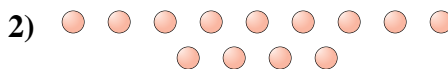
10. \_\_\_\_\_




Determine if the number of shapes is even or odd.



9



13



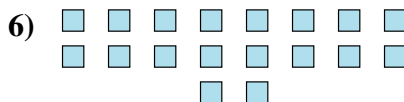
19



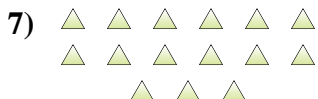
15



17



18



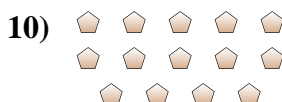
15



5



10



14

Answers

1. odd

2. odd

3. odd

4. odd

5. odd

6. even

7. odd

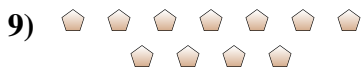
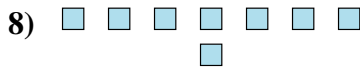
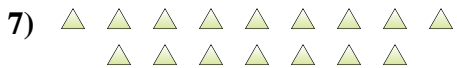
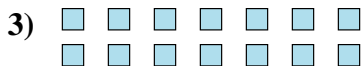
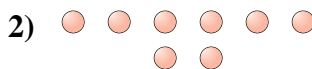
8. odd

9. even

10. even



Determine if the number of shapes is even or odd.



Answers

1. \_\_\_\_\_

2. \_\_\_\_\_

3. \_\_\_\_\_

4. \_\_\_\_\_

5. \_\_\_\_\_

6. \_\_\_\_\_

7. \_\_\_\_\_

8. \_\_\_\_\_

9. \_\_\_\_\_

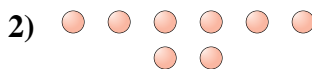
10. \_\_\_\_\_



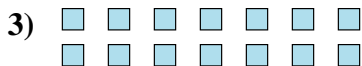
Determine if the number of shapes is even or odd.



15



8



14



10



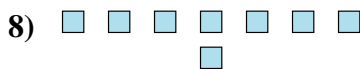
12



8



16



8



11



7

Answers

1. odd

2. even

3. even

4. even

5. even

6. even

7. even

8. even

9. odd

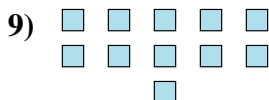
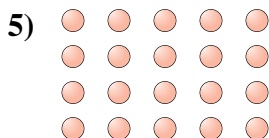
10. odd





Determine if the number of shapes is even or odd.

Answers



- 1. \_\_\_\_\_
- 2. \_\_\_\_\_
- 3. \_\_\_\_\_
- 4. \_\_\_\_\_
- 5. \_\_\_\_\_
- 6. \_\_\_\_\_
- 7. \_\_\_\_\_
- 8. \_\_\_\_\_
- 9. \_\_\_\_\_
- 10. \_\_\_\_\_



Determine if the number of shapes is even or odd.



7



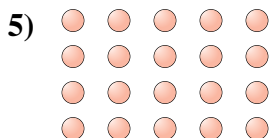
18



6



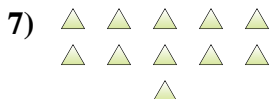
7



20



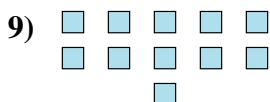
9



11



5



11



6

Answers

1. odd

2. even

3. even

4. odd

5. even

6. odd

7. odd

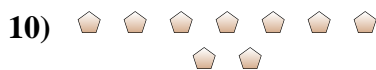
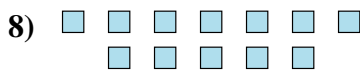
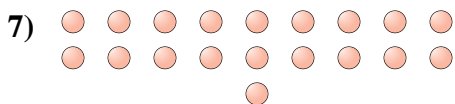
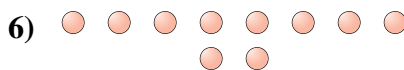

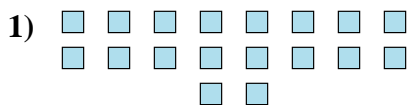
8. odd

9. odd

10. even



Determine if the number of shapes is even or odd.

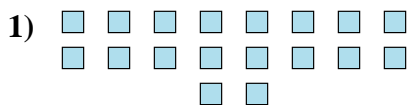


Answers


1. \_\_\_\_\_
2. \_\_\_\_\_
3. \_\_\_\_\_
4. \_\_\_\_\_
5. \_\_\_\_\_
6. \_\_\_\_\_
7. \_\_\_\_\_
8. \_\_\_\_\_
9. \_\_\_\_\_
10. \_\_\_\_\_



Determine if the number of shapes is even or odd.



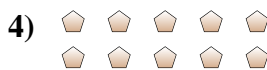
18



20



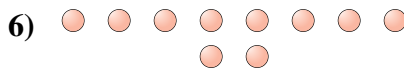
14



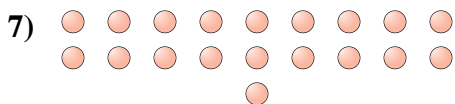
10



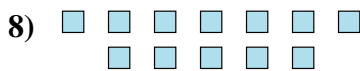
12



10



19



12



7



9

Answers

1. even

2. even

3. even

4. even

5. even

6. even

7. odd

8. even

9. odd

10. odd