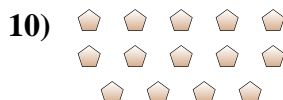
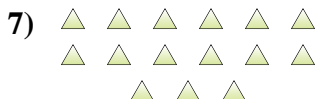
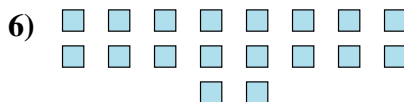

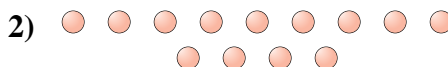




Determine if the number of shapes is even or odd.



Answers

1. _____

2. _____

3. _____

4. _____

5. _____

6. _____

7. _____

8. _____

9. _____

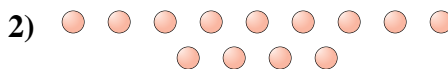
10. _____




Determine if the number of shapes is even or odd.



9



13



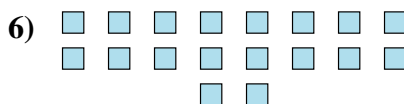
19



15



17



18



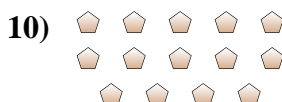
15



5



10



14

Answers

1. odd

2. odd

3. odd

4. odd

5. odd

6. even

7. odd

8. odd

9. even

10. even