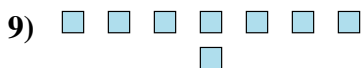
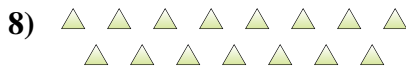
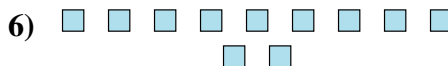
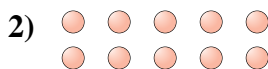





Determine if the number of shapes is even or odd.




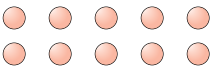
Answers


1. \_\_\_\_\_
2. \_\_\_\_\_
3. \_\_\_\_\_
4. \_\_\_\_\_
5. \_\_\_\_\_
6. \_\_\_\_\_
7. \_\_\_\_\_
8. \_\_\_\_\_
9. \_\_\_\_\_
10. \_\_\_\_\_



Determine if the number of shapes is even or odd.

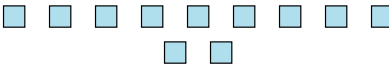
1)   
18

2)   
10

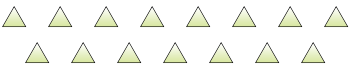
3)   
6

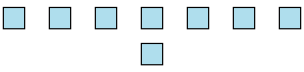
4)   
13


5)   
6

6)   
11

7)   
12

8)   
15

9)   
8

10)   
16

Answers

1. even

2. even

3. even

4. odd

5. even

6. odd

7. even

8. odd

9. even

10. even