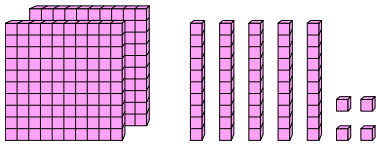




Find the value each set of blocks represents.

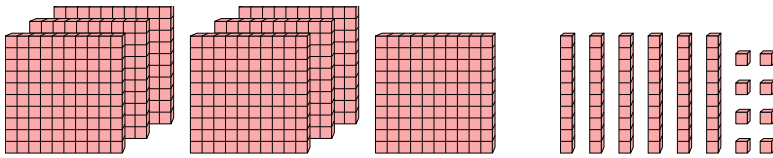
Answers

1)



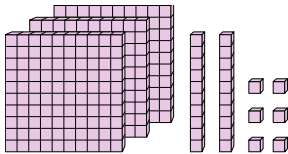
1. _____

2)



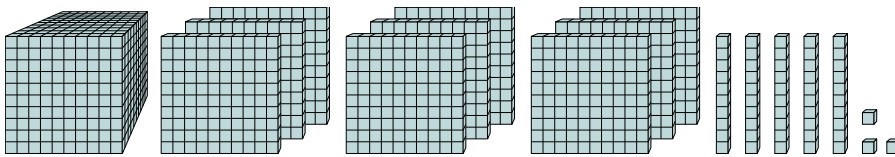
2. _____

3)



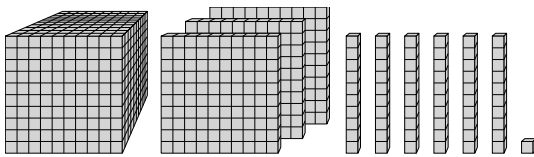
3. _____

4)



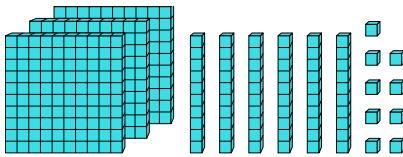
4. _____

5)



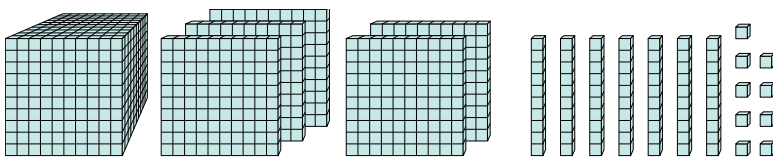
5. _____

6)



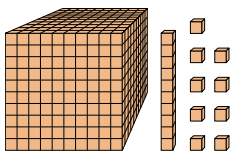
6. _____

7)



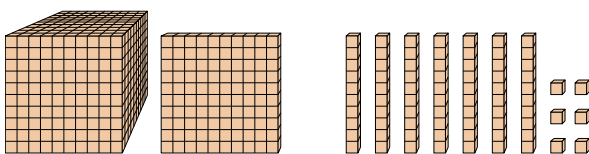
7. _____

8)



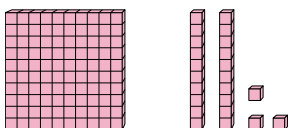
8. _____

9)



9. _____

10)



10. _____



Find the value each set of blocks represents.

1)

2)

3)

4)

5)

6)

7)

8)

9)

10)

Answers

1. 254
2. 768
3. 326
4. 1,953
5. 1,361
6. 369
7. 1,579
8. 1,019
9. 1,176
10. 123