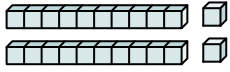




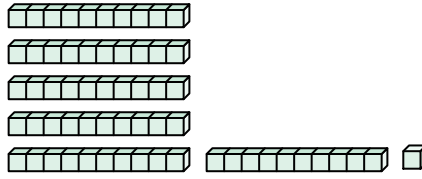
Count the total number of small blocks.

Answers

1)



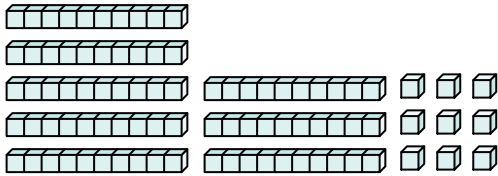
2)



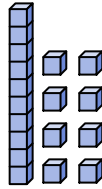
1. _____

2. _____

3)



4)



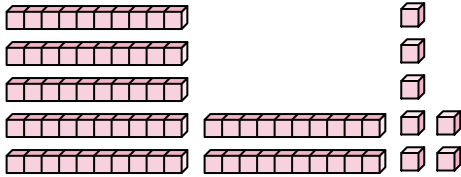
3. _____

4. _____

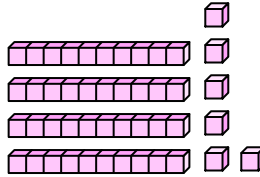
5. _____

6. _____

5)



6)



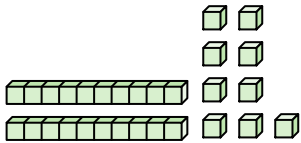
7. _____

8. _____

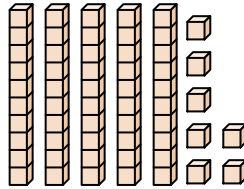
9. _____

10. _____

7)



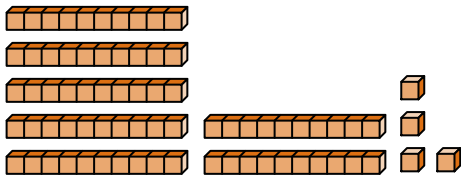
8)



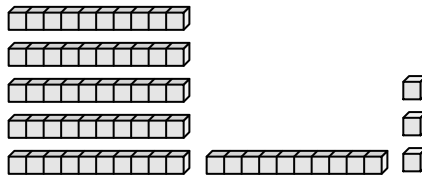
11. _____

12. _____

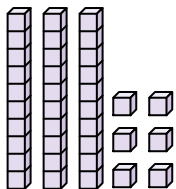
9)



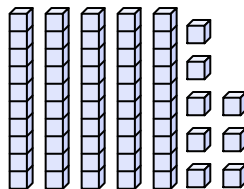
10)



11)



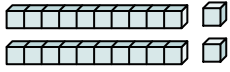
12)



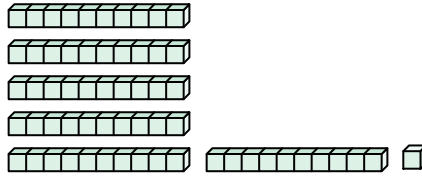


Count the total number of small blocks.

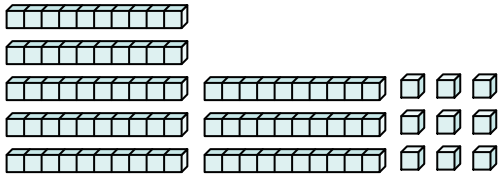
1)



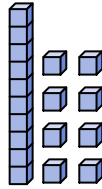
2)



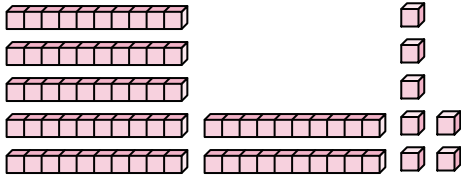
3)



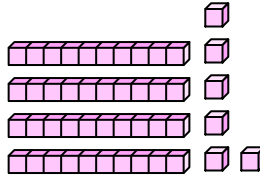
4)



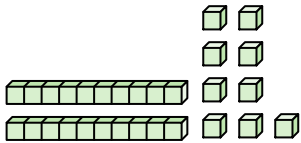
5)



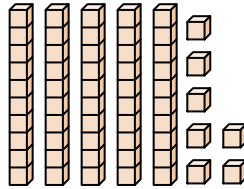
6)



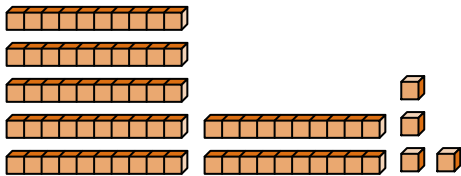
7)



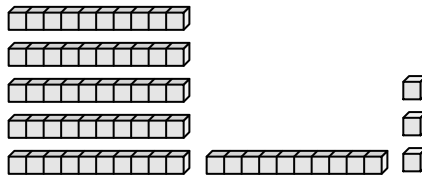
8)



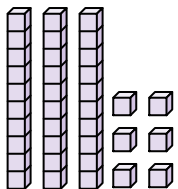
9)



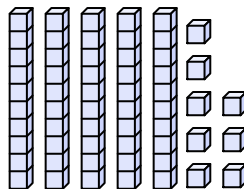
10)



11)



12)



Answers

1. 22

2. 61

3. 89

4. 18

5. 77

6. 46

7. 29

8. 57

9. 74

10. 63

11. 36

12. 58



Count the total number of small blocks.

61

63

46

89

18

77

29

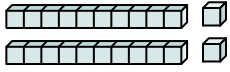
57

74

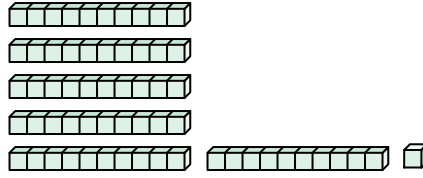
22

Answers

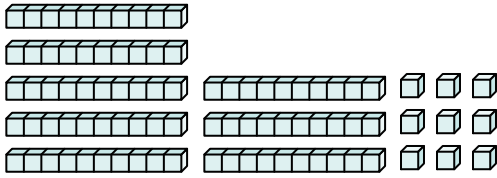
1)



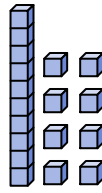
2)



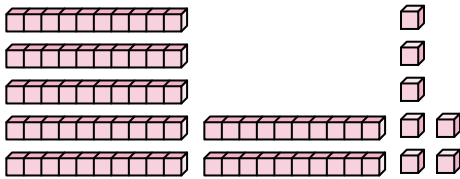
3)



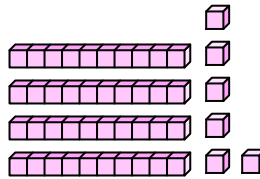
4)



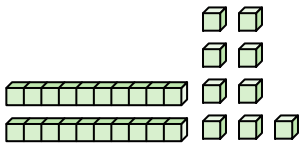
5)



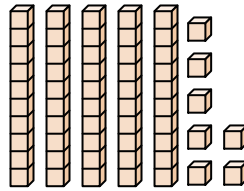
6)



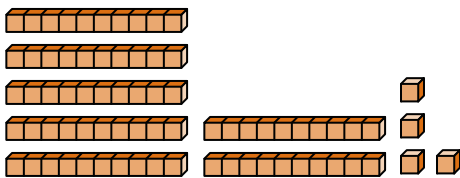
7)



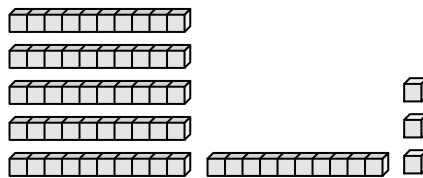
8)



9)



10)



1. _____
2. _____
3. _____
4. _____
5. _____
6. _____
7. _____
8. _____
9. _____
10. _____