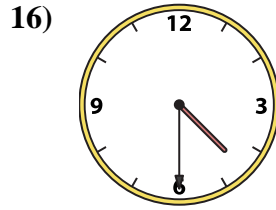
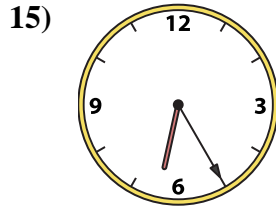
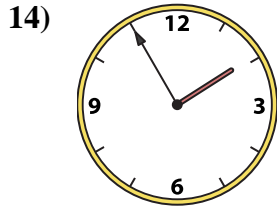
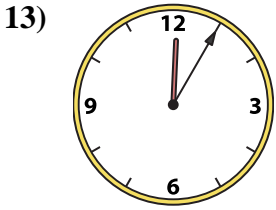
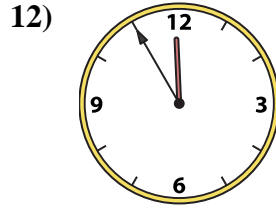
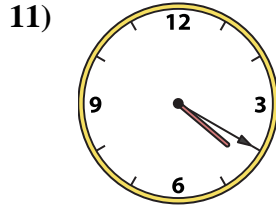
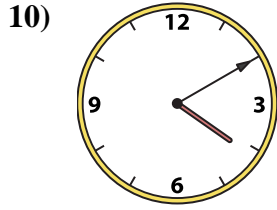
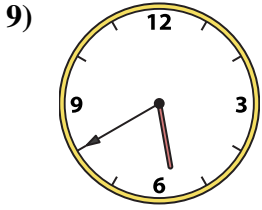
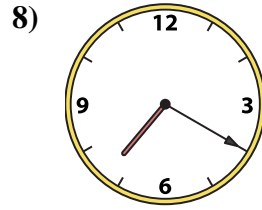
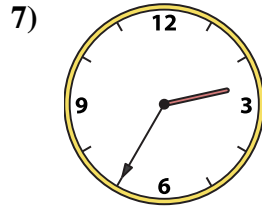
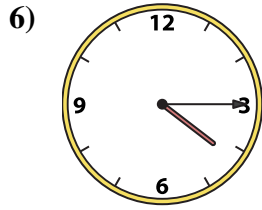
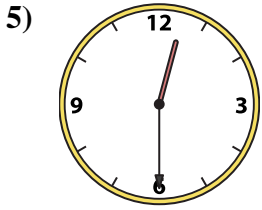
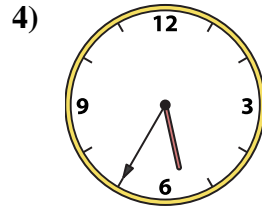
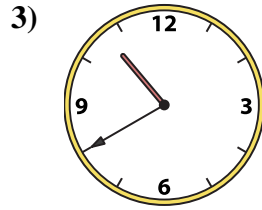
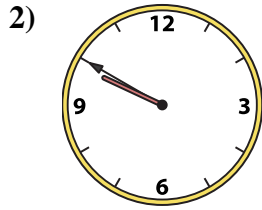
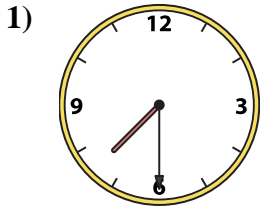




Match the analog clock to the digital clock.

Answers



A.

B.

C.

D.

E.

F.

G.

H.

I.

J.

K.

L.

M.

N.

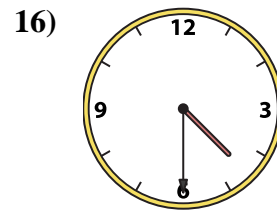
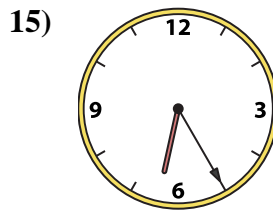
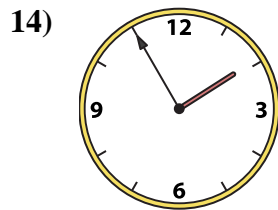
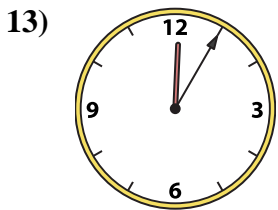
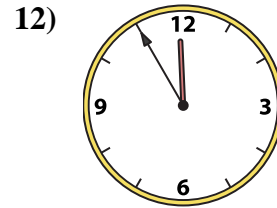
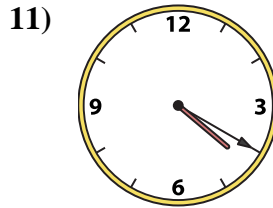
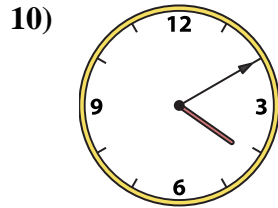
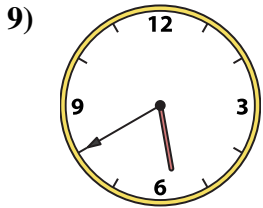
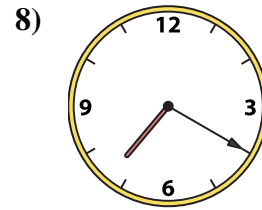
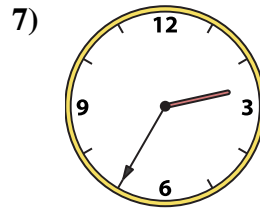
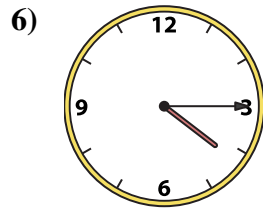
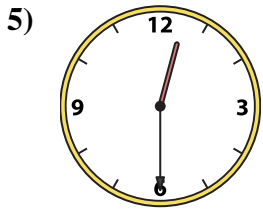
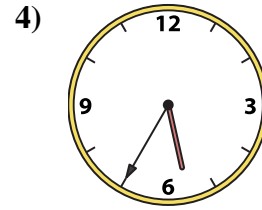
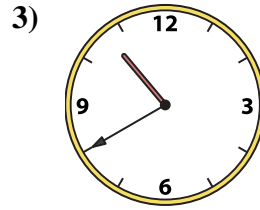
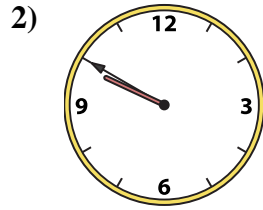
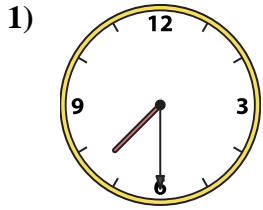
O.

P.

1. _____
2. _____
3. _____
4. _____
5. _____
6. _____
7. _____
8. _____
9. _____
10. _____
11. _____
12. _____
13. _____
14. _____
15. _____
16. _____



Match the analog clock to the digital clock.



A. 7:20

B. 5:35

C. 4:15

D. 7:30

E. 4:20

F. 11:55

G. 12:30

H. 1:55

I. 5:40

J. 4:10

K. 12:05

L. 4:30

M. 6:25

N. 2:35

O. 9:50

P. 10:40

Answers

1. **D**

2. **O**

3. **P**

4. **B**

5. **G**

6. **C**

7. **N**

8. **A**

9. **I**

10. **J**

11. **E**

12. **F**

13. **K**

14. **H**

15. **M**

16. **L**