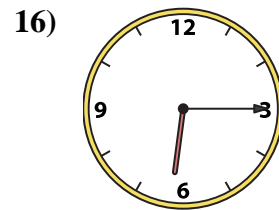
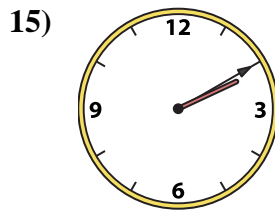
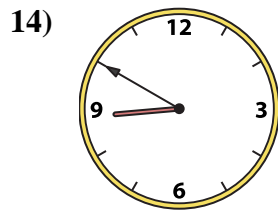
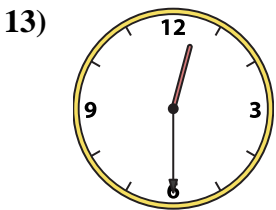
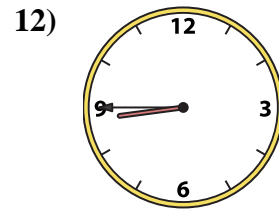
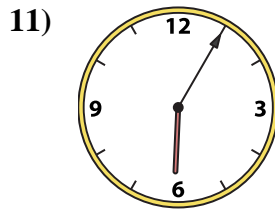
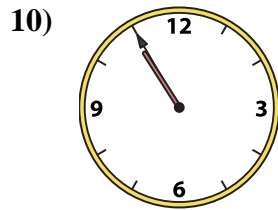
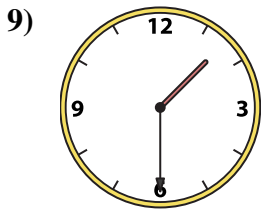
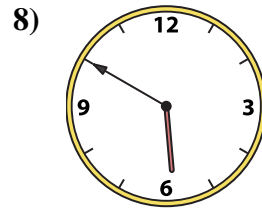
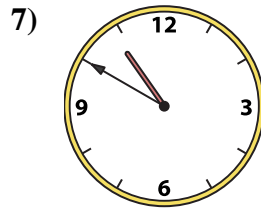
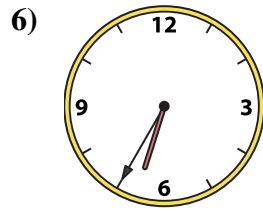
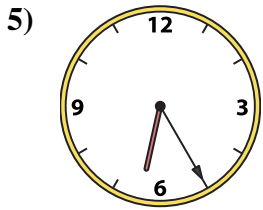
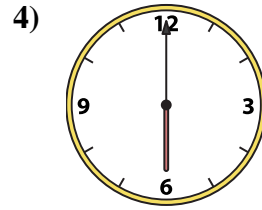
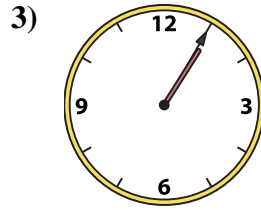
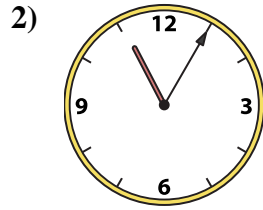
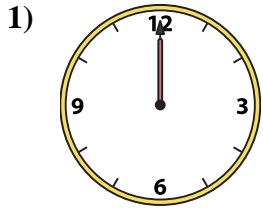




Match the analog clock to the digital clock.



Answers

1. _____
2. _____
3. _____
4. _____
5. _____
6. _____
7. _____
8. _____
9. _____
10. _____
11. _____
12. _____
13. _____
14. _____
15. _____
16. _____

A. 6:05

B. 1:30

C. 6:00

D. 6:35

E. 12:00

F. 2:10

G. 12:30

H. 10:50

I. 1:05

J. 8:45

K. 8:50

L. 5:50

M. 6:25

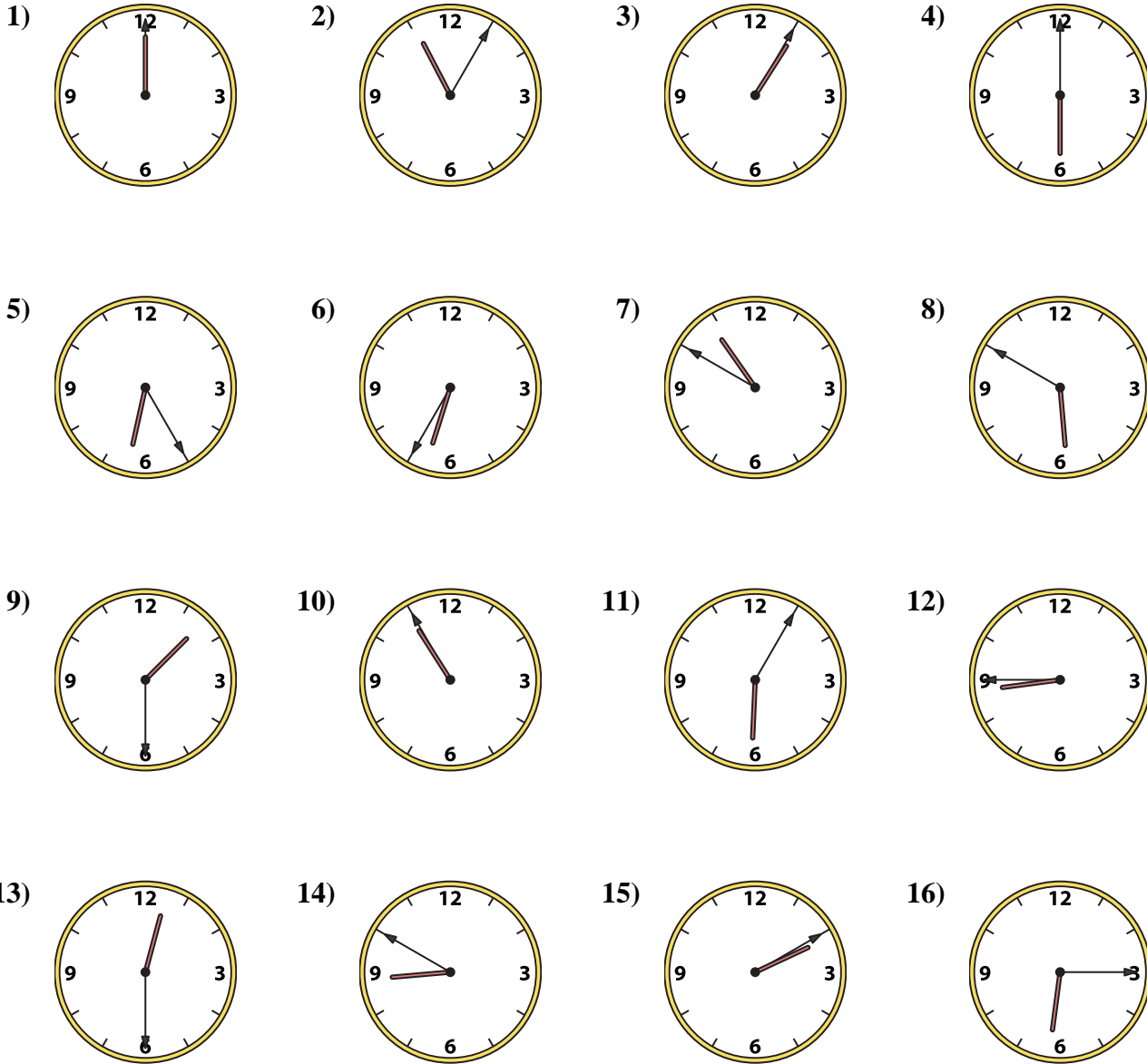
N. 10:55

O. 11:05

P. 6:15



Match the analog clock to the digital clock.



- A. 6:05
- B. 1:30
- C. 6:00
- D. 6:35
- E. 12:00
- F. 2:10
- G. 12:30
- H. 10:50
- I. 1:05
- J. 8:45
- K. 8:50
- L. 5:50
- M. 6:25
- N. 10:55
- O. 11:05
- P. 6:15

Answers

- 1. **E**
- 2. **O**
- 3. **I**
- 4. **C**
- 5. **M**
- 6. **D**
- 7. **H**
- 8. **L**
- 9. **B**
- 10. **N**
- 11. **A**
- 12. **J**
- 13. **G**
- 14. **K**
- 15. **F**
- 16. **P**