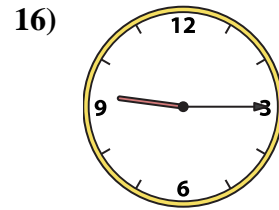
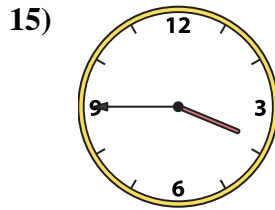
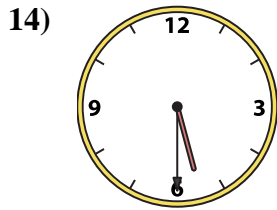
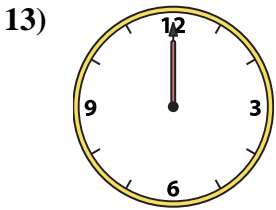
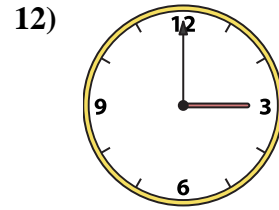
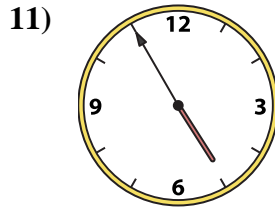
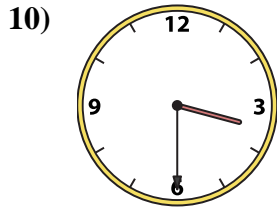
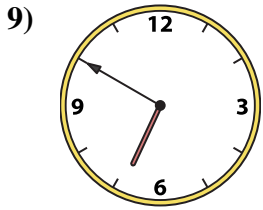
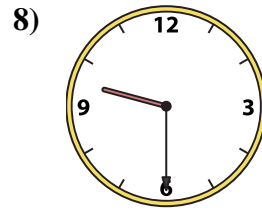
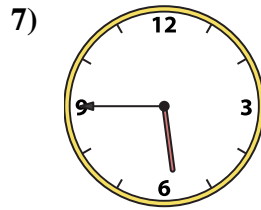
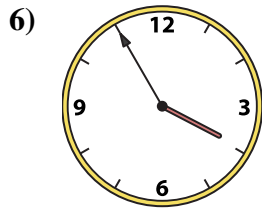
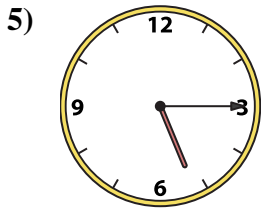
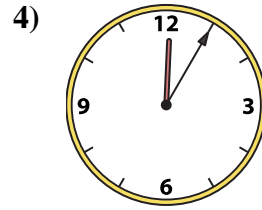
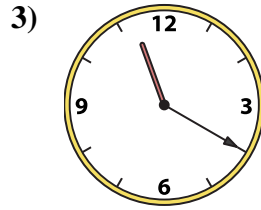
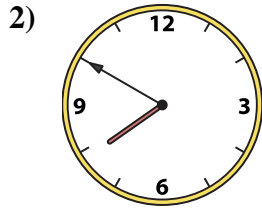





Match the analog clock to the digital clock.



A. 5:45

B. 3:00

C. 3:45

D. 12:05

E. 3:30

F. 6:50

G. 7:50

H. 12:00

I. 9:30

J. 3:55

K. 4:55

L. 8:55

M. 5:15

N. 9:15

O. 11:20

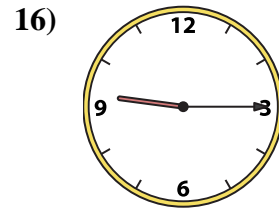
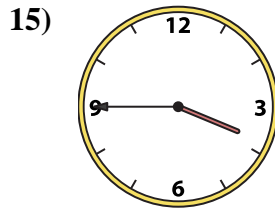
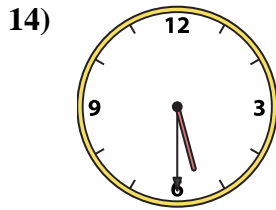
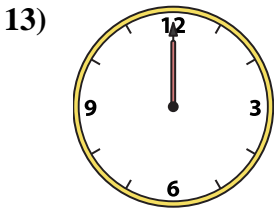
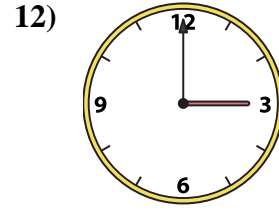
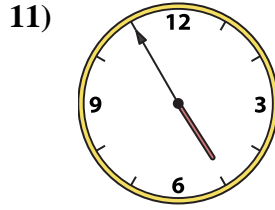
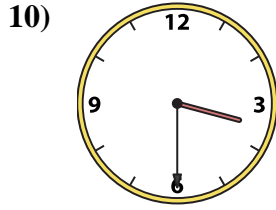
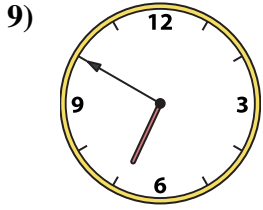
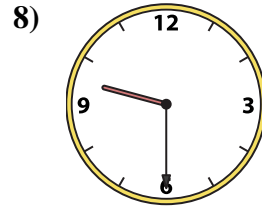
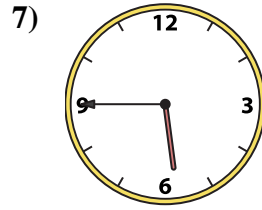
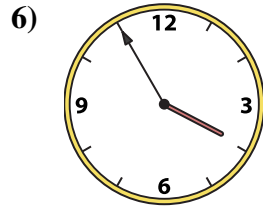
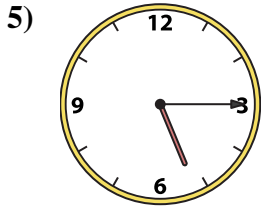
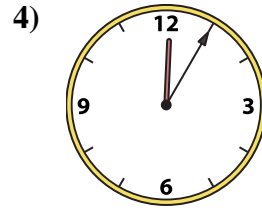
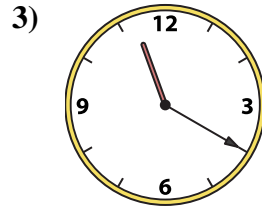
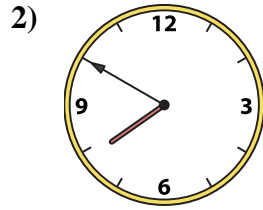

P. 5:30

Answers

1. \_\_\_\_\_
2. \_\_\_\_\_
3. \_\_\_\_\_
4. \_\_\_\_\_
5. \_\_\_\_\_
6. \_\_\_\_\_
7. \_\_\_\_\_
8. \_\_\_\_\_
9. \_\_\_\_\_
10. \_\_\_\_\_
11. \_\_\_\_\_
12. \_\_\_\_\_
13. \_\_\_\_\_
14. \_\_\_\_\_
15. \_\_\_\_\_
16. \_\_\_\_\_



Match the analog clock to the digital clock.



A. 5:45

B. 3:00

C. 3:45

D. 12:05

E. 3:30

F. 6:50

G. 7:50

H. 12:00

I. 9:30

J. 3:55

K. 4:55

L. 8:55

M. 5:15

N. 9:15

O. 11:20

P. 5:30

**Answers**

1. **L**

2. **G**

3. **O**

4. **D**

5. **M**

6. **J**

7. **A**

8. **I**

9. **F**

10. **E**

11. **K**

12. **B**

13. **H**

14. **P**

15. **C**

16. **N**