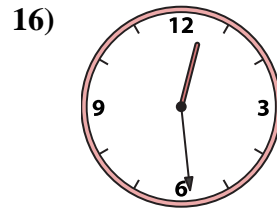
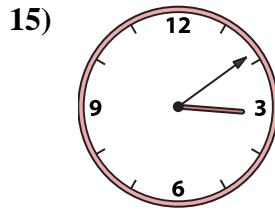
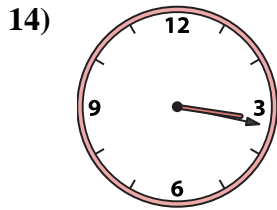
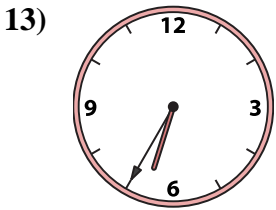
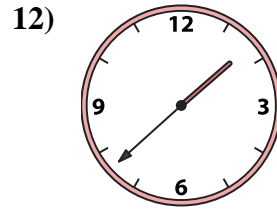
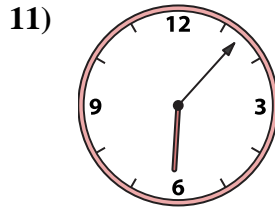
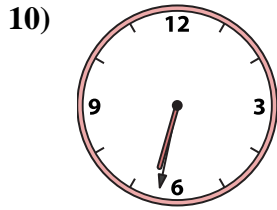
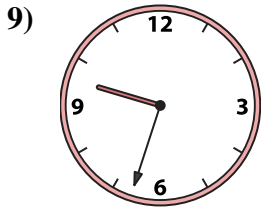
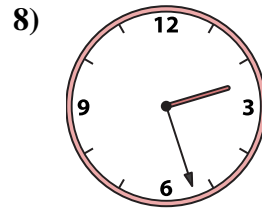
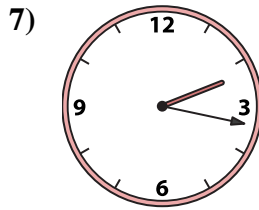
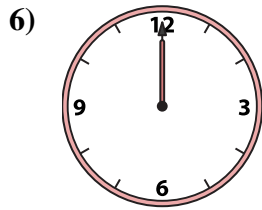
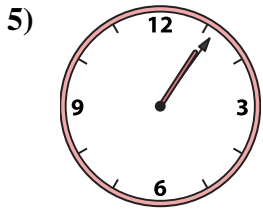
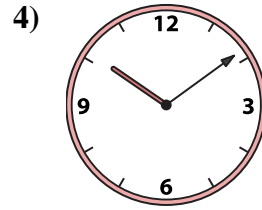
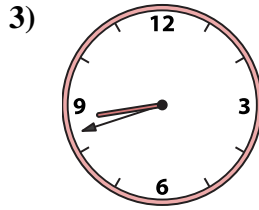
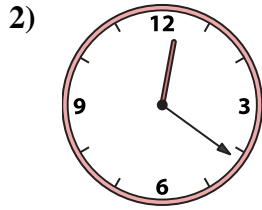
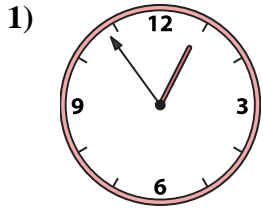




Match the analog clock to the digital clock.



A. 12:54

B. 6:35

C. 1:06

D. 12:21

E. 6:32

F. 12:00

G. 3:09

H. 8:42

I. 9:33

J. 10:09

K. 2:27

L. 1:38

M. 3:17

N. 2:17

O. 6:07

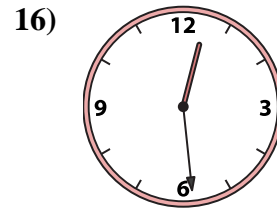
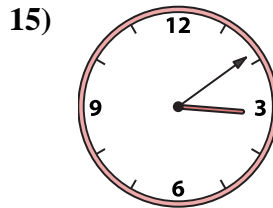
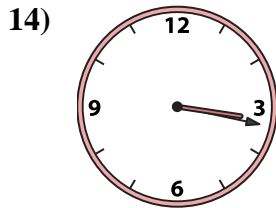
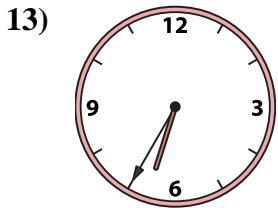
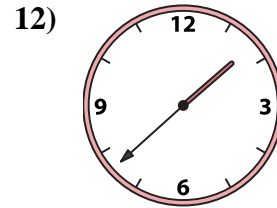
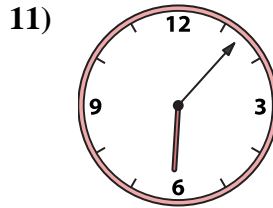
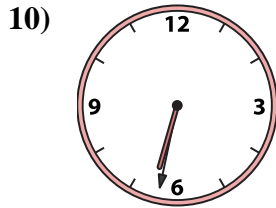
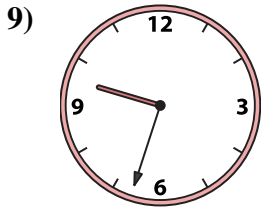
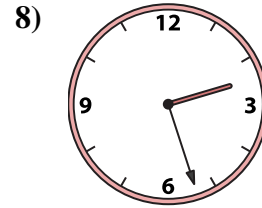
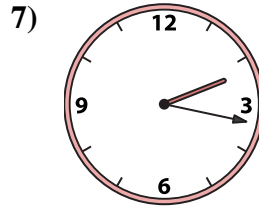
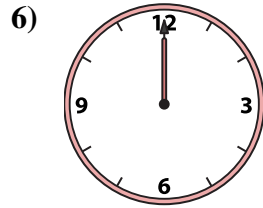

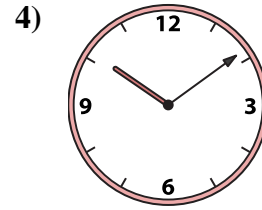
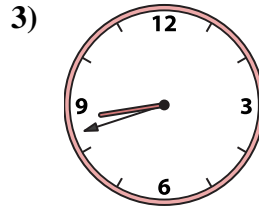
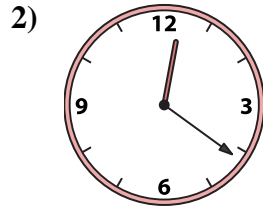
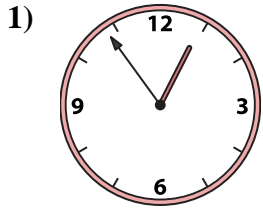
P. 12:29

Answers

1. _____
2. _____
3. _____
4. _____
5. _____
6. _____
7. _____
8. _____
9. _____
10. _____
11. _____
12. _____
13. _____
14. _____
15. _____
16. _____



Match the analog clock to the digital clock.



A. **12:54**

B. **6:35**

C. **1:06**

D. **12:21**

E. **6:32**

F. **12:00**

G. **3:09**

H. **8:42**

I. **9:33**

J. **10:09**

K. **2:27**

L. **1:38**

M. **3:17**

N. **2:17**

O. **6:07**

P. **12:29**

Answers

1. **A**

2. **D**

3. **H**

4. **J**

5. **C**

6. **F**

7. **N**

8. **K**

9. **I**

10. **E**

11. **O**

12. **L**

13. **B**

14. **M**

15. **G**

16. **P**