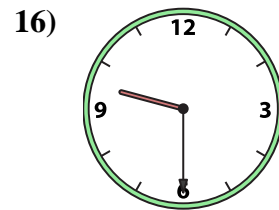
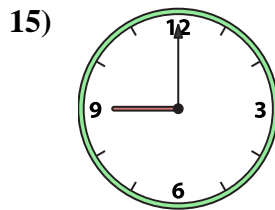
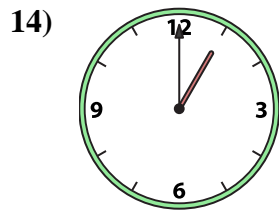
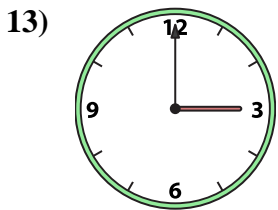
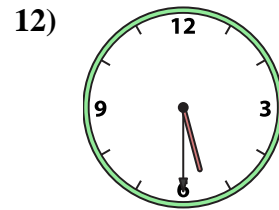
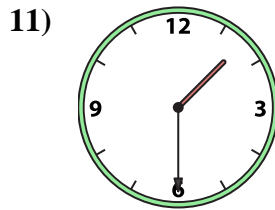
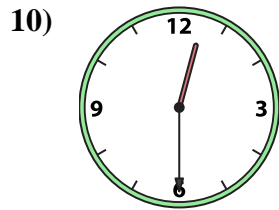
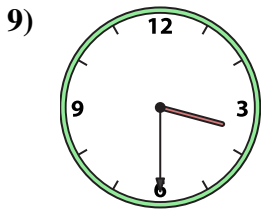
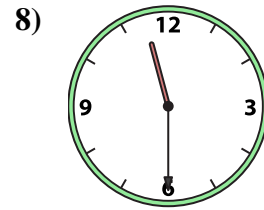
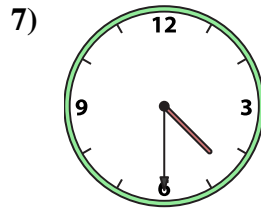
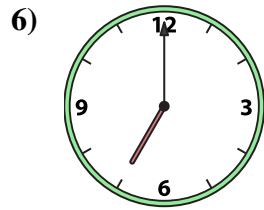
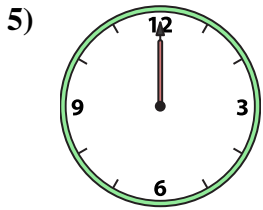
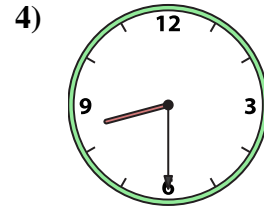
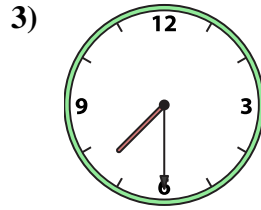
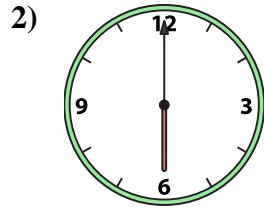
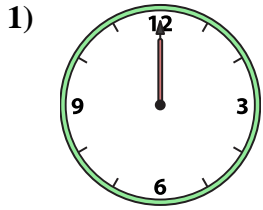




Match the analog clock to the digital clock.



A. 1:30

B. 12:00

C. 7:00

D. 8:30

E. 3:30

F. 12:30

G. 5:30

H. 1:00

I. 9:30

J. 4:30

K. 11:30

L. 7:30

M. 3:00

N. 12:00

O. 9:00

P. 6:00

Answers

1. _____

2. _____

3. _____

4. _____

5. _____

6. _____

7. _____

8. _____

9. _____

10. _____

11. _____

12. _____

13. _____

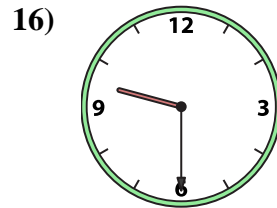
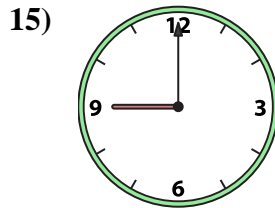
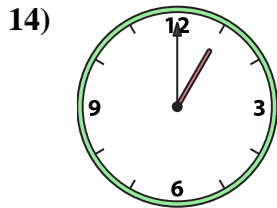
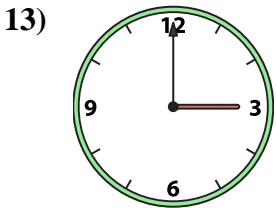
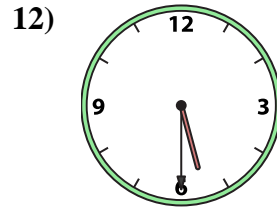
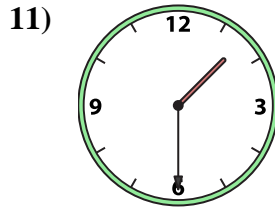
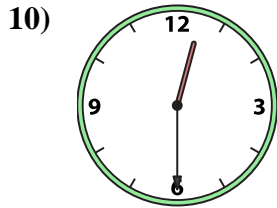
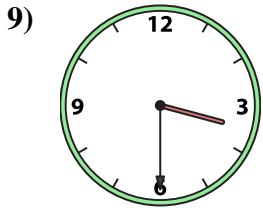
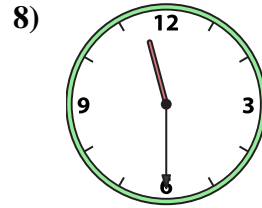
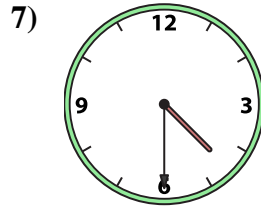
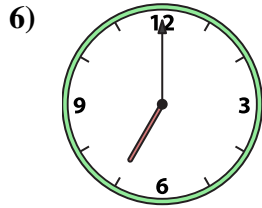
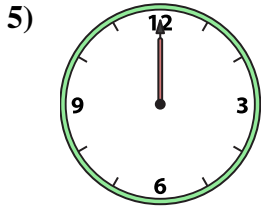
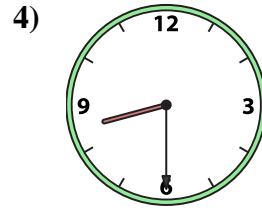
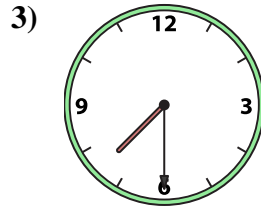
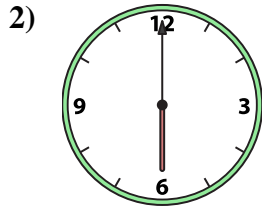
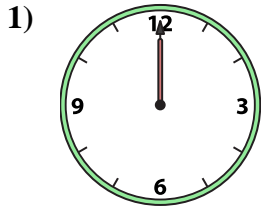
14. _____

15. _____

16. _____



Match the analog clock to the digital clock.



A. 1:30

B. 12:00

C. 7:00

D. 8:30

E. 3:30

F. 12:30

G. 5:30

H. 1:00

I. 9:30

J. 4:30

K. 11:30

L. 7:30

M. 3:00

N. 12:00

O. 9:00

P. 6:00

Answers

1. **B**

2. **P**

3. **L**

4. **D**

5. **N**

6. **C**

7. **J**

8. **K**

9. **E**

10. **F**

11. **A**

12. **G**

13. **M**

14. **H**

15. **O**

16. **I**