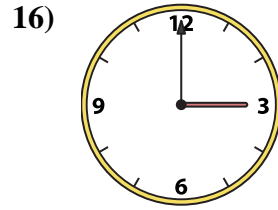
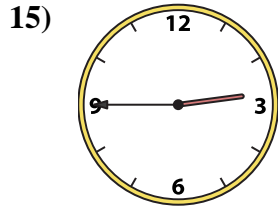
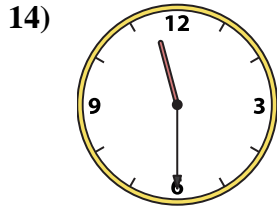
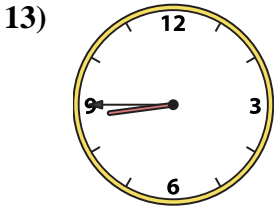
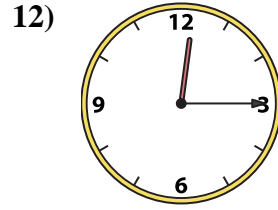
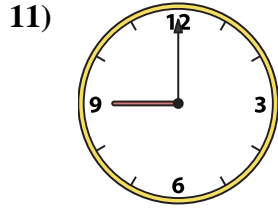
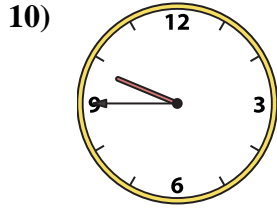
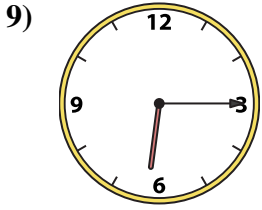
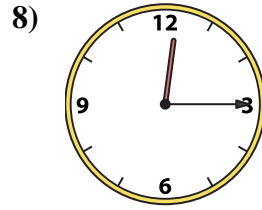
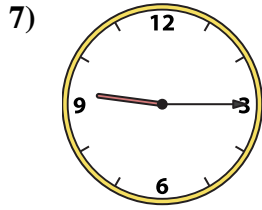

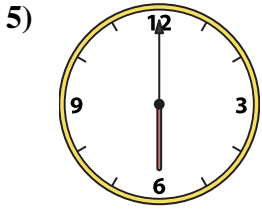
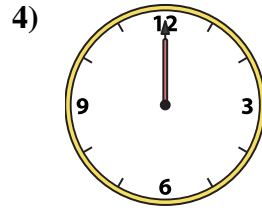
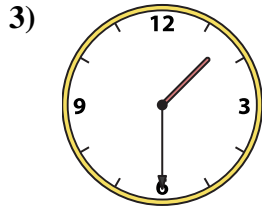
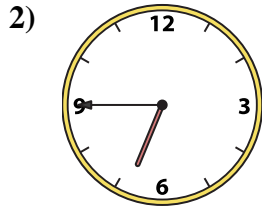
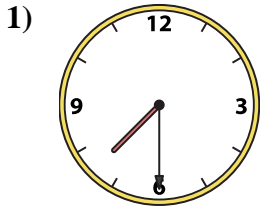




Match the analog clock to the digital clock.

Answers



A. 9:15

B. 6:45

C. 6:15

D. 2:45

E. 10:45

F. 7:30

G. 8:45

H. 12:15

I. 6:00

J. 9:45

K. 1:30

L. 3:00

M. 9:00

N. 11:30

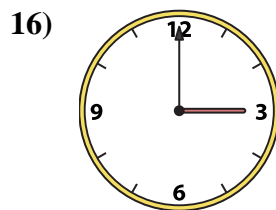
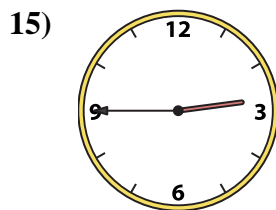
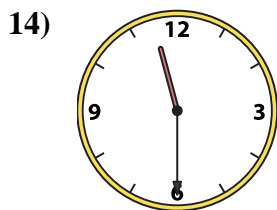
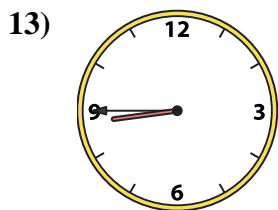
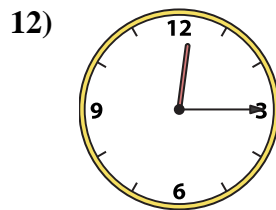
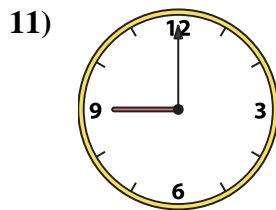
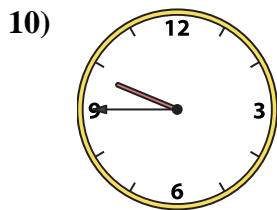
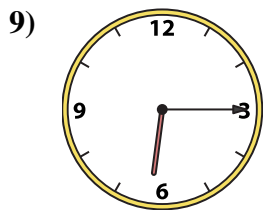
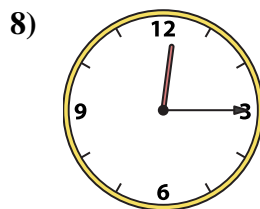
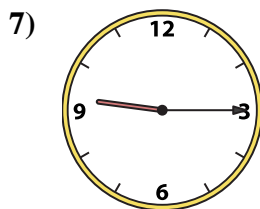
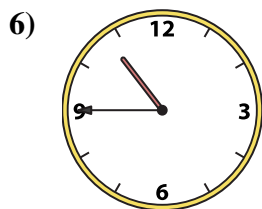
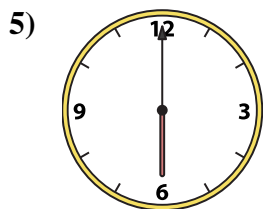
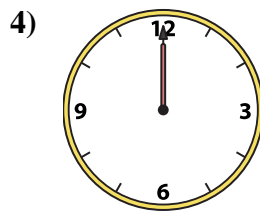
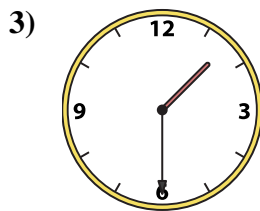
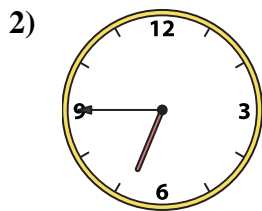
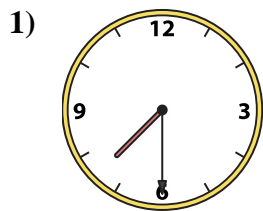
O. 12:15

P. 12:00

1. _____
2. _____
3. _____
4. _____
5. _____
6. _____
7. _____
8. _____
9. _____
10. _____
11. _____
12. _____
13. _____
14. _____
15. _____
16. _____



Match the analog clock to the digital clock.



A. 9:15

B. 6:45

C. 6:15

D. 2:45

E. 10:45

F. 7:30

G. 8:45

H. 12:15

I. 6:00

J. 9:45

K. 1:30

L. 3:00

M. 9:00

N. 11:30

O. 12:15

P. 12:00

Answers

1. **F**

2. **B**

3. **K**

4. **P**

5. **I**

6. **E**

7. **A**

8. **O**

9. **C**

10. **J**

11. **M**

12. **H**

13. **G**

14. **N**

15. **D**

16. **L**