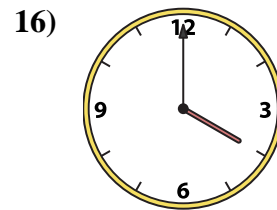
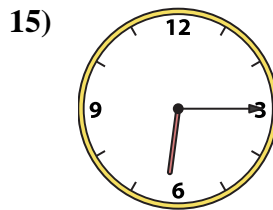
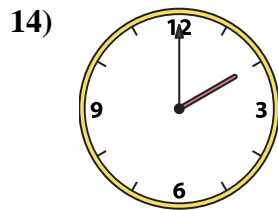
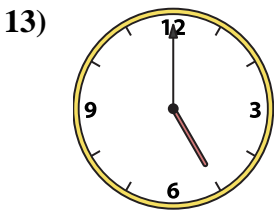
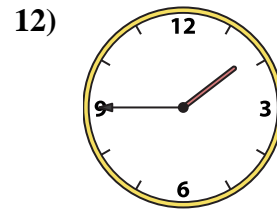
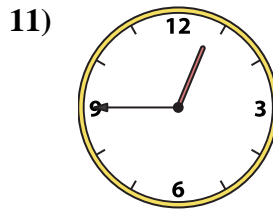
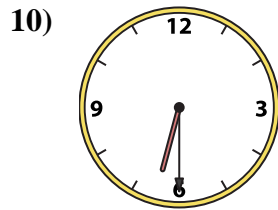
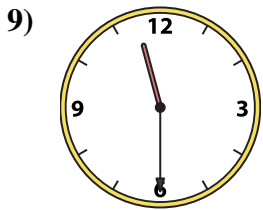
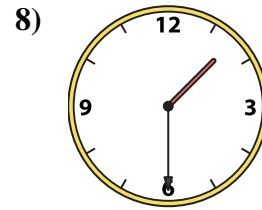
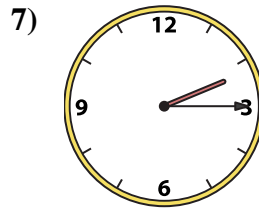
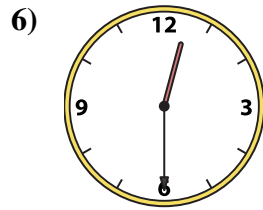
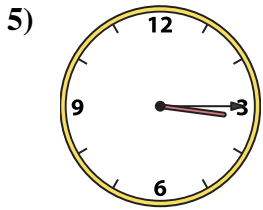
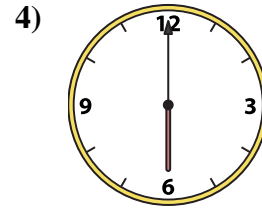
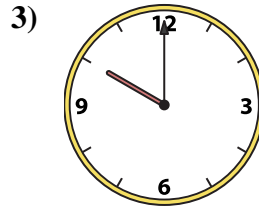
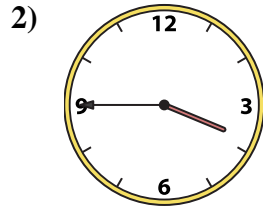
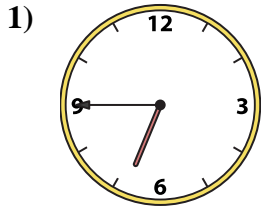




Match the analog clock to the digital clock.



A. 6:30

B. 6:15

C. 1:30

D. 5:00

E. 6:00

F. 6:45

G. 2:15

H. 12:45

I. 11:30

J. 2:00

K. 3:45

L. 12:30

M. 4:00

N. 10:00

O. 3:15

P. 1:45

Answers

1. \_\_\_\_\_

2. \_\_\_\_\_

3. \_\_\_\_\_

4. \_\_\_\_\_

5. \_\_\_\_\_

6. \_\_\_\_\_

7. \_\_\_\_\_

8. \_\_\_\_\_

9. \_\_\_\_\_

10. \_\_\_\_\_

11. \_\_\_\_\_

12. \_\_\_\_\_

13. \_\_\_\_\_

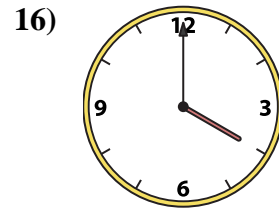
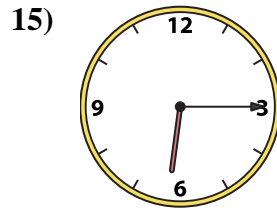
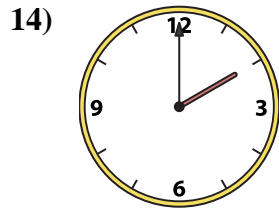
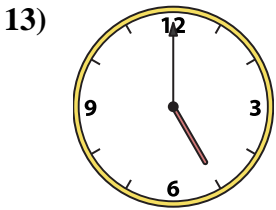
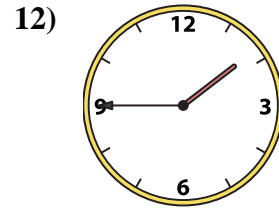
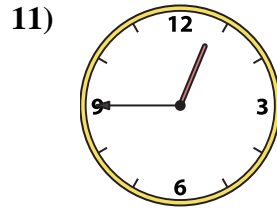
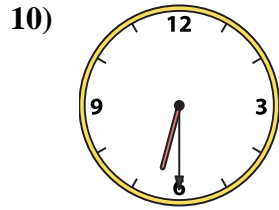
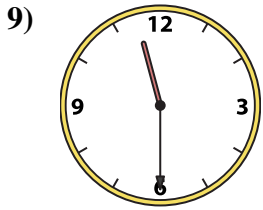
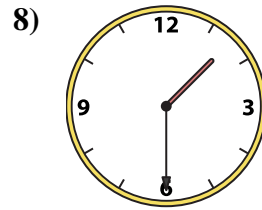
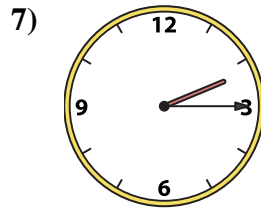
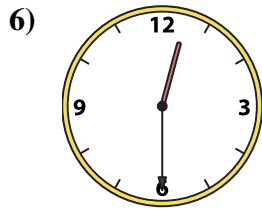
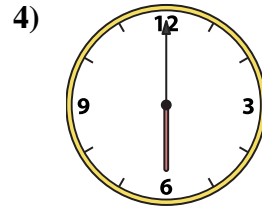
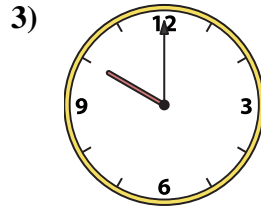
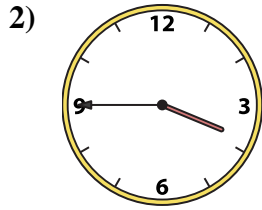
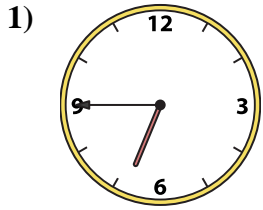
14. \_\_\_\_\_

15. \_\_\_\_\_

16. \_\_\_\_\_



Match the analog clock to the digital clock.



A. **6:30**

B. **6:15**

C. **1:30**

D. **5:00**

E. **6:00**

F. **6:45**

G. **2:15**

H. **12:45**

I. **11:30**

J. **2:00**

K. **3:45**

L. **12:30**

M. **4:00**

N. **10:00**

O. **3:15**

P. **1:45**

**Answers**

1. **F**

2. **K**

3. **N**

4. **E**

5. **O**

6. **L**

7. **G**

8. **C**

9. **I**

10. **A**

11. **H**

12. **P**

13. **D**

14. **J**

15. **B**

16. **M**