



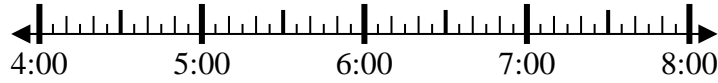
Solve each problem.

Answers

1) Start: 4:00

Elapsed: 1 hr & 10 mins

End: _____

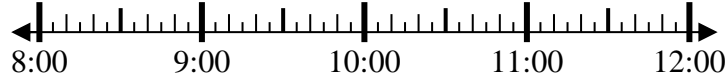


1. _____

2) Start: 8:20

Elapsed: 2 hrs & 15 mins

End: _____

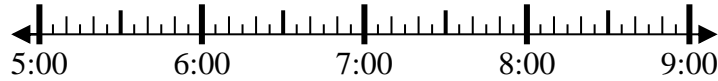


2. _____

3) Start: 5:25

Elapsed: 1 hr & 15 mins

End: _____

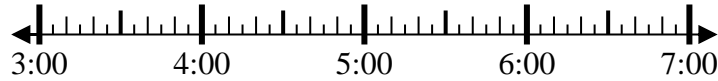


3. _____

4) Start: 3:10

Elapsed: 2 hrs & 10 mins

End: _____



4. _____

5) Start: 12:30

Elapsed: 1 hr & 25 mins

End: _____

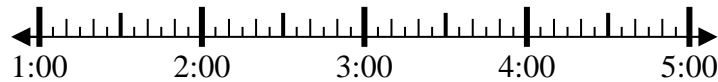


5. _____

6) Start: 1:45

Elapsed: 2 hrs & 35 mins

End: _____

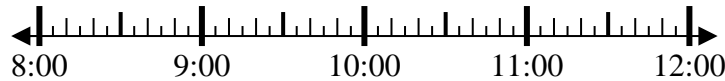


6. _____

7) Start: 8:50

Elapsed: 1 hr & 25 mins

End: _____



7. _____

8) Start: 6:20

Elapsed: 1 hr & 50 mins

End: _____



8. _____



Solve each problem.

1) Start: 4:00

Elapsed: 1 hr & 10 mins

End: 5:10



2) Start: 8:20

Elapsed: 2 hrs & 15 mins

End: 10:35



3) Start: 5:25

Elapsed: 1 hr & 15 mins

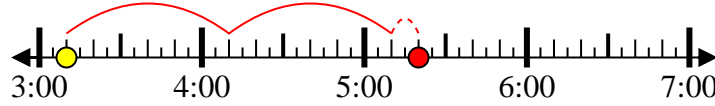
End: 6:40



4) Start: 3:10

Elapsed: 2 hrs & 10 mins

End: 5:20



5) Start: 12:30

Elapsed: 1 hr & 25 mins

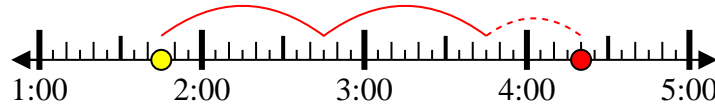
End: 1:55



6) Start: 1:45

Elapsed: 2 hrs & 35 mins

End: 4:20



7) Start: 8:50

Elapsed: 1 hr & 25 mins

End: 10:15



8) Start: 6:20

Elapsed: 1 hr & 50 mins

End: 8:10



Answers

1. 5:10

2. 10:35

3. 6:40

4. 5:20

5. 1:55

6. 4:20

7. 10:15

8. 8:10