



Solve each problem.

Answers

1) Start: 7:05

Elapsed: _____

End: 9:25

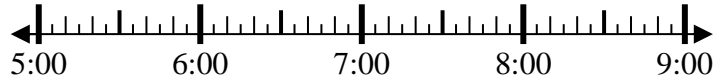


1. _____

2) Start: 5:25

Elapsed: _____

End: 7:45



2. _____

3) Start: 4:15

Elapsed: _____

End: 5:50



3. _____

4) Start: 12:05

Elapsed: _____

End: 2:45

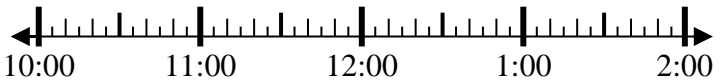


4. _____

5) Start: 10:05

Elapsed: _____

End: 11:50



5. _____

6) Start: 11:45

Elapsed: _____

End: 2:00



6. _____

7) Start: 5:25

Elapsed: _____

End: 7:05



7. _____

8) Start: 1:25

Elapsed: _____

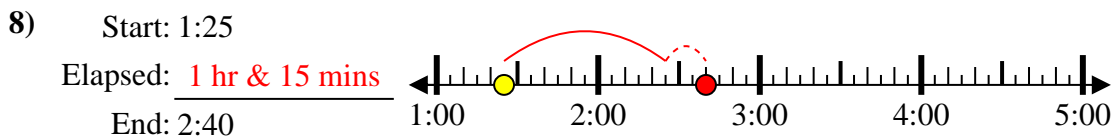
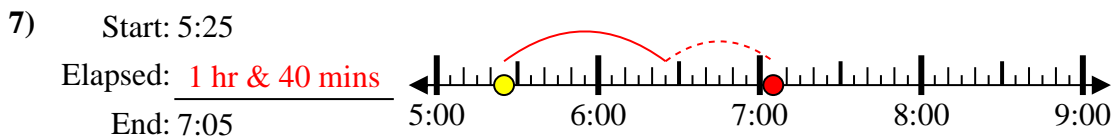
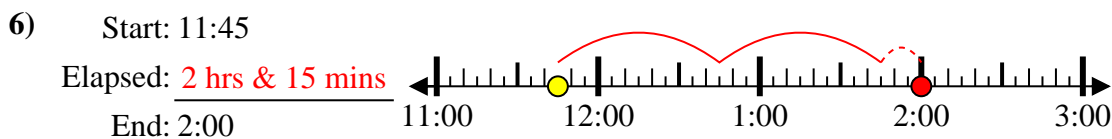
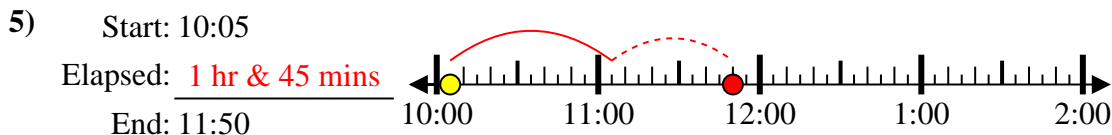
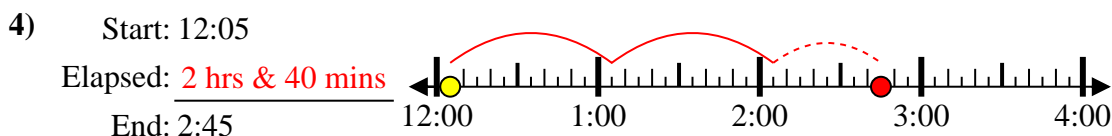
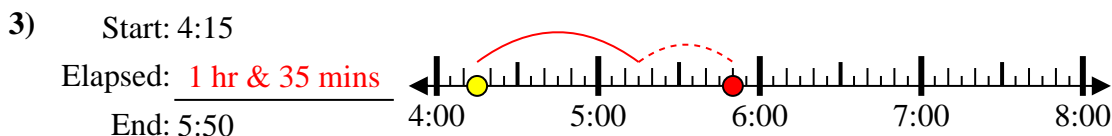
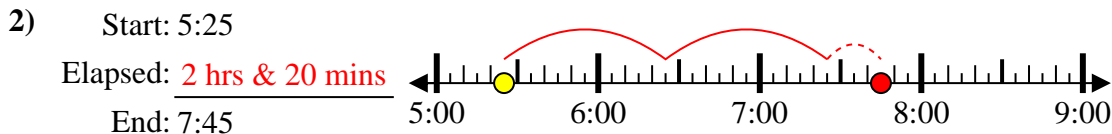
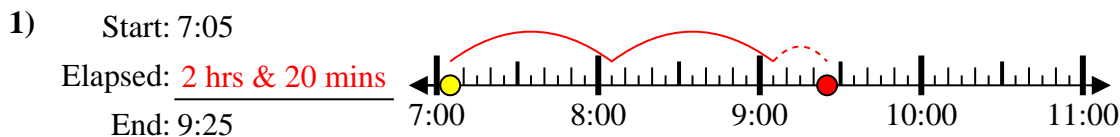
End: 2:40



8. _____



Solve each problem.



Answers

1. 2 hrs & 20 mins
2. 2 hrs & 20 mins
3. 1 hr & 35 mins
4. 2 hrs & 40 mins
5. 1 hr & 45 mins
6. 2 hrs & 15 mins
7. 1 hr & 40 mins
8. 1 hr & 15 mins