



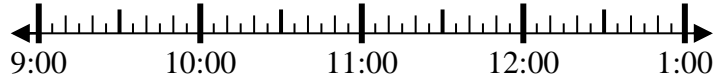
Solve each problem.

Answers

1) Start: 9:35

Elapsed: _____

End: 12:05

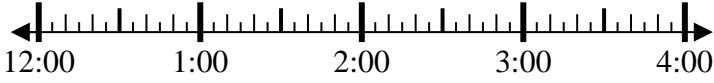


1. _____

2) Start: 12:50

Elapsed: _____

End: 2:35

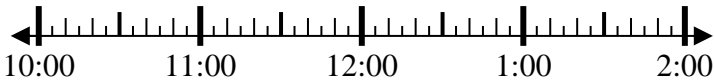


2. _____

3) Start: 10:15

Elapsed: _____

End: 11:40

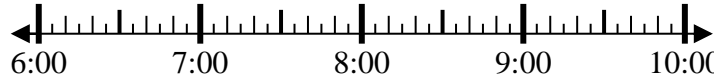


3. _____

4) Start: 6:25

Elapsed: _____

End: 8:10

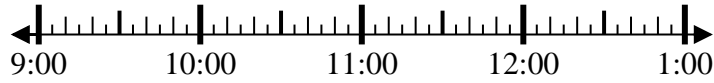


4. _____

5) Start: 9:10

Elapsed: _____

End: 10:25

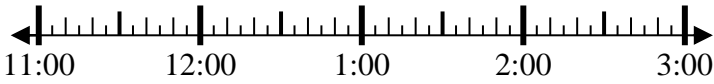


5. _____

6) Start: 11:45

Elapsed: _____

End: 2:00

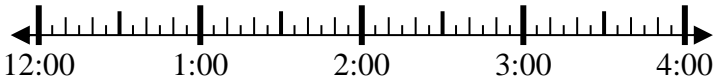


6. _____

7) Start: 12:20

Elapsed: _____

End: 2:00

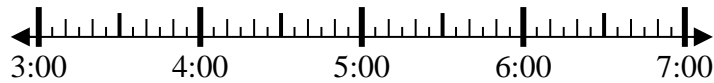


7. _____

8) Start: 3:35

Elapsed: _____

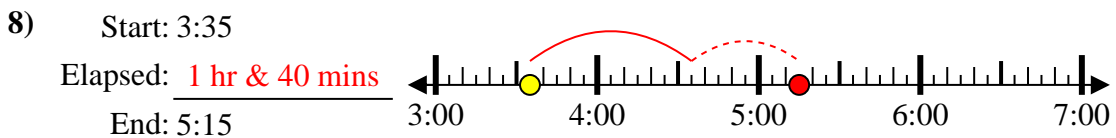
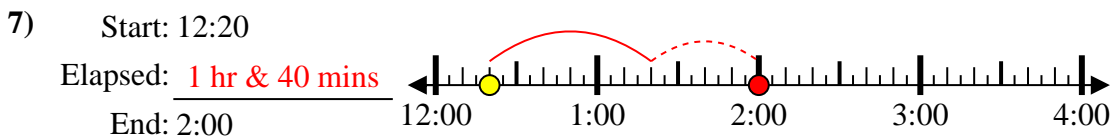
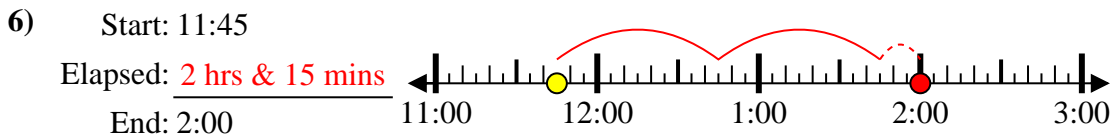
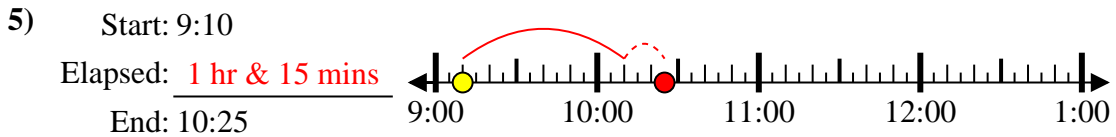
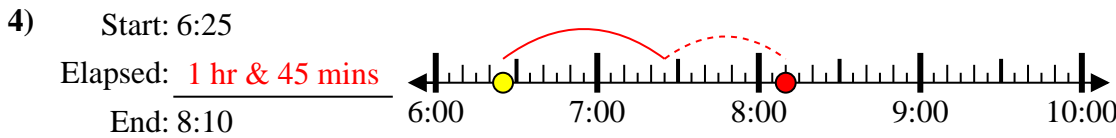
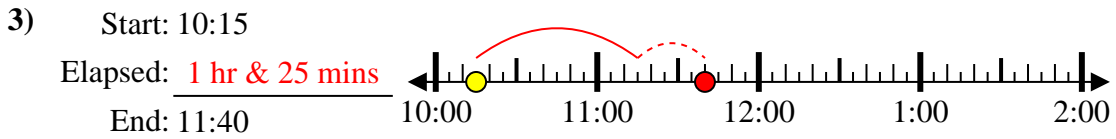
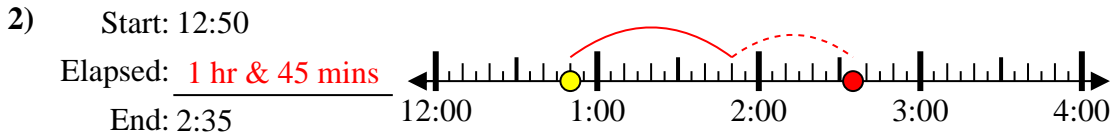
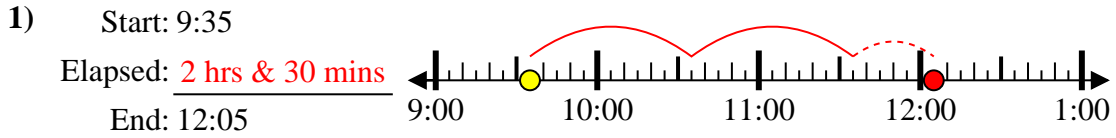
End: 5:15



8. _____



Solve each problem.



Answers

1. 2 hrs & 30 mins

2. 1 hr & 45 mins

3. 1 hr & 25 mins

4. 1 hr & 45 mins

5. 1 hr & 15 mins

6. 2 hrs & 15 mins

7. 1 hr & 40 mins

8. 1 hr & 40 mins