



Draw the hour and minute hand on the clock so it represents the time shown.

1) 3:45



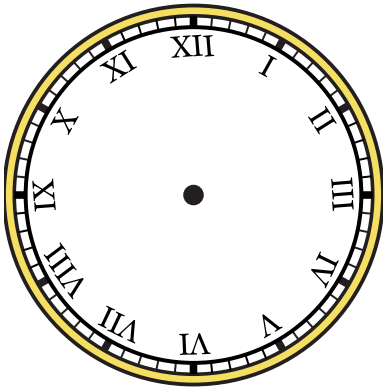
2) 3:10



3) 4:40



4) 8:30



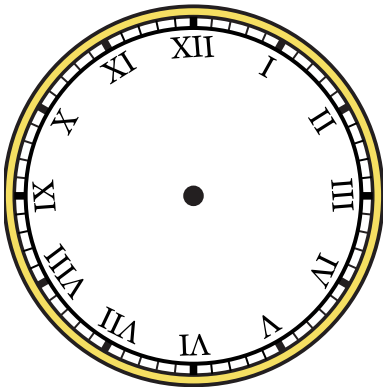
5) 1:45



6) 9:20



7) 7:20



8) 4:55



9) 5:10






Draw the hour and minute hand on the clock so it represents the time shown.


1) 3:45




2) 3:10




3) 4:40



4) 8:30



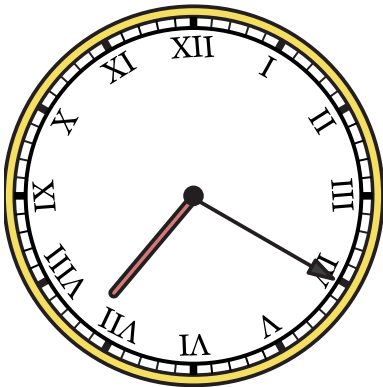
5) 1:45




6) 9:20



7) 7:20



8) 4:55



9) 5:10

