

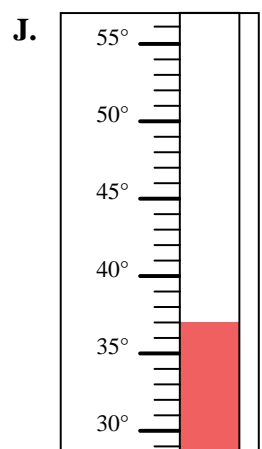
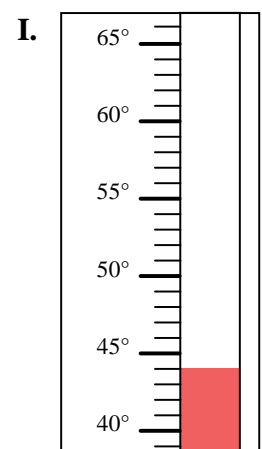
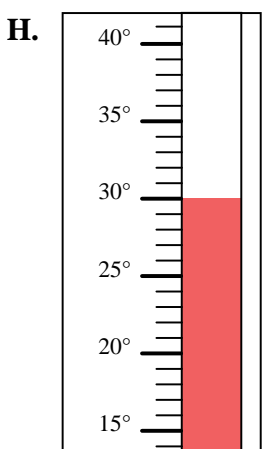
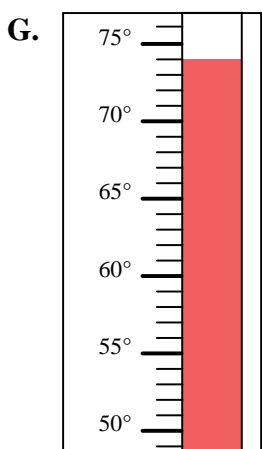
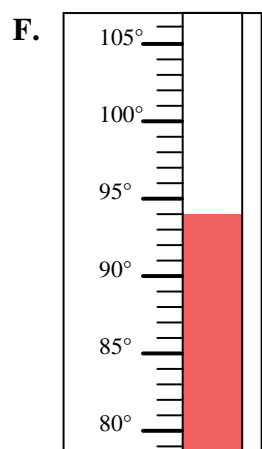
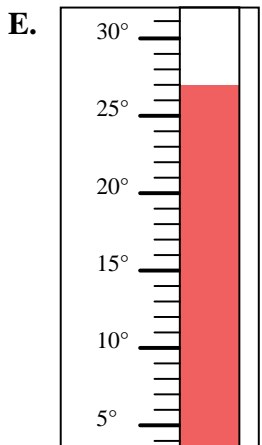
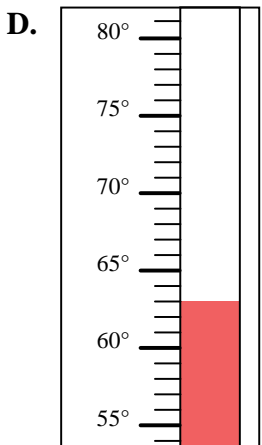
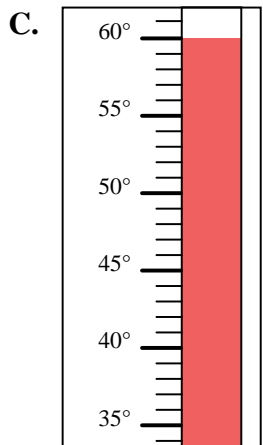
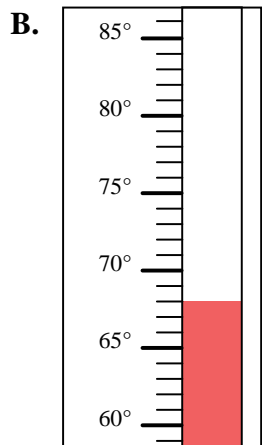
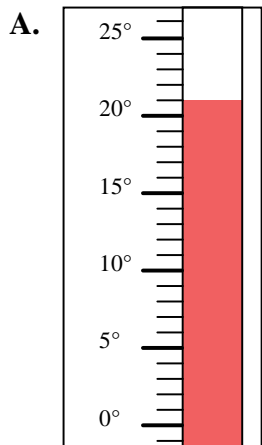


Determine which letter best answers each question.

Answers

- 1) Which thermometer best represents the temperature 74°?
- 2) Which thermometer best represents the temperature 94°?
- 3) Which thermometer best represents the temperature 44°?
- 4) Which thermometer best represents the temperature 60°?
- 5) Which thermometer best represents the temperature 37°?
- 6) Which thermometer best represents the temperature 21°?
- 7) Which thermometer best represents the temperature 30°?
- 8) Which thermometer best represents the temperature 27°?
- 9) Which thermometer best represents the temperature 68°?
- 10) Which thermometer best represents the temperature 63°?

1. _____
2. _____
3. _____
4. _____
5. _____
6. _____
7. _____
8. _____
9. _____
10. _____





Determine which letter best answers each question.

- 1) Which thermometer best represents the temperature 74° ?
- 2) Which thermometer best represents the temperature 94° ?
- 3) Which thermometer best represents the temperature 44° ?
- 4) Which thermometer best represents the temperature 60° ?
- 5) Which thermometer best represents the temperature 37° ?
- 6) Which thermometer best represents the temperature 21° ?
- 7) Which thermometer best represents the temperature 30° ?
- 8) Which thermometer best represents the temperature 27° ?
- 9) Which thermometer best represents the temperature 68° ?
- 10) Which thermometer best represents the temperature 63° ?

Answers

1. **G**
2. **F**
3. **I**
4. **C**
5. **J**
6. **A**
7. **H**
8. **E**
9. **B**
10. **D**

