

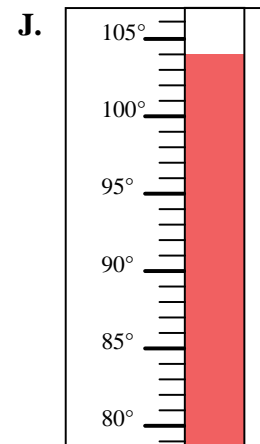
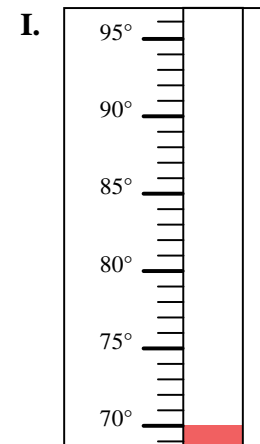
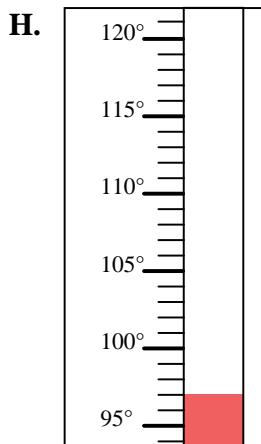
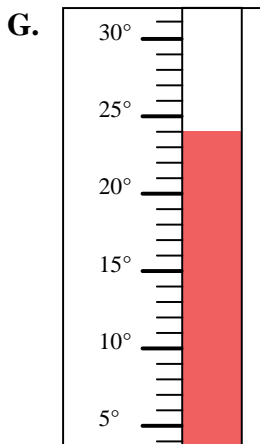
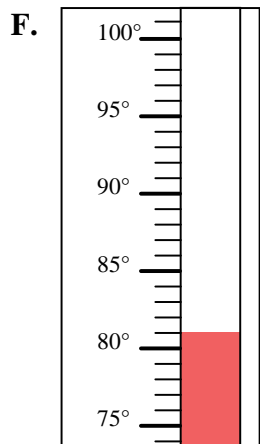
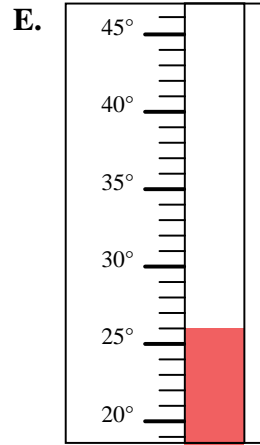
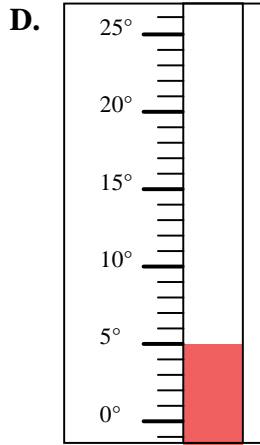
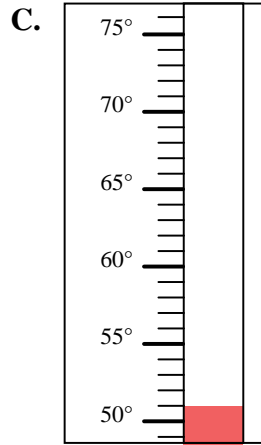
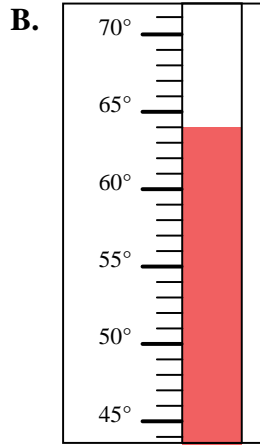
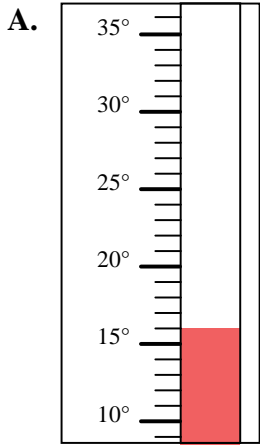


Determine which letter best answers each question.

**Answers**

- 1) Which thermometer best represents the temperature  $70^{\circ}$ ?
- 2) Which thermometer best represents the temperature  $51^{\circ}$ ?
- 3) Which thermometer best represents the temperature  $64^{\circ}$ ?
- 4) Which thermometer best represents the temperature  $26^{\circ}$ ?
- 5) Which thermometer best represents the temperature  $104^{\circ}$ ?
- 6) Which thermometer best represents the temperature  $97^{\circ}$ ?
- 7) Which thermometer best represents the temperature  $5^{\circ}$ ?
- 8) Which thermometer best represents the temperature  $81^{\circ}$ ?
- 9) Which thermometer best represents the temperature  $16^{\circ}$ ?
- 10) Which thermometer best represents the temperature  $24^{\circ}$ ?

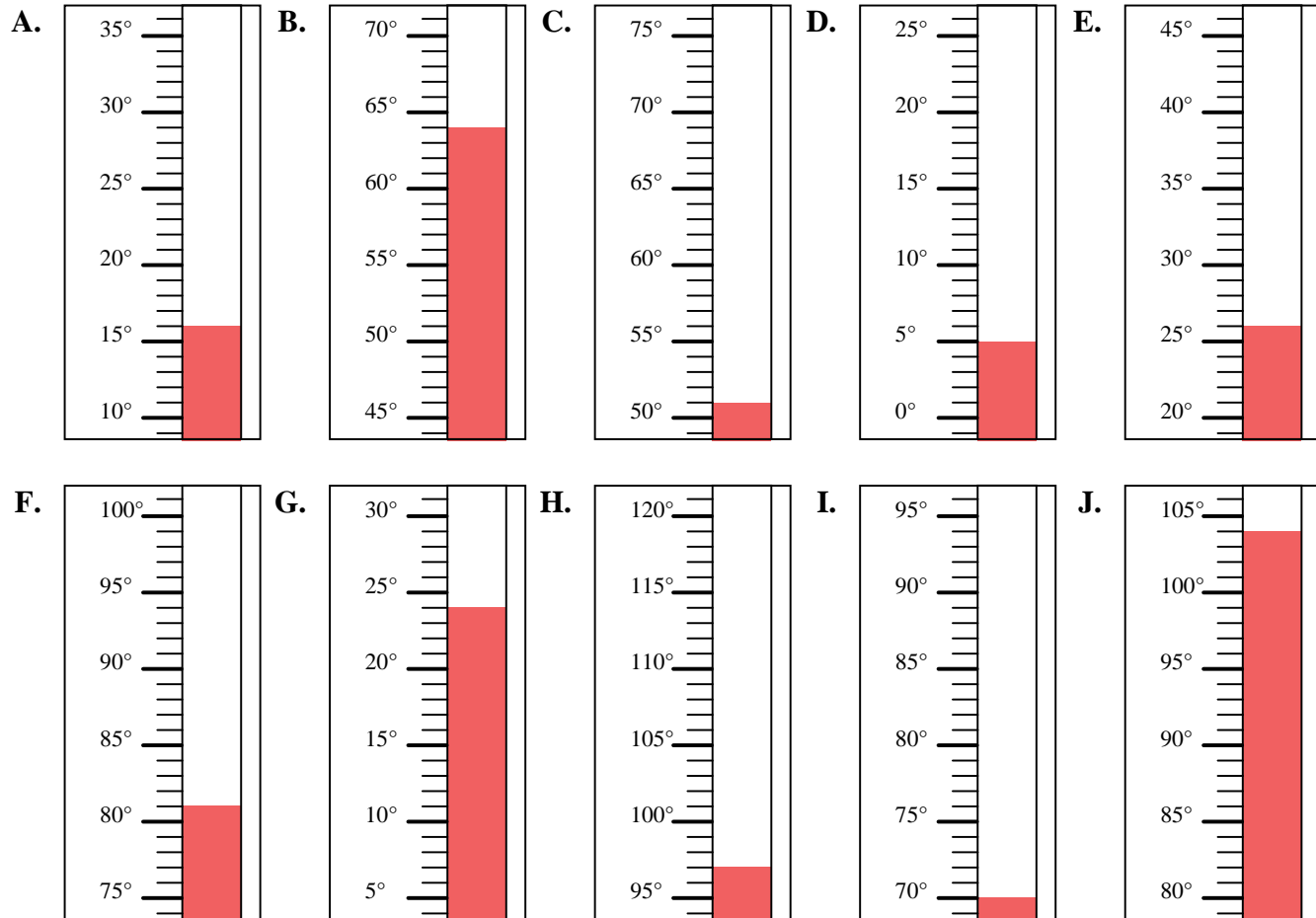
1. \_\_\_\_\_
2. \_\_\_\_\_
3. \_\_\_\_\_
4. \_\_\_\_\_
5. \_\_\_\_\_
6. \_\_\_\_\_
7. \_\_\_\_\_
8. \_\_\_\_\_
9. \_\_\_\_\_
10. \_\_\_\_\_





Determine which letter best answers each question.

- 1) Which thermometer best represents the temperature  $70^{\circ}$ ?
- 2) Which thermometer best represents the temperature  $51^{\circ}$ ?
- 3) Which thermometer best represents the temperature  $64^{\circ}$ ?
- 4) Which thermometer best represents the temperature  $26^{\circ}$ ?
- 5) Which thermometer best represents the temperature  $104^{\circ}$ ?
- 6) Which thermometer best represents the temperature  $97^{\circ}$ ?
- 7) Which thermometer best represents the temperature  $5^{\circ}$ ?
- 8) Which thermometer best represents the temperature  $81^{\circ}$ ?
- 9) Which thermometer best represents the temperature  $16^{\circ}$ ?
- 10) Which thermometer best represents the temperature  $24^{\circ}$ ?



**Answers**

1. **I**
2. **C**
3. **B**
4. **E**
5. **J**
6. **H**
7. **D**
8. **F**
9. **A**
10. **G**