



Express each number using tally marks.

1) 88 _____

2) 95 _____

3) 21 _____

4) 22 _____

5) 44 _____

6) 73 _____

7) 15 _____

8) 34 _____

9) 96 _____

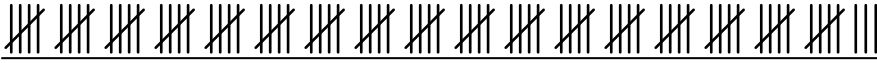
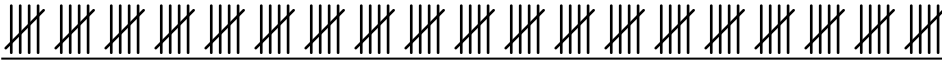

10) 6 _____

11) 23 _____

12) 100 _____



Express each number using tally marks.

1) 88 2) 95 3) 21 4) 22 5) 44 6) 73 7) 15 8) 34 9) 96 10) 6 11) 23 12) 100 