



Express each number using tally marks.

1) 79 _____

2) 25 _____

3) 80 _____

4) 73 _____

5) 72 _____

6) 64 _____

7) 90 _____

8) 63 _____

9) 52 _____

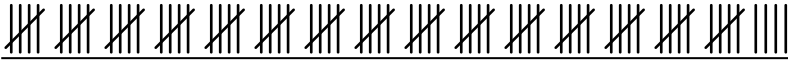
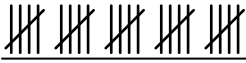
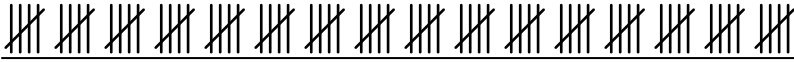


10) 84 _____

11) 92 _____

12) 56 _____



Express each number using tally marks.

1) 79 2) 25 3) 80 4) 73 5) 72 6) 64 7) 90 8) 63 9) 52 10) 84 11) 92 12) 56 