



Determine the value of each set of tally marks.

Answers

1)

1. \_\_\_\_\_

2)

2. \_\_\_\_\_

3)

3. \_\_\_\_\_

4)

4. \_\_\_\_\_

5)

5. \_\_\_\_\_

6)

6. \_\_\_\_\_

7)

7. \_\_\_\_\_

8)

8. \_\_\_\_\_

9)

9. \_\_\_\_\_

10)

10. \_\_\_\_\_

11)

11. \_\_\_\_\_

12)

12. \_\_\_\_\_

13)

13. \_\_\_\_\_

14)

14. \_\_\_\_\_

15)

15. \_\_\_\_\_

16)

16. \_\_\_\_\_

17)

17. \_\_\_\_\_

18)

18. \_\_\_\_\_



Determine the value of each set of tally marks.

Answers

1)

1. 38

2)

2. 24

3)

3. 35

4)

4. 25

5)

5. 7

6)

6. 50

7)

7. 26

8)

8. 39

9)

9. 46

10)

10. 33

11)

11. 18

12)

12. 43

13)

13. 14

14)

14. 41

15)

15. 49

16)

16. 29

17)

17. 19

18)

18. 13



Determine the value of each set of tally marks.

Answers

1)

1. \_\_\_\_\_

2)

2. \_\_\_\_\_

3)

3. \_\_\_\_\_

4)

4. \_\_\_\_\_

5)

5. \_\_\_\_\_

6)

6. \_\_\_\_\_

7)

7. \_\_\_\_\_

8)

8. \_\_\_\_\_

9)

9. \_\_\_\_\_

10)

10. \_\_\_\_\_

11)

11. \_\_\_\_\_

12)

12. \_\_\_\_\_

13)

13. \_\_\_\_\_

14)

14. \_\_\_\_\_

15)

15. \_\_\_\_\_

16)

16. \_\_\_\_\_

17)

17. \_\_\_\_\_

18)

18. \_\_\_\_\_



Determine the value of each set of tally marks.

Answers

- 1) 1. 17
- 2) 2. 28
- 3) 3. 44
- 4) 4. 40
- 5) 5. 49
- 6) 6. 16
- 7) 7. 37
- 8) 8. 33
- 9) 9. 14
- 10) 10. 35
- 11) 11. 32
- 12) 12. 7
- 13) 13. 6
- 14) 14. 47
- 15) 15. 24
- 16) 16. 48
- 17) 17. 8
- 18) 18. 29



Determine the value of each set of tally marks.

Answers

1)

1. \_\_\_\_\_

2)

2. \_\_\_\_\_

3)

3. \_\_\_\_\_

4)

4. \_\_\_\_\_

5)

5. \_\_\_\_\_

6)

6. \_\_\_\_\_

7)

7. \_\_\_\_\_

8)

8. \_\_\_\_\_

9)

9. \_\_\_\_\_

10)

10. \_\_\_\_\_

11)

11. \_\_\_\_\_

12)

12. \_\_\_\_\_

13)

13. \_\_\_\_\_

14)

14. \_\_\_\_\_

15)

15. \_\_\_\_\_

16)

16. \_\_\_\_\_

17)

17. \_\_\_\_\_



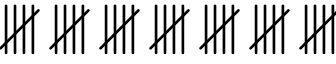


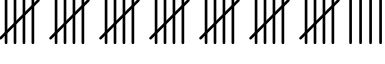

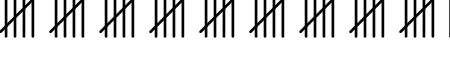
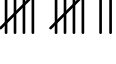


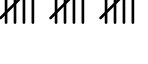


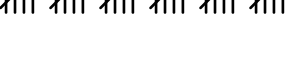



18)

18. \_\_\_\_\_



Determine the value of each set of tally marks.

Answers

- |   |               |
|---|---------------|
| 1)     | 1. <u>21</u>  |
| 2)     | 2. <u>18</u>  |
| 3)     | 3. <u>35</u>  |
| 4)     | 4. <u>10</u>  |
| 5)     | 5. <u>24</u>  |
| 6)     | 6. <u>39</u>  |
| 7)     | 7. <u>29</u>  |
| 8)     | 8. <u>46</u>  |
| 9)    | 9. <u>12</u>  |
| 10)  | 10. <u>32</u> |
| 11)  | 11. <u>19</u> |
| 12)  | 12. <u>16</u> |
| 13)  | 13. <u>6</u>  |
| 14)  | 14. <u>9</u>  |
| 15)  | 15. <u>30</u> |
| 16)  | 16. <u>7</u>  |
| 17)  | 17. <u>11</u> |
| 18)  | 18. <u>13</u> |



Determine the value of each set of tally marks.

Answers

1)

1. \_\_\_\_\_

2)

2. \_\_\_\_\_

3)

3. \_\_\_\_\_

4)

4. \_\_\_\_\_

5)

5. \_\_\_\_\_

6)

6. \_\_\_\_\_

7)

7. \_\_\_\_\_

8)

8. \_\_\_\_\_

9)

9. \_\_\_\_\_

10)

10. \_\_\_\_\_

11)

11. \_\_\_\_\_

12)

12. \_\_\_\_\_

13)

13. \_\_\_\_\_

14)

14. \_\_\_\_\_

15)

15. \_\_\_\_\_

16)

16. \_\_\_\_\_

17)

17. \_\_\_\_\_

18)

18. \_\_\_\_\_



Determine the value of each set of tally marks.

Answers

- |     |               |
|-----|---------------|
| 1)  | 1. <u>24</u>  |
| 2)  | 2. <u>27</u>  |
| 3)  | 3. <u>22</u>  |
| 4)  | 4. <u>40</u>  |
| 5)  | 5. <u>21</u>  |
| 6)  | 6. <u>13</u>  |
| 7)  | 7. <u>45</u>  |
| 8)  | 8. <u>6</u>   |
| 9)  | 9. <u>16</u>  |
| 10) | 10. <u>12</u> |
| 11) | 11. <u>19</u> |
| 12) | 12. <u>49</u> |
| 13) | 13. <u>34</u> |
| 14) | 14. <u>9</u>  |
| 15) | 15. <u>41</u> |
| 16) | 16. <u>29</u> |
| 17) | 17. <u>23</u> |
| 18) | 18. <u>28</u> |





Determine the value of each set of tally marks.

Answers

1)

1. \_\_\_\_\_

2)

2. \_\_\_\_\_

3)

3. \_\_\_\_\_

4)

4. \_\_\_\_\_

5)

5. \_\_\_\_\_

6)

6. \_\_\_\_\_

7)

7. \_\_\_\_\_

8)

8. \_\_\_\_\_

9)

9. \_\_\_\_\_

10)

10. \_\_\_\_\_

11)

11. \_\_\_\_\_

12)

12. \_\_\_\_\_

13)

13. \_\_\_\_\_

14)

14. \_\_\_\_\_

15)

15. \_\_\_\_\_

16)

16. \_\_\_\_\_

17)

17. \_\_\_\_\_

18)

18. \_\_\_\_\_



Determine the value of each set of tally marks.

Answers

- |     |               |
|-----|---------------|
| 1)  | 1. <u>9</u>   |
| 2)  | 2. <u>37</u>  |
| 3)  | 3. <u>36</u>  |
| 4)  | 4. <u>26</u>  |
| 5)  | 5. <u>47</u>  |
| 6)  | 6. <u>20</u>  |
| 7)  | 7. <u>15</u>  |
| 8)  | 8. <u>25</u>  |
| 9)  | 9. <u>43</u>  |
| 10) | 10. <u>21</u> |
| 11) | 11. <u>18</u> |
| 12) | 12. <u>44</u> |
| 13) | 13. <u>14</u> |
| 14) | 14. <u>24</u> |
| 15) | 15. <u>38</u> |
| 16) | 16. <u>40</u> |
| 17) | 17. <u>13</u> |
| 18) | 18. <u>50</u> |



Determine the value of each set of tally marks.

Answers

1)

1. \_\_\_\_\_

2)

2. \_\_\_\_\_

3)

3. \_\_\_\_\_

4)

4. \_\_\_\_\_

5)

5. \_\_\_\_\_

6)

6. \_\_\_\_\_

7)

7. \_\_\_\_\_

8)

8. \_\_\_\_\_

9)

9. \_\_\_\_\_

10)

10. \_\_\_\_\_

11)

11. \_\_\_\_\_

12)

12. \_\_\_\_\_

13)

13. \_\_\_\_\_

14)

14. \_\_\_\_\_

15)

15. \_\_\_\_\_

16)

16. \_\_\_\_\_

17)

17. \_\_\_\_\_









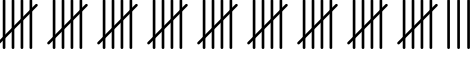


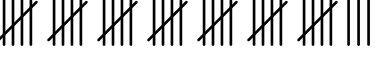



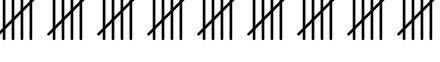
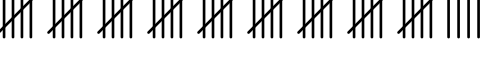

18)

18. \_\_\_\_\_



Determine the value of each set of tally marks.

Answers

- |   |               |
|---|---------------|
| 1)     | 1. <u>13</u>  |
| 2)     | 2. <u>18</u>  |
| 3)     | 3. <u>44</u>  |
| 4)     | 4. <u>20</u>  |
| 5)     | 5. <u>23</u>  |
| 6)     | 6. <u>47</u>  |
| 7)     | 7. <u>26</u>  |
| 8)     | 8. <u>9</u>   |
| 9)    | 9. <u>48</u>  |
| 10)  | 10. <u>10</u> |
| 11)  | 11. <u>16</u> |
| 12)  | 12. <u>38</u> |
| 13)  | 13. <u>30</u> |
| 14)  | 14. <u>15</u> |
| 15)  | 15. <u>39</u> |
| 16)  | 16. <u>45</u> |
| 17)  | 17. <u>49</u> |
| 18)  | 18. <u>22</u> |



Determine the value of each set of tally marks.

Answers

1)

1. \_\_\_\_\_

2)

2. \_\_\_\_\_

3)

3. \_\_\_\_\_

4)

4. \_\_\_\_\_

5)

5. \_\_\_\_\_

6)

6. \_\_\_\_\_

7)

7. \_\_\_\_\_

8)

8. \_\_\_\_\_

9)

9. \_\_\_\_\_

10)

10. \_\_\_\_\_

11)

11. \_\_\_\_\_

12)

12. \_\_\_\_\_

13)

13. \_\_\_\_\_

14)

14. \_\_\_\_\_

15)

15. \_\_\_\_\_

16)

16. \_\_\_\_\_

17)

17. \_\_\_\_\_

18)

18. \_\_\_\_\_



Determine the value of each set of tally marks.

Answers

- |     |               |
|-----|---------------|
| 1)  | 1. <u>10</u>  |
| 2)  | 2. <u>33</u>  |
| 3)  | 3. <u>45</u>  |
| 4)  | 4. <u>20</u>  |
| 5)  | 5. <u>42</u>  |
| 6)  | 6. <u>26</u>  |
| 7)  | 7. <u>39</u>  |
| 8)  | 8. <u>15</u>  |
| 9)  | 9. <u>11</u>  |
| 10) | 10. <u>34</u> |
| 11) | 11. <u>13</u> |
| 12) | 12. <u>8</u>  |
| 13) | 13. <u>41</u> |
| 14) | 14. <u>44</u> |
| 15) | 15. <u>25</u> |
| 16) | 16. <u>49</u> |
| 17) | 17. <u>12</u> |
| 18) | 18. <u>21</u> |



Determine the value of each set of tally marks.

Answers

1)

1. \_\_\_\_\_

2)

2. \_\_\_\_\_

3)

3. \_\_\_\_\_

4)

4. \_\_\_\_\_

5)

5. \_\_\_\_\_

6)

6. \_\_\_\_\_

7)

7. \_\_\_\_\_

8)

8. \_\_\_\_\_

9)

9. \_\_\_\_\_

10)

10. \_\_\_\_\_

11)

11. \_\_\_\_\_

12)

12. \_\_\_\_\_

13)

13. \_\_\_\_\_

14)

14. \_\_\_\_\_

15)

15. \_\_\_\_\_

16)

16. \_\_\_\_\_

17)

17. \_\_\_\_\_

18)

18. \_\_\_\_\_



Determine the value of each set of tally marks.

Answers

- |     |               |
|-----|---------------|
| 1)  | 1. <u>15</u>  |
| 2)  | 2. <u>48</u>  |
| 3)  | 3. <u>21</u>  |
| 4)  | 4. <u>17</u>  |
| 5)  | 5. <u>8</u>   |
| 6)  | 6. <u>11</u>  |
| 7)  | 7. <u>43</u>  |
| 8)  | 8. <u>33</u>  |
| 9)  | 9. <u>37</u>  |
| 10) | 10. <u>16</u> |
| 11) | 11. <u>46</u> |
| 12) | 12. <u>9</u>  |
| 13) | 13. <u>7</u>  |
| 14) | 14. <u>41</u> |
| 15) | 15. <u>38</u> |
| 16) | 16. <u>47</u> |
| 17) | 17. <u>27</u> |
| 18) | 18. <u>26</u> |





Determine the value of each set of tally marks.

Answers

1)

1. \_\_\_\_\_

2)

2. \_\_\_\_\_

3)

3. \_\_\_\_\_

4)

4. \_\_\_\_\_

5)

5. \_\_\_\_\_

6)

6. \_\_\_\_\_

7)

7. \_\_\_\_\_

8)

8. \_\_\_\_\_

9)

9. \_\_\_\_\_

10)

10. \_\_\_\_\_

11)

11. \_\_\_\_\_

12)

12. \_\_\_\_\_

13)

13. \_\_\_\_\_

14)

14. \_\_\_\_\_

15)

15. \_\_\_\_\_

16)

16. \_\_\_\_\_

17)

17. \_\_\_\_\_



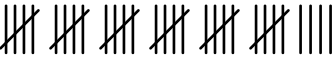


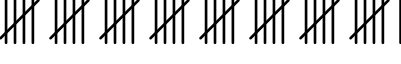

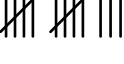

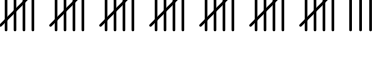

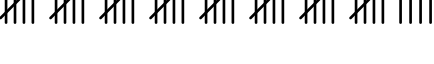
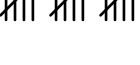
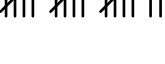
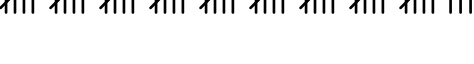



18)

18. \_\_\_\_\_



Determine the value of each set of tally marks.

Answers

- |   |               |
|---|---------------|
| 1)     | 1. <u>19</u>  |
| 2)     | 2. <u>31</u>  |
| 3)     | 3. <u>34</u>  |
| 4)     | 4. <u>36</u>  |
| 5)     | 5. <u>16</u>  |
| 6)     | 6. <u>41</u>  |
| 7)     | 7. <u>20</u>  |
| 8)     | 8. <u>13</u>  |
| 9)    | 9. <u>7</u>   |
| 10)  | 10. <u>38</u> |
| 11)  | 11. <u>50</u> |
| 12)  | 12. <u>44</u> |
| 13)  | 13. <u>15</u> |
| 14)  | 14. <u>17</u> |
| 15)  | 15. <u>48</u> |
| 16)  | 16. <u>28</u> |
| 17)  | 17. <u>27</u> |
| 18)  | 18. <u>42</u> |



Determine the value of each set of tally marks.

Answers

1)

1. \_\_\_\_\_

2)

2. \_\_\_\_\_

3)

3. \_\_\_\_\_

4)

4. \_\_\_\_\_

5)

5. \_\_\_\_\_

6)

6. \_\_\_\_\_

7)

7. \_\_\_\_\_

8)

8. \_\_\_\_\_

9)

9. \_\_\_\_\_

10)

10. \_\_\_\_\_

11)

11. \_\_\_\_\_

12)

12. \_\_\_\_\_

13)

13. \_\_\_\_\_

14)

14. \_\_\_\_\_

15)

15. \_\_\_\_\_

16)

16. \_\_\_\_\_

17)

17. \_\_\_\_\_

18)

18. \_\_\_\_\_



Determine the value of each set of tally marks.

Answers

1)

1. 49

2)

2. 7

3)

3. 31

4)

4. 44

5)

5. 23

6)

6. 19

7)

7. 17

8)

8. 35

9)

9. 32

10)

10. 50

11)

11. 40

12)

12. 12

13)

13. 9

14)

14. 13

15)

15. 30

16)

16. 15

17)

17. 47

18)

18. 6