



Use the visual model to solve each problem.

Answers

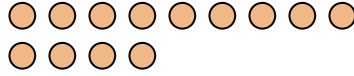
1) There are 9 triangles below.



If you were to take away 8, how many would be left?

$9 - 8 = ?$

2) There are 13 circles below.



If you were to take away 7, how many would be left?

$13 - 7 = ?$

3) There are 9 rectangles below.



If you were to take away 5, how many would be left?

$9 - 5 = ?$

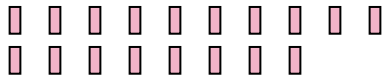
4) There are 6 stars below.



If you were to take away 2, how many would be left?

$6 - 2 = ?$

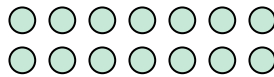
5) There are 18 rectangles below.



If you were to take away 9, how many would be left?

$18 - 9 = ?$

6) There are 14 circles below.



If you were to take away 9, how many would be left?

$14 - 9 = ?$

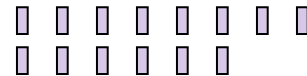
7) There are 2 squares below.



If you were to take away 1, how many would be left?

$2 - 1 = ?$

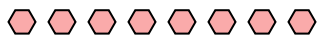
8) There are 14 rectangles below.



If you were to take away 5, how many would be left?

$14 - 5 = ?$

9) There are 8 hexagons below.



If you were to take away 2, how many would be left?

$8 - 2 = ?$

10) There are 3 circles below.




If you were to take away 1, how many would be left?

$3 - 1 = ?$

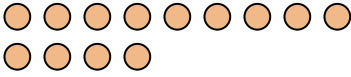
1. _____
2. _____
3. _____
4. _____
5. _____
6. _____
7. _____
8. _____
9. _____
10. _____




Use the visual model to solve each problem.

- 1) There are 9 triangles below.



If you were to take away 8, how many would be left?
 $9 - 8 = ?$

- 2) There are 13 circles below.


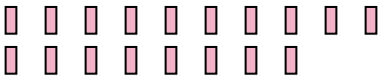
If you were to take away 7, how many would be left?
 $13 - 7 = ?$

- 3) There are 9 rectangles below.


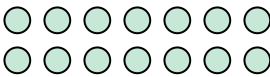
If you were to take away 5, how many would be left?
 $9 - 5 = ?$

- 4) There are 6 stars below.



If you were to take away 2, how many would be left?
 $6 - 2 = ?$

- 5) There are 18 rectangles below.


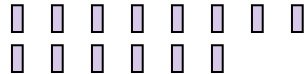
If you were to take away 9, how many would be left?
 $18 - 9 = ?$

- 6) There are 14 circles below.


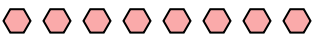
If you were to take away 9, how many would be left?
 $14 - 9 = ?$

- 7) There are 2 squares below.



If you were to take away 1, how many would be left?
 $2 - 1 = ?$

- 8) There are 14 rectangles below.


If you were to take away 5, how many would be left?
 $14 - 5 = ?$

- 9) There are 8 hexagons below.


If you were to take away 2, how many would be left?
 $8 - 2 = ?$

- 10) There are 3 circles below.


If you were to take away 1, how many would be left?
 $3 - 1 = ?$

Answers

1. 1

2. 6

3. 4

4. 4

5. 9

6. 5

7. 1

8. 9

9. 6

10. 2