



Use the visual model to solve each problem.

Answers

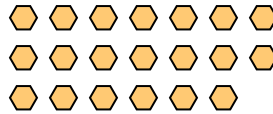
1) There are 12 squares below.



If you were to take away 4, how many would be left?

$12 - 4 = ?$

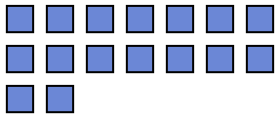
2) There are 20 hexagons below.



If you were to take away 12, how many would be left?

$20 - 12 = ?$

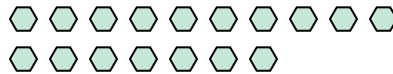
3) There are 16 squares below.



If you were to take away 11, how many would be left?

$16 - 11 = ?$

4) There are 17 hexagons below.



If you were to take away 5, how many would be left?

$17 - 5 = ?$

5) There are 4 stars below.



If you were to take away 2, how many would be left?

$4 - 2 = ?$

6) There are 6 rectangles below.



If you were to take away 4, how many would be left?

$6 - 4 = ?$

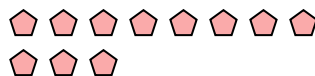
7) There are 17 rectangles below.



If you were to take away 10, how many would be left?

$17 - 10 = ?$


8) There are 11 pentagons below.



If you were to take away 6, how many would be left?

$11 - 6 = ?$

9) There are 18 pentagons below.



If you were to take away 7, how many would be left?

$18 - 7 = ?$

10) There are 9 triangles below.



If you were to take away 7, how many would be left?

$9 - 7 = ?$

1. _____
2. _____
3. _____
4. _____
5. _____
6. _____
7. _____
8. _____
9. _____
10. _____



Use the visual model to solve each problem.

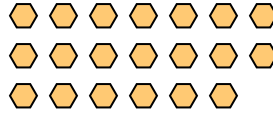
1) There are 12 squares below.



If you were to take away 4, how many would be left?

12 - 4 = ?

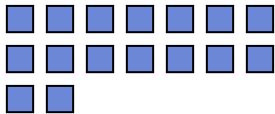
2) There are 20 hexagons below.



If you were to take away 12, how many would be left?

20 - 12 = ?

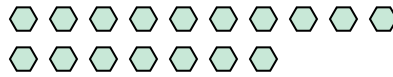
3) There are 16 squares below.



If you were to take away 11, how many would be left?

16 - 11 = ?

4) There are 17 hexagons below.



If you were to take away 5, how many would be left?

17 - 5 = ?

5) There are 4 stars below.



If you were to take away 2, how many would be left?

4 - 2 = ?

6) There are 6 rectangles below.



If you were to take away 4, how many would be left?

6 - 4 = ?

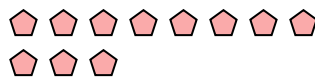
7) There are 17 rectangles below.



If you were to take away 10, how many would be left?

17 - 10 = ?

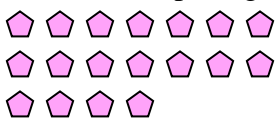
8) There are 11 pentagons below.



If you were to take away 6, how many would be left?

11 - 6 = ?

9) There are 18 pentagons below.



If you were to take away 7, how many would be left?

18 - 7 = ?

10) There are 9 triangles below.



If you were to take away 7, how many would be left?

9 - 7 = ?

Answers

1. 8

2. 8

3. 5

4. 12

5. 2

6. 2

7. 7

8. 5

9. 11

10. 2