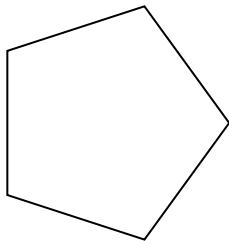




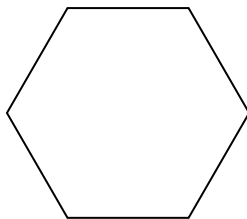
Determine if the shape shown is a regular shape or an irregular shape.

Answers

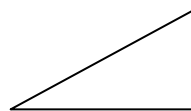
1)



2)

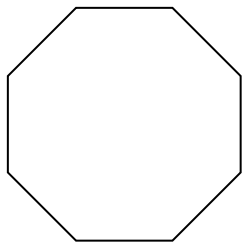


3)

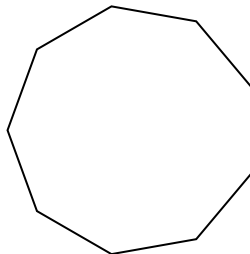


1. \_\_\_\_\_

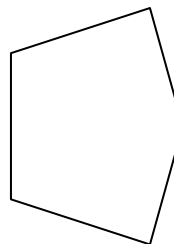
4)



5)



6)



2. \_\_\_\_\_

3. \_\_\_\_\_

4. \_\_\_\_\_

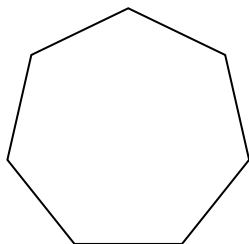
5. \_\_\_\_\_

6. \_\_\_\_\_

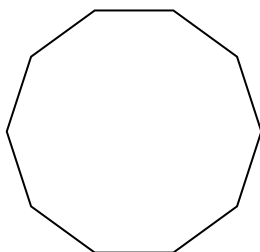
7. \_\_\_\_\_

8. \_\_\_\_\_

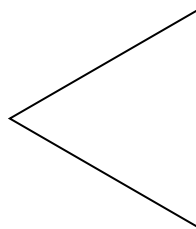
7)



8)



9)




9. \_\_\_\_\_

10. \_\_\_\_\_


11. \_\_\_\_\_

12. \_\_\_\_\_

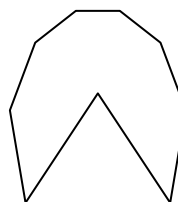
10)



11)



12)




13. \_\_\_\_\_


14. \_\_\_\_\_

15. \_\_\_\_\_

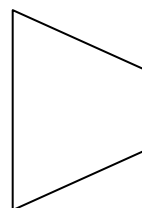
13)



14)



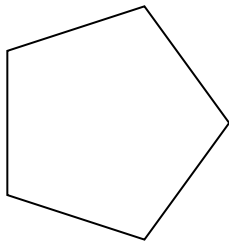
15)



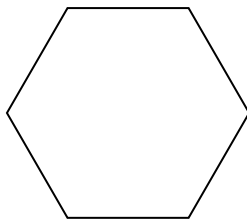


Determine if the shape shown is a regular shape or an irregular shape.

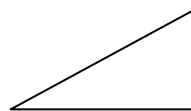
1)



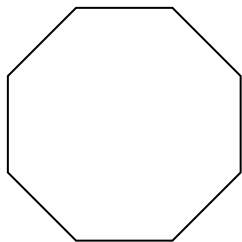
2)



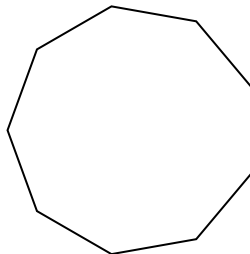
3)



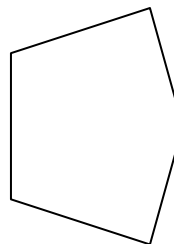
4)



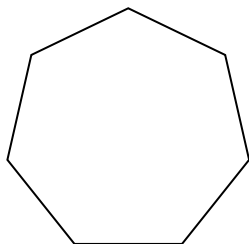
5)



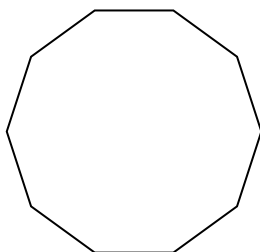
6)



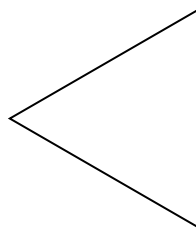
7)




8)




9)



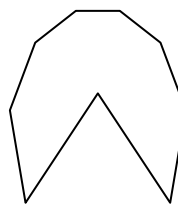
10)




11)




12)



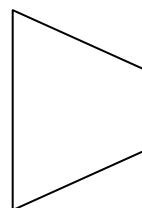
13)



14)



15)



Answers

1. Regular

2. Regular

3. Irregular

4. Regular

5. Regular

6. Irregular

7. Regular

8. Regular

9. Regular

10. Irregular

11. Regular

12. Irregular

13. Irregular

14. Irregular

15. Irregular