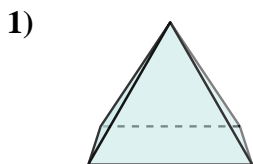


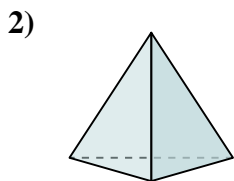


Determine which choice BEST describes the shape shown.

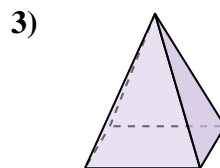
**Answers**



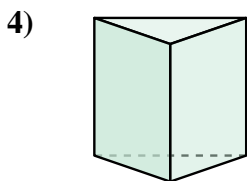
- A. cube
- B. triangular pyramid
- C. triangular prism
- D. rectangular pyramid



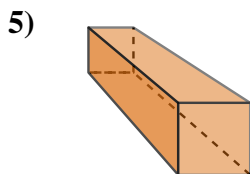
- A. triangular pyramid
- B. sphere
- C. triangular prism
- D. cone



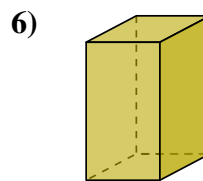
- A. sphere
- B. cube
- C. cylinder
- D. rectangular pyramid



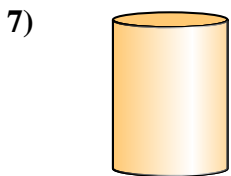
- A. rectangular prism
- B. cube
- C. triangular pyramid
- D. triangular prism



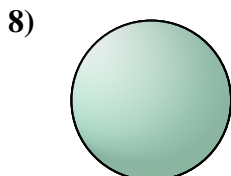
- A. rectangular pyramid
- B. cone
- C. triangular prism
- D. rectangular prism



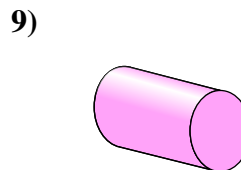
- A. cube
- B. rectangular prism
- C. sphere
- D. triangular pyramid



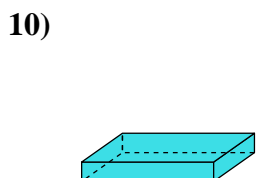
- A. cylinder
- B. cone
- C. rectangular prism
- D. sphere



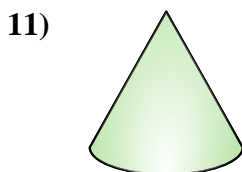
- A. cone
- B. cylinder
- C. sphere
- D. cube



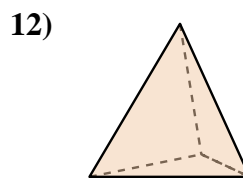
- A. cone
- B. cube
- C. cylinder
- D. rectangular prism



- A. triangular pyramid
- B. rectangular prism
- C. rectangular pyramid
- D. triangular prism



- A. cube
- B. triangular pyramid
- C. cone
- D. cylinder

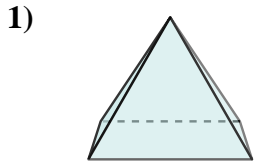


- A. cube
- B. triangular pyramid
- C. cone
- D. cylinder

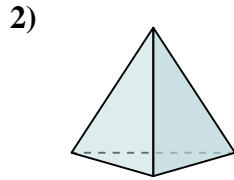
- 1. \_\_\_\_\_
- 2. \_\_\_\_\_
- 3. \_\_\_\_\_
- 4. \_\_\_\_\_
- 5. \_\_\_\_\_
- 6. \_\_\_\_\_
- 7. \_\_\_\_\_
- 8. \_\_\_\_\_
- 9. \_\_\_\_\_
- 10. \_\_\_\_\_
- 11. \_\_\_\_\_
- 12. \_\_\_\_\_



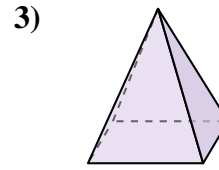
Determine which choice BEST describes the shape shown.



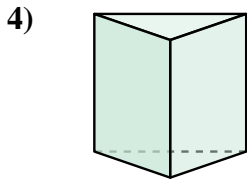
- 1) A. cube  
 B. triangular pyramid  
 C. triangular prism  
 D. rectangular pyramid



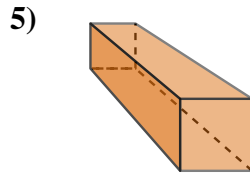
- 2) A. triangular pyramid  
 B. sphere  
 C. triangular prism  
 D. cone



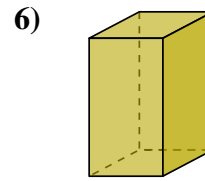
- 3) A. sphere  
 B. cube  
 C. cylinder  
 D. rectangular pyramid



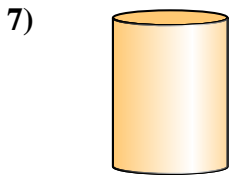
- 4) A. rectangular prism  
 B. cube  
 C. triangular pyramid  
 D. triangular prism



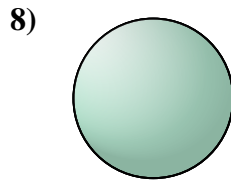
- 5) A. rectangular pyramid  
 B. cone  
 C. triangular prism  
 D. rectangular prism



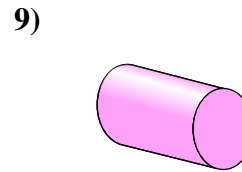
- 6) A. cube  
 B. rectangular prism  
 C. sphere  
 D. triangular pyramid



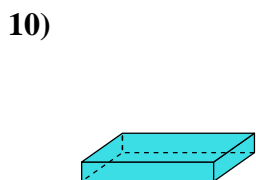
- 7) A. cylinder  
 B. cone  
 C. rectangular prism  
 D. sphere



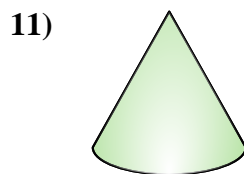
- 8) A. cone  
 B. cylinder  
 C. sphere  
 D. cube



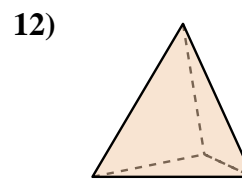
- 9) A. cone  
 B. cube  
 C. cylinder  
 D. rectangular prism



- 10) A. triangular pyramid  
 B. rectangular prism  
 C. rectangular pyramid  
 D. triangular prism



- 11) A. cube  
 B. triangular pyramid  
 C. cone  
 D. cylinder



- 12) A. cube  
 B. triangular pyramid  
 C. cone  
 D. cylinder

**Answers**

1. **D**  
 2. **A**  
 3. **D**  
 4. **D**  
 5. **D**  
 6. **B**  
 7. **A**  
 8. **C**  
 9. **C**  
 10. **B**  
 11. **C**  
 12. **B**