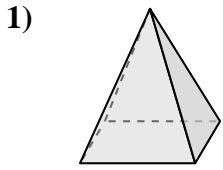





Determine which choice BEST describes the shape shown.

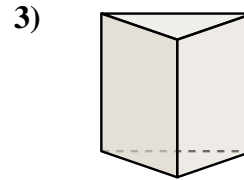
Answers



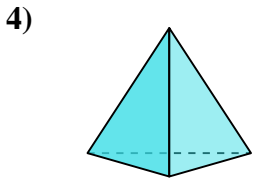
- A. sphere
- B. rectangular prism
- C. rectangular pyramid
- D. cube



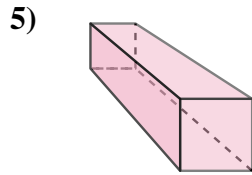
- A. cylinder
- B. rectangular pyramid
- C. rectangular prism
- D. sphere



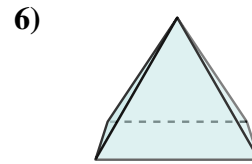
- A. triangular prism
- B. cylinder
- C. sphere
- D. cube



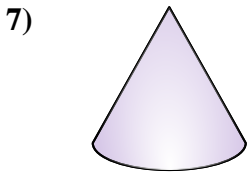
- A. triangular pyramid
- B. cube
- C. rectangular pyramid
- D. sphere



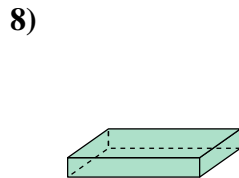
- A. rectangular prism
- B. sphere
- C. rectangular pyramid
- D. triangular pyramid



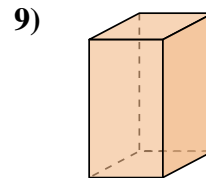
- A. sphere
- B. cube
- C. rectangular pyramid
- D. triangular prism



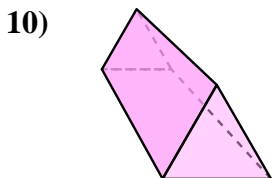
- A. cube
- B. cone
- C. triangular pyramid
- D. sphere



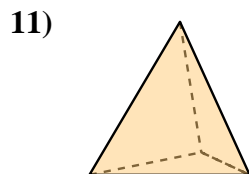
- A. cylinder
- B. rectangular prism
- C. sphere
- D. cube



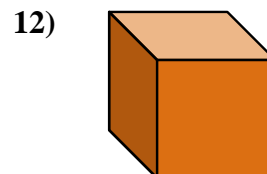
- A. cone
- B. cylinder
- C. triangular prism
- D. rectangular prism



- A. rectangular pyramid
- B. sphere
- C. triangular prism
- D. cylinder



- A. cube
- B. cylinder
- C. cone
- D. triangular pyramid

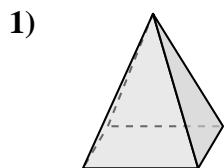


- A. cube
- B. rectangular prism
- C. rectangular pyramid
- D. triangular pyramid


- 1. _____
- 2. _____
- 3. _____
- 4. _____
- 5. _____
- 6. _____
- 7. _____
- 8. _____
- 9. _____
- 10. _____
- 11. _____
- 12. _____



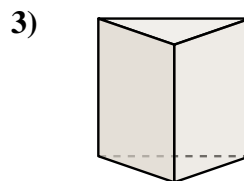
Determine which choice BEST describes the shape shown.



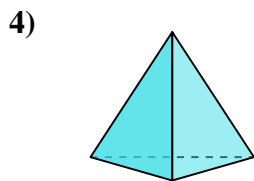
- 1) A. sphere
- B. rectangular prism
- C. rectangular pyramid
- D. cube



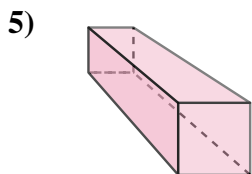
- 2) A. cylinder
- B. rectangular pyramid
- C. rectangular prism
- D. sphere



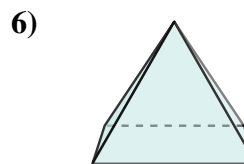
- 3) A. triangular prism
- B. cylinder
- C. sphere
- D. cube



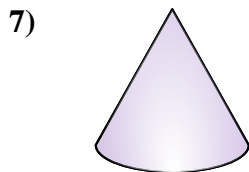
- 4) A. triangular pyramid
- B. cube
- C. rectangular pyramid
- D. sphere



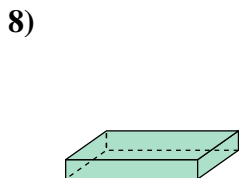
- 5) A. rectangular prism
- B. sphere
- C. rectangular pyramid
- D. triangular pyramid



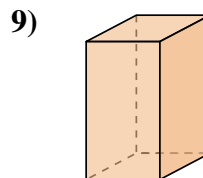
- 6) A. sphere
- B. cube
- C. rectangular pyramid
- D. triangular prism



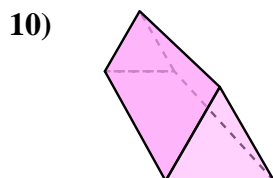
- 7) A. cube
- B. cone
- C. triangular pyramid
- D. sphere



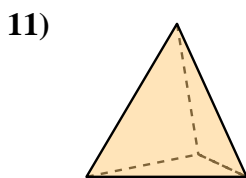
- 8) A. cylinder
- B. rectangular prism
- C. sphere
- D. cube



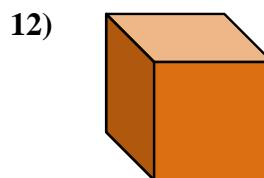
- 9) A. cone
- B. cylinder
- C. triangular prism
- D. rectangular prism



- 10) A. rectangular pyramid
- B. sphere
- C. triangular prism
- D. cylinder



- 11) A. cube
- B. cylinder
- C. cone
- D. triangular pyramid



- 12) A. cube
- B. rectangular prism
- C. rectangular pyramid
- D. triangular pyramid

Answers

- 1. **C**
- 2. **D**
- 3. **A**
- 4. **A**
- 5. **A**
- 6. **C**
- 7. **B**
- 8. **B**
- 9. **D**
- 10. **C**
- 11. **D**
- 12. **A**