



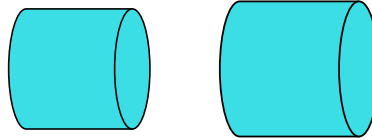
Determine if the shapes shown are 'similar', 'congruent' or 'neither'.

Answers

1)



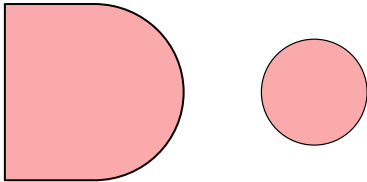
2)



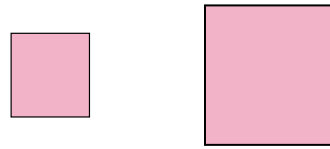
1. \_\_\_\_\_

2. \_\_\_\_\_

3)



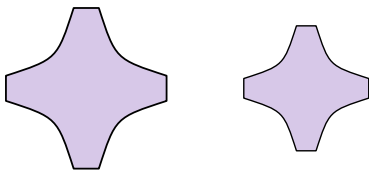
4)



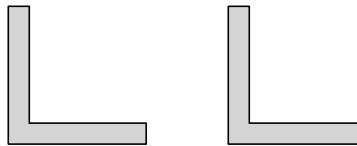
3. \_\_\_\_\_

4. \_\_\_\_\_

5)



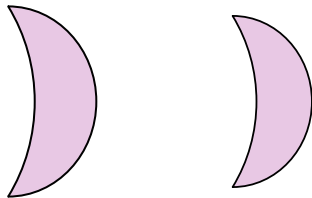
6)



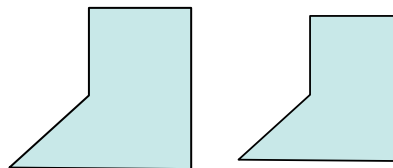
5. \_\_\_\_\_

6. \_\_\_\_\_

7)




8)



8. \_\_\_\_\_

9. \_\_\_\_\_

9)




10)



10. \_\_\_\_\_

11. \_\_\_\_\_

11)



12)



12. \_\_\_\_\_

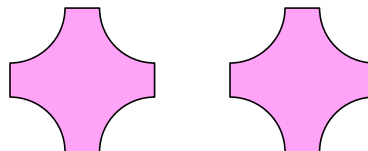
13. \_\_\_\_\_

14. \_\_\_\_\_

13)



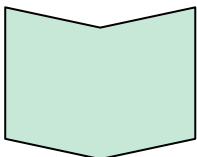
14)



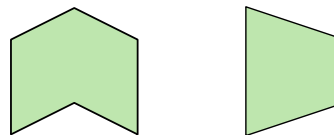
15. \_\_\_\_\_

16. \_\_\_\_\_

15)



16)



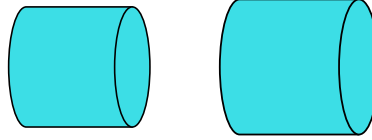


Determine if the shapes shown are 'similar', 'congruent' or 'neither'.

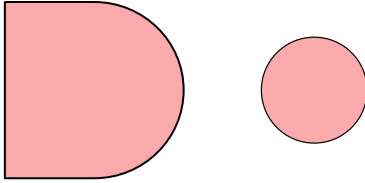
1)



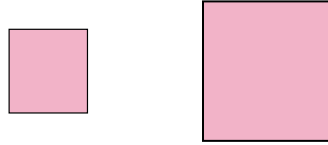
2)



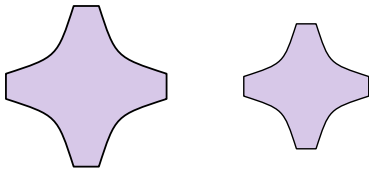
3)



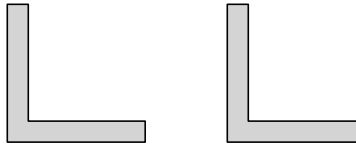
4)



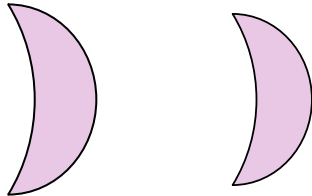
5)



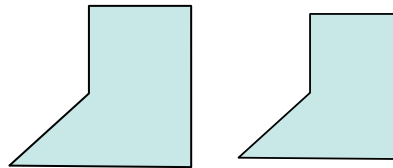
6)




7)



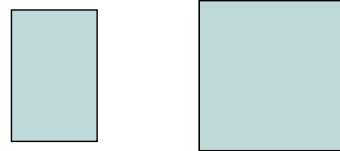
8)




9)



10)



11)



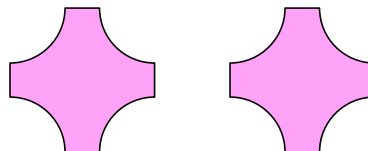
12)



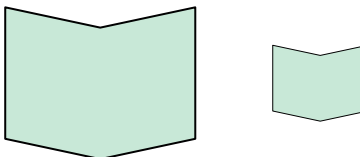
13)



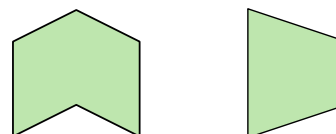
14)



15)



16)



Answers

1. neither

2. similar

3. neither

4. similar

5. similar

6. congruent

7. similar

8. similar

9. neither

10. neither

11. congruent

12. congruent

13. congruent

14. congruent

15. similar

16. neither