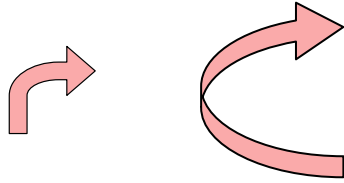




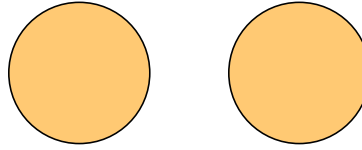
Determine if the shapes shown are 'similar', 'congruent' or 'neither'.

Answers

1)

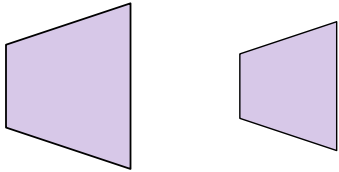


2)



1. \_\_\_\_\_

3)



4)

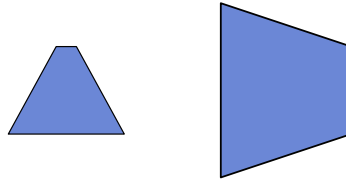


2. \_\_\_\_\_

5)

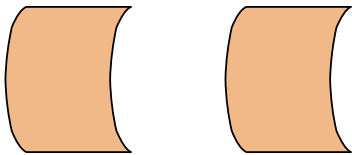


6)



3. \_\_\_\_\_

7)

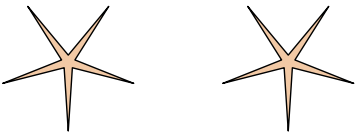


8)

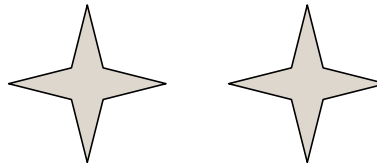


4. \_\_\_\_\_

9)

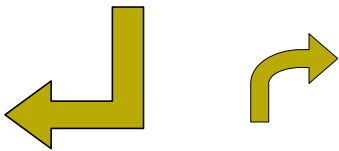


10)



5. \_\_\_\_\_

11)

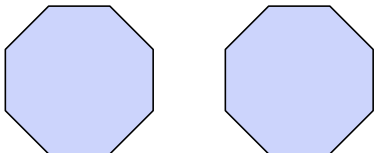


12)

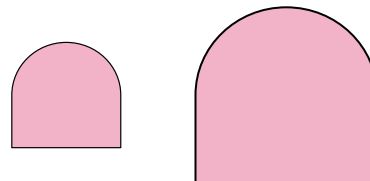


6. \_\_\_\_\_

13)

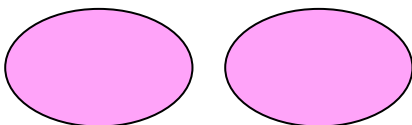


14)




7. \_\_\_\_\_

15)



16)



8. \_\_\_\_\_

9. \_\_\_\_\_

10. \_\_\_\_\_

11. \_\_\_\_\_

12. \_\_\_\_\_

13. \_\_\_\_\_

14. \_\_\_\_\_

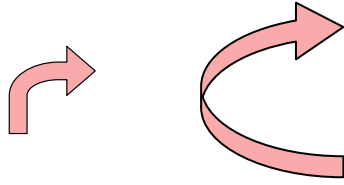
15. \_\_\_\_\_

16. \_\_\_\_\_

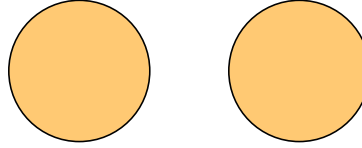


Determine if the shapes shown are 'similar', 'congruent' or 'neither'.

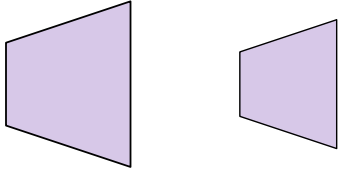
1)



2)



3)



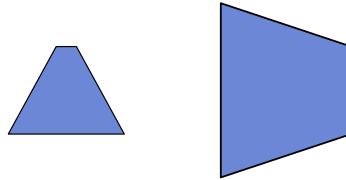
4)



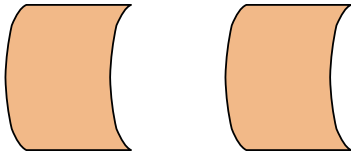
5)



6)



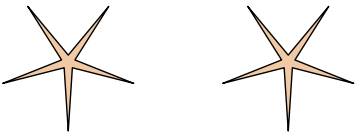
7)



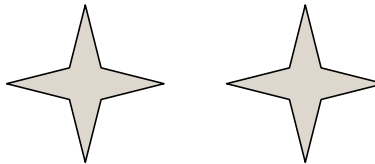
8)



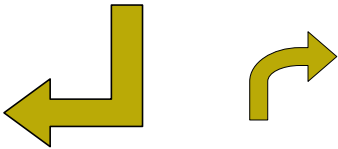
9)



10)



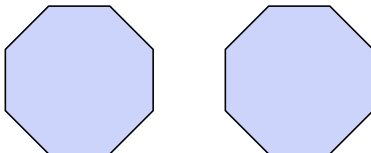
11)



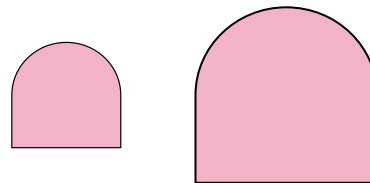
12)



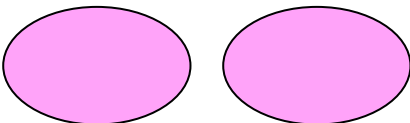
13)




14)



15)



16)



Answers

1. neither

2. congruent

3. similar

4. neither

5. congruent

6. neither

7. congruent

8. similar

9. congruent

10. congruent

11. neither

12. neither

13. congruent

14. similar

15. congruent

16. similar