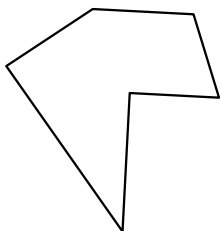





Identify the type of shape shown.

Answers

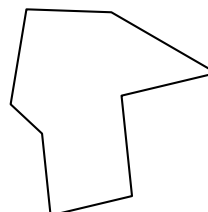
1)



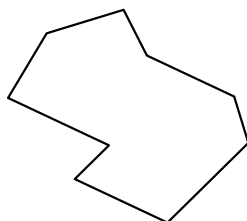
2)



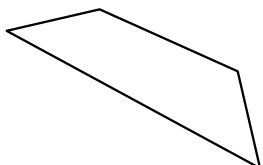
3)



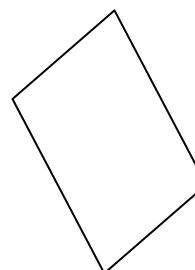
4)




5)



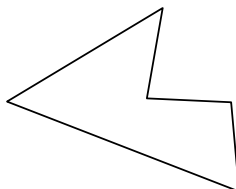
6)



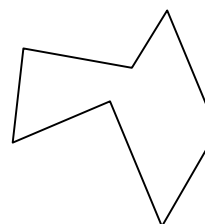
7)



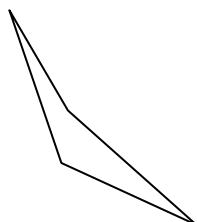
8)



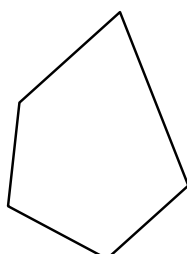
9)




10)



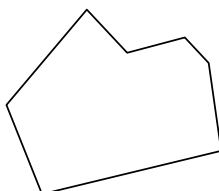
11)



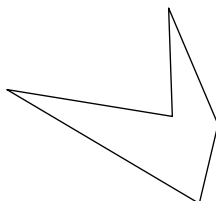
12)



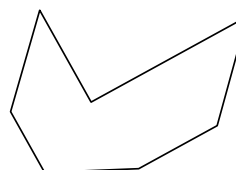
13)




14)



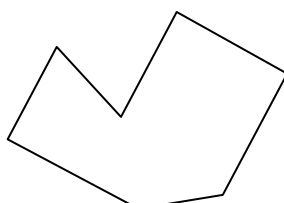
15)



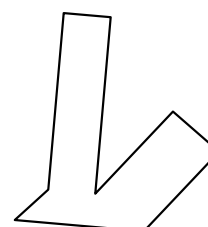
16)



17)



18)



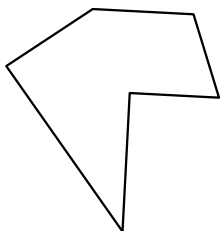
1. _____
2. _____
3. _____
4. _____
5. _____
6. _____
7. _____
8. _____
9. _____
10. _____
11. _____
12. _____
13. _____
14. _____
15. _____
16. _____
17. _____
18. _____
19. _____
20. _____

21.




Identify the type of shape shown.

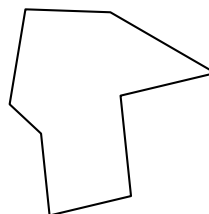
1)



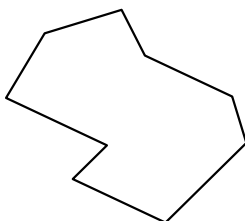
2)



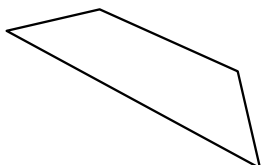
3)



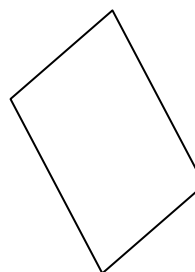
4)




5)



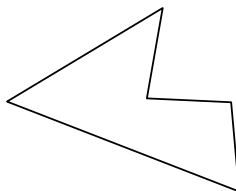
6)



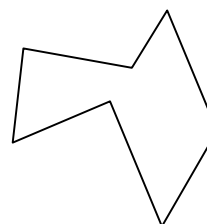
7)



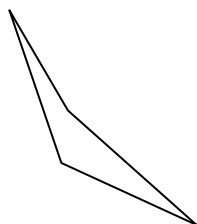
8)



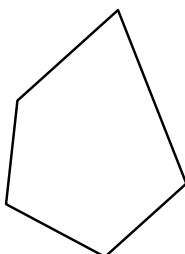
9)



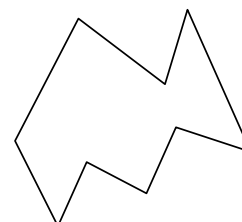
10)



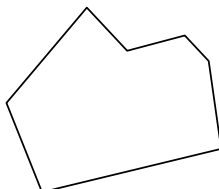
11)



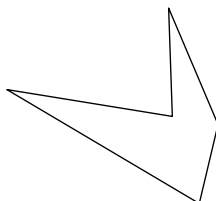
12)



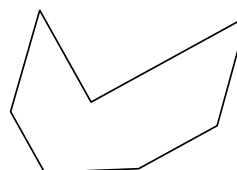
13)




14)



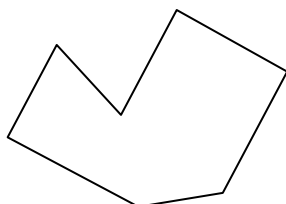
15)



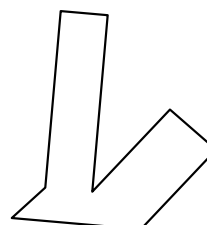
16)



17)



18)

**Answers**1. **hexagon**2. **nonagon**3. **octagon**4. **nonagon**5. **quadrilateral**6. **quadrilateral**7. **quadrilateral**8. **pentagon**9. **heptagon**10. **quadrilateral**11. **pentagon**12. **nonagon**13. **heptagon**14. **pentagon**15. **heptagon**16. **hexagon**17. **heptagon**18. **octagon**19. **octagon**20. **heptagon**21. **octagon**