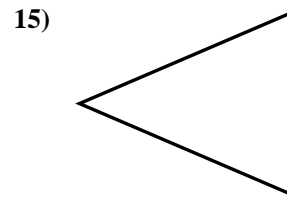
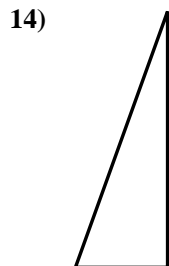
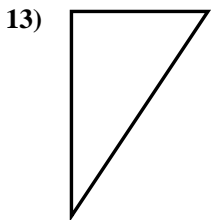
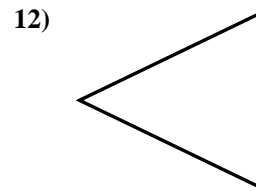
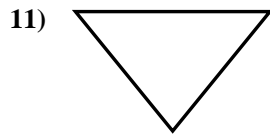


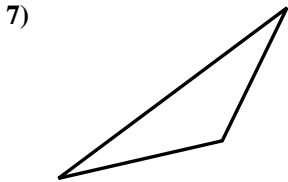
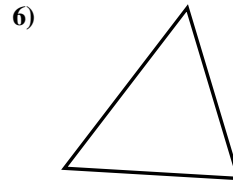
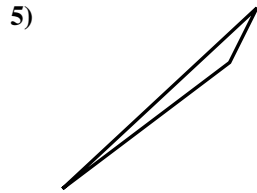
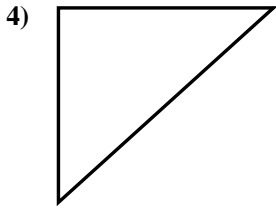
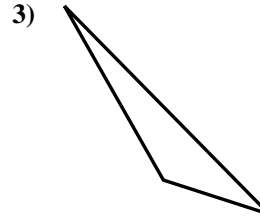
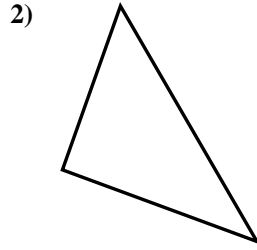
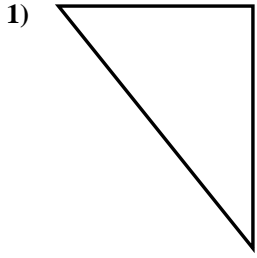




Determine if the triangle shown is a right triangle (yes) or not (no).

Answers

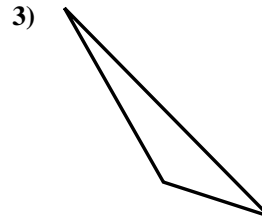
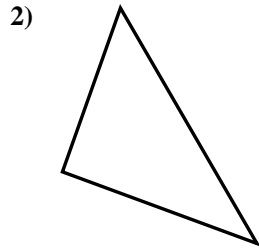
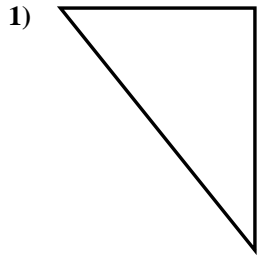


- 1. _____
- 2. _____
- 3. _____
- 4. _____
- 5. _____
- 6. _____
- 7. _____
- 8. _____
- 9. _____
- 10. _____
- 11. _____
- 12. _____
- 13. _____
- 14. _____
- 15. _____

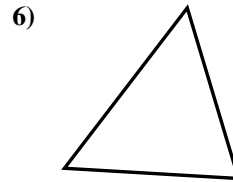

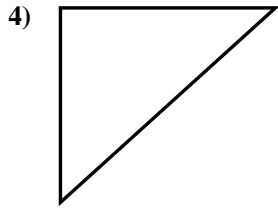


Determine if the triangle shown is a right triangle (yes) or not (no).

Answers



1. yes




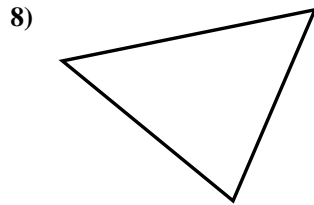
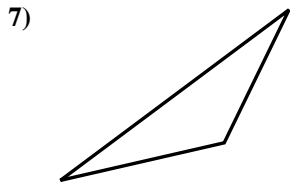
2. yes

3. no

4. yes

5. no

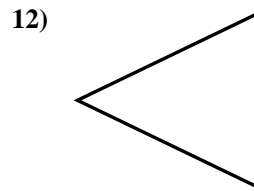
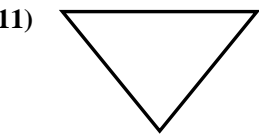
6. no



7. no

8. no

9. yes



10. yes

11. no

12. no

13. yes

14. yes

15. no

