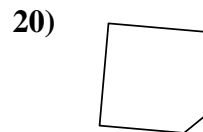
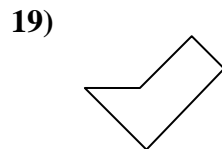
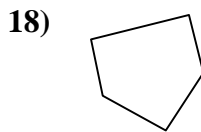
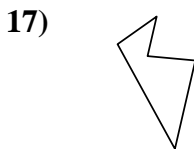
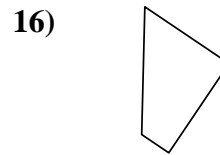
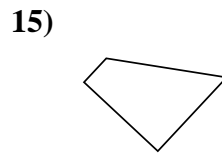
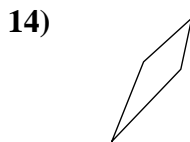
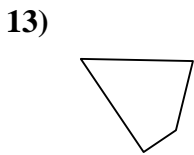
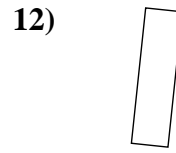
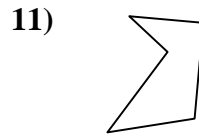
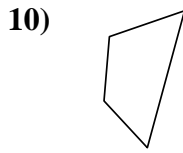
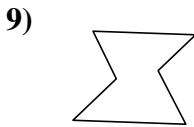
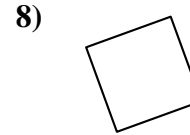
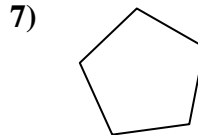
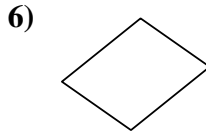
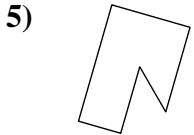
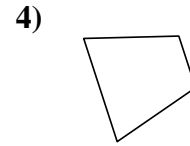
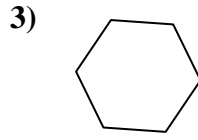
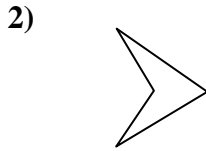
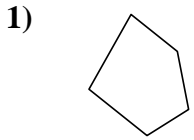




Determine if the shape shown is a quadrilateral (yes) or not (no).

Answers

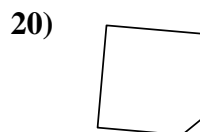
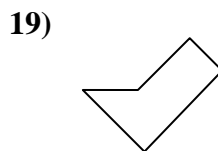
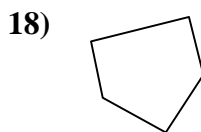
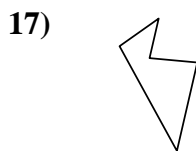
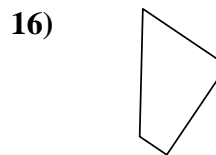
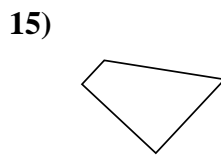
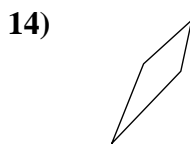
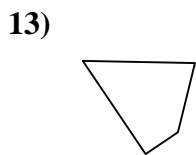
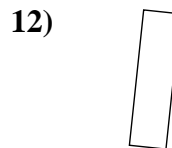
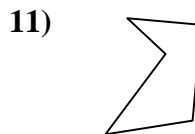
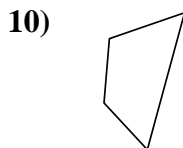
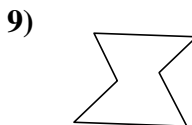
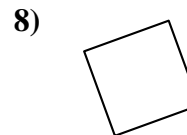
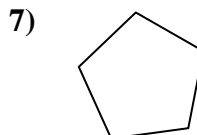
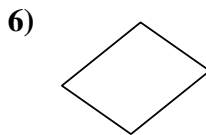
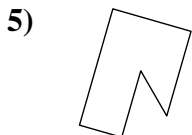
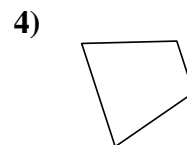
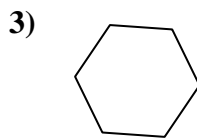
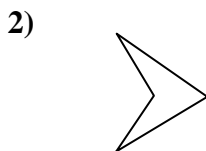
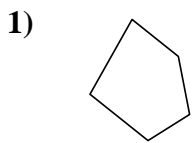


- 1. \_\_\_\_\_
- 2. \_\_\_\_\_
- 3. \_\_\_\_\_
- 4. \_\_\_\_\_
- 5. \_\_\_\_\_
- 6. \_\_\_\_\_
- 7. \_\_\_\_\_
- 8. \_\_\_\_\_
- 9. \_\_\_\_\_
- 10. \_\_\_\_\_
- 11. \_\_\_\_\_
- 12. \_\_\_\_\_
- 13. \_\_\_\_\_
- 14. \_\_\_\_\_
- 15. \_\_\_\_\_
- 16. \_\_\_\_\_
- 17. \_\_\_\_\_
- 18. \_\_\_\_\_
- 19. \_\_\_\_\_
- 20. \_\_\_\_\_



Determine if the shape shown is a quadrilateral (yes) or not (no).

Answers



1. no

2. yes

3. no

4. yes

5. no

6. yes

7. no

8. yes

9. no

10. yes

11. no

12. yes

13. yes

14. yes

15. yes

16. yes

17. no

18. no

19. no

20. no