



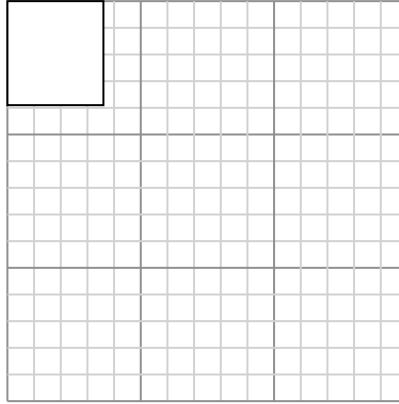
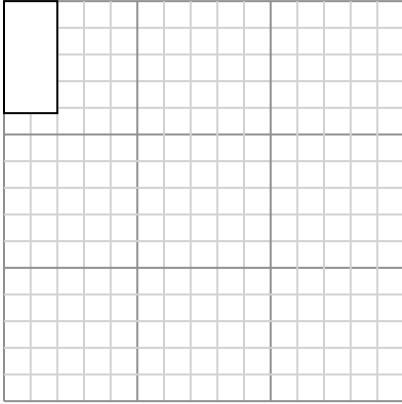
Draw each rectangle to the scale shown and determine the new dimensions.

Answers

- 1) The rectangle below has the dimensions:
 2×4.2

- 2) The rectangle below has the dimensions:
 3.6×3.9

1. _____



2. _____

Create another rectangle that is scaled to 9 times the size of the current rectangle.

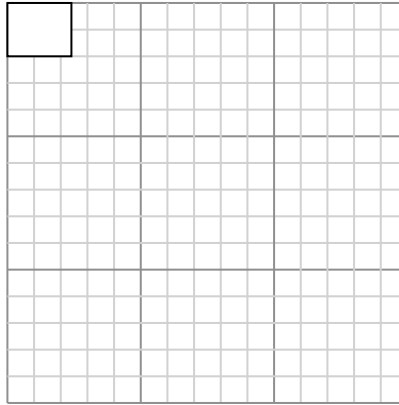
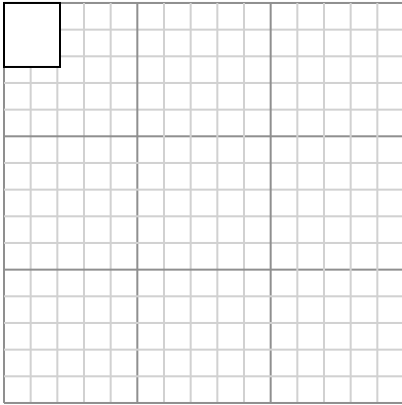
Create another rectangle that is scaled to 9 times the size of the current rectangle.

3. _____

- 3) The rectangle below has the dimensions:
 2.1×2.4

- 4) The rectangle below has the dimensions:
 2.4×2

4. _____



5. _____

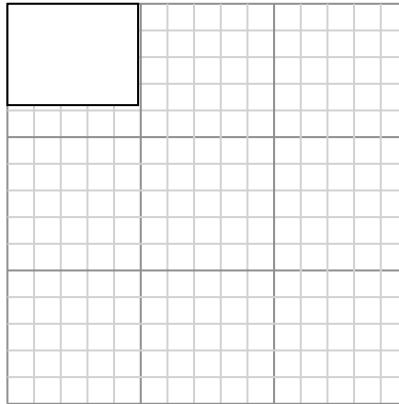
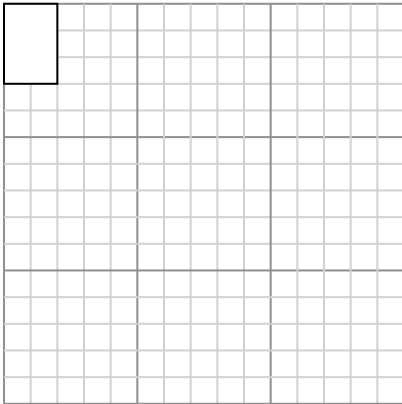
Create another rectangle that is scaled to 16 times the size of the current rectangle.

Create another rectangle that is scaled to 9 times the size of the current rectangle.

6. _____

- 5) The rectangle below has the dimensions:
 2×3

- 6) The rectangle below has the dimensions:
 4.9×3.8



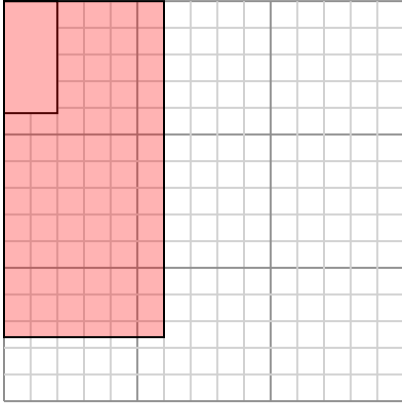
Create another rectangle that is scaled to 16 times the size of the current rectangle.

Create another rectangle that is scaled to 9 times the size of the current rectangle.



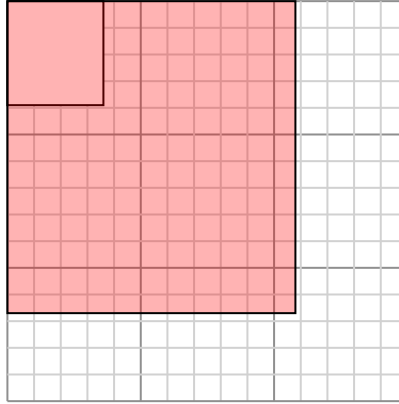
Draw each rectangle to the scale shown and determine the new dimensions.

- 1) The rectangle below has the dimensions:
 2×4.2



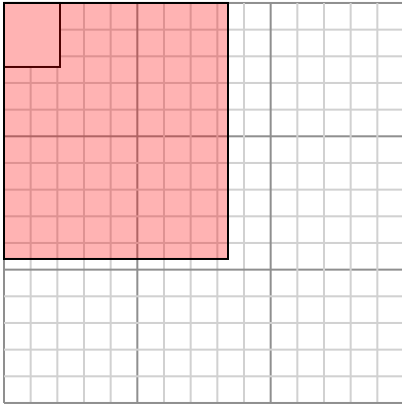
Create another rectangle that is scaled to 9 times the size of the current rectangle.

- 2) The rectangle below has the dimensions:
 3.6×3.9



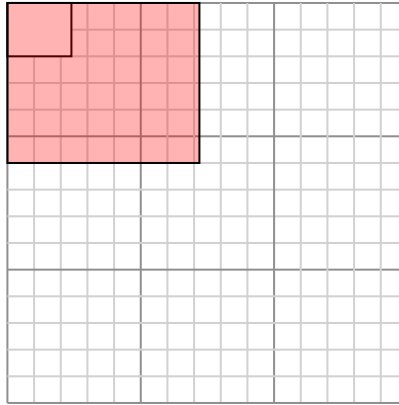
Create another rectangle that is scaled to 9 times the size of the current rectangle.

- 3) The rectangle below has the dimensions:
 2.1×2.4



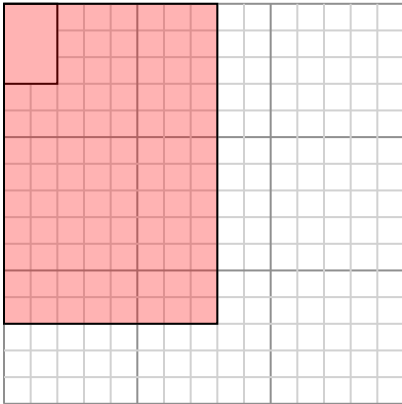
Create another rectangle that is scaled to 16 times the size of the current rectangle.

- 4) The rectangle below has the dimensions:
 2.4×2



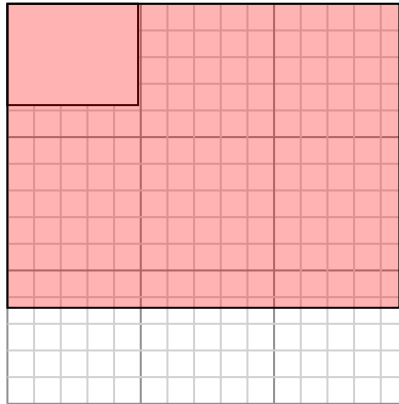
Create another rectangle that is scaled to 9 times the size of the current rectangle.

- 5) The rectangle below has the dimensions:
 2×3



Create another rectangle that is scaled to 16 times the size of the current rectangle.

- 6) The rectangle below has the dimensions:
 4.9×3.8



Create another rectangle that is scaled to 9 times the size of the current rectangle.

Answers

1. 6×12.6

2. 10.8×11.7

3. 8.4×9.6

4. 7.2×6

5. 8×12

6. 14.7×11.4