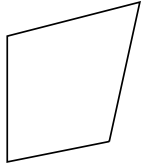




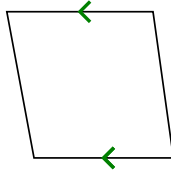
Determine if the shape shown is a Quadrilateral, Kite, Trapezoid, Parallelogram, Rhombus, Rectangle or Square (can be more than one).

Answers

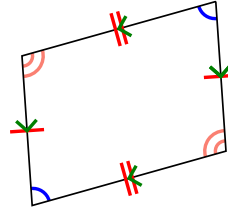
1)



2)



3)



1. _____

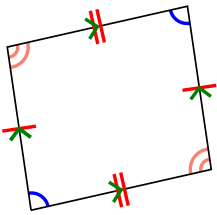
2. _____

3. _____

4. _____

5. _____

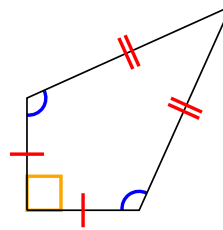
4)



5)



6)



6. _____

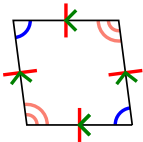
7. _____

8. _____

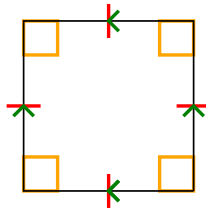
9. _____

10. _____

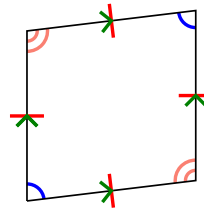
7)



8)



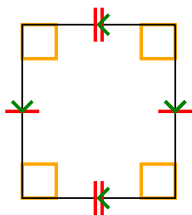
9)



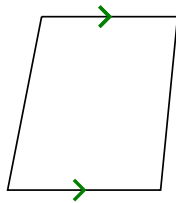
11. _____

12. _____

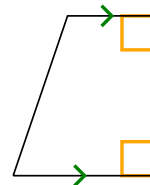
10)



11)



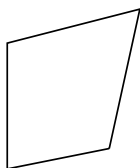
12)



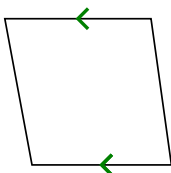


Determine if the shape shown is a Quadrilateral, Kite, Trapezoid, Parallelogram, Rhombus, Rectangle or Square (can be more than one).

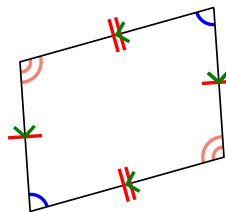
1)



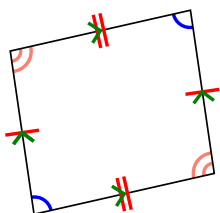
2)



3)



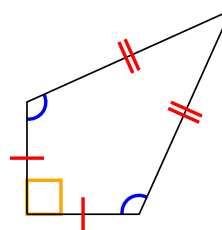
4)



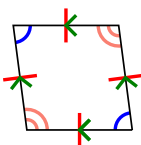
5)



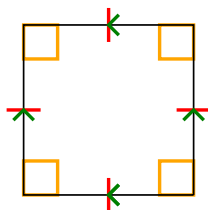
6)



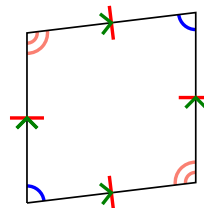
7)



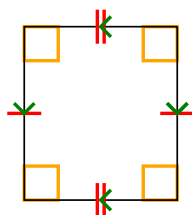
8)



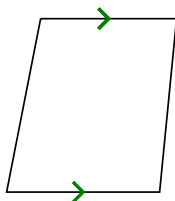
9)



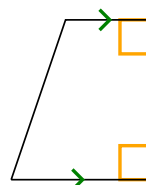
10)



11)



12)



Answers

1. Q

2. Q,T

3. Q,P

4. Q,P

5. Q

6. Q,K

7. Q,P,H

8. Q,P,H,R,S

9. Q,P,H

10. Q,P,R

11. Q,T

12. Q,T