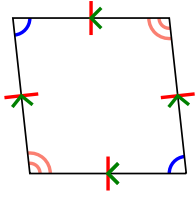




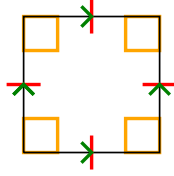
Determine if the shape shown is a Quadrilateral, Kite, Trapezoid, Parallelogram, Rhombus, Rectangle or Square (can be more than one).

Answers

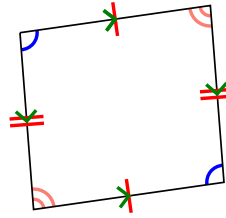
1)



2)



3)



1. _____


2. _____

3. _____

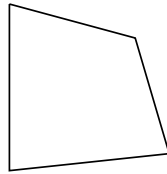
4. _____

5. _____

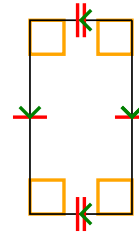
4)



5)



6)



6. _____

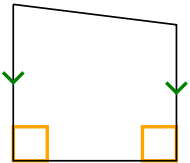
7. _____

8. _____

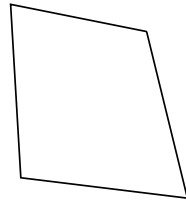
9. _____

10. _____

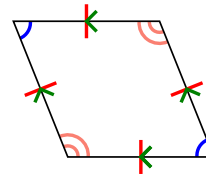
7)



8)



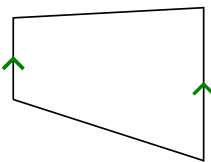
9)



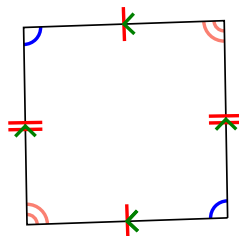
11. _____

12. _____

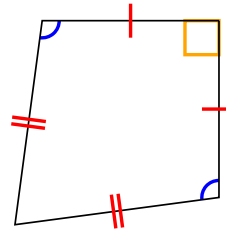
10)



11)



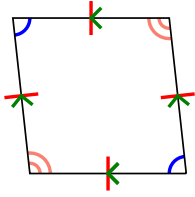
12)



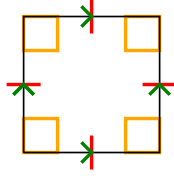


Determine if the shape shown is a Quadrilateral, Kite, Trapezoid, Parallelogram, Rhombus, Rectangle or Square (can be more than one).

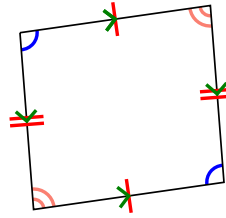
1)



2)



3)



1. Q,P,H


2. Q,P,H,R,S

3. Q,P

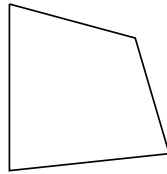
4. Q

5. Q

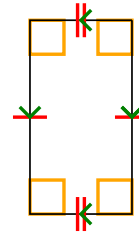
4)



5)



6)

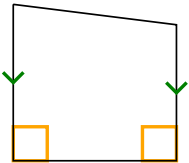


6. Q,P,R

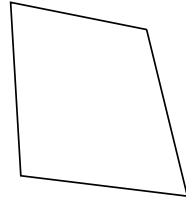
7. Q,T

8. Q

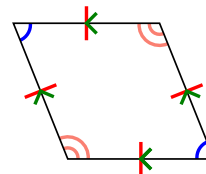
7)



8)



9)

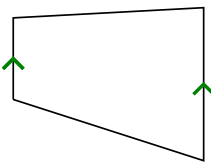


9. Q,P,H

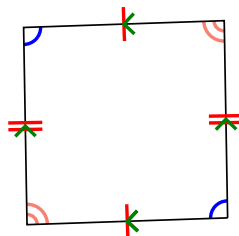
10. Q,T

11. Q,P

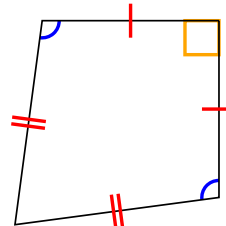
10)



11)



12)



12. Q,K