



Mark the location (approximate) on the numberline and then solve.

Answers

1) Round 8,239,664 to the nearest hundred thousand.



1. _____

2) Round 506 to the nearest hundred.



2. _____

3) Round 7,767 to the nearest thousand.



3. _____

4) Round 847,855 to the nearest hundred.



4. _____

5) Round 764 to the nearest hundred.



5. _____

6) Round 12,826 to the nearest ten thousand.



6. _____

7) Round 37,613 to the nearest ten thousand.



7. _____

8) Round 7,043,976 to the nearest thousand.



8. _____

9) Round 6,924 to the nearest thousand.



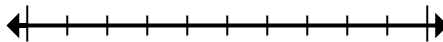
9. _____

10) Round 32,349,406 to the nearest hundred thousand.



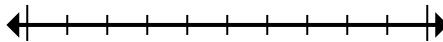
10. _____

11) Round 309,861 to the nearest hundred thousand.



11. _____

12) Round 8,406,844 to the nearest hundred.

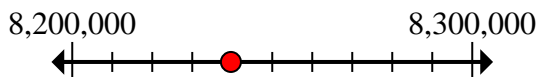


12. _____

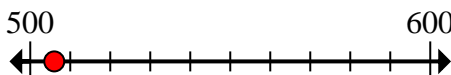


Mark the location (approximate) on the numberline and then solve.

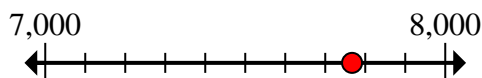
- 1) Round 8,239,664 to the nearest hundred thousand.



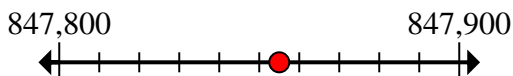
- 2) Round 506 to the nearest hundred.



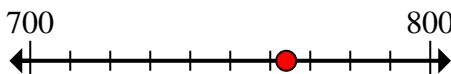
- 3) Round 7,767 to the nearest thousand.



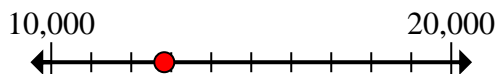
- 4) Round 847,855 to the nearest hundred.



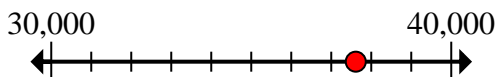
- 5) Round 764 to the nearest hundred.



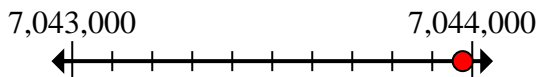
- 6) Round 12,826 to the nearest ten thousand.



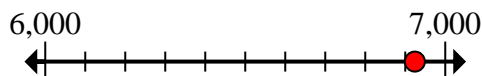
- 7) Round 37,613 to the nearest ten thousand.



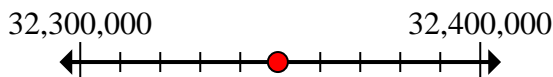
- 8) Round 7,043,976 to the nearest thousand.



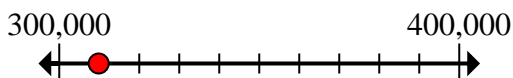
- 9) Round 6,924 to the nearest thousand.



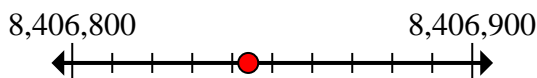
- 10) Round 32,349,406 to the nearest hundred thousand.



- 11) Round 309,861 to the nearest hundred thousand.



- 12) Round 8,406,844 to the nearest hundred.

**Answers**1. **8,200,000**2. **500**3. **8,000**4. **847,900**5. **800**6. **10,000**7. **40,000**8. **7,044,000**9. **7,000**10. **32,300,000**11. **300,000**12. **8,406,800**



Mark the location (approximate) on the numberline and then solve.

Answers

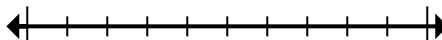
40,000	847,900	800	10,000
300,000	8,406,800	7,044,000	7,000
8,000	500	32,300,000	8,200,000

1) Round 8,239,664 to the nearest hundred thousand.



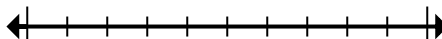
1. _____

2) Round 506 to the nearest hundred.



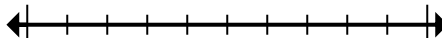
2. _____

3) Round 7,767 to the nearest thousand.



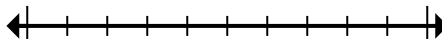
3. _____

4) Round 847,855 to the nearest hundred.



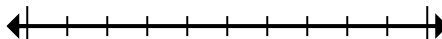
4. _____

5) Round 764 to the nearest hundred.



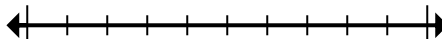
5. _____

6) Round 12,826 to the nearest ten thousand.



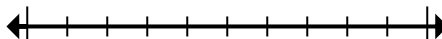
6. _____

7) Round 37,613 to the nearest ten thousand.



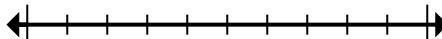
7. _____

8) Round 7,043,976 to the nearest thousand.



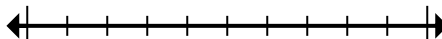
8. _____

9) Round 6,924 to the nearest thousand.



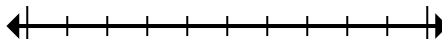
9. _____

10) Round 32,349,406 to the nearest hundred thousand.



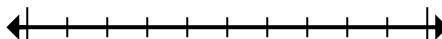
10. _____

11) Round 309,861 to the nearest hundred thousand.



11. _____

12) Round 8,406,844 to the nearest hundred.



12. _____