



Mark the location (approximate) on the numberline and then solve.

Answers

1) Round 60,393,636 to the nearest hundred thousand.



1. \_\_\_\_\_

2) Round 94,001 to the nearest ten thousand.



2. \_\_\_\_\_

3) Round 665 to the nearest hundred.



3. \_\_\_\_\_

4) Round 257 to the nearest hundred.



4. \_\_\_\_\_

5) Round 888,081 to the nearest ten thousand.



5. \_\_\_\_\_

6) Round 2,138 to the nearest thousand.



6. \_\_\_\_\_

7) Round 3,390 to the nearest thousand.



7. \_\_\_\_\_

8) Round 8,542,890 to the nearest ten thousand.



8. \_\_\_\_\_

9) Round 515,011 to the nearest hundred thousand.



9. \_\_\_\_\_

10) Round 962,363 to the nearest hundred.



10. \_\_\_\_\_

11) Round 656,429 to the nearest hundred thousand.



11. \_\_\_\_\_

12) Round 87,606 to the nearest ten thousand.

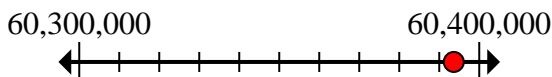


12. \_\_\_\_\_

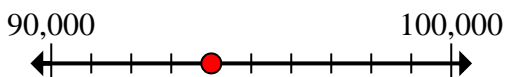


Mark the location (approximate) on the numberline and then solve.

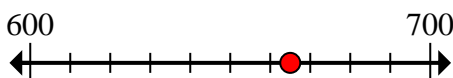
- 1) Round 60,393,636 to the nearest hundred thousand.



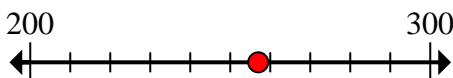
- 2) Round 94,001 to the nearest ten thousand.



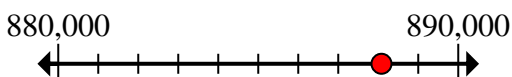
- 3) Round 665 to the nearest hundred.



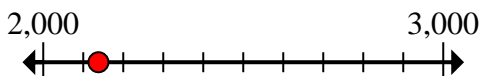
- 4) Round 257 to the nearest hundred.



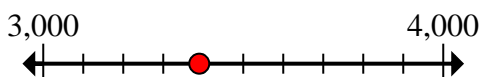
- 5) Round 888,081 to the nearest ten thousand.



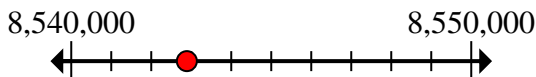
- 6) Round 2,138 to the nearest thousand.



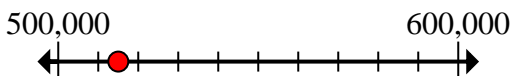
- 7) Round 3,390 to the nearest thousand.



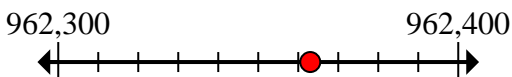
- 8) Round 8,542,890 to the nearest ten thousand.



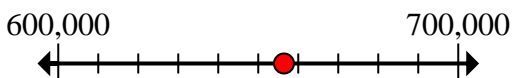
- 9) Round 515,011 to the nearest hundred thousand.



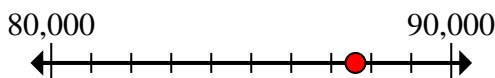
- 10) Round 962,363 to the nearest hundred.



- 11) Round 656,429 to the nearest hundred thousand.



- 12) Round 87,606 to the nearest ten thousand.

**Answers**1. **60,400,000**2. **90,000**3. **700**4. **300**5. **890,000**6. **2,000**7. **3,000**8. **8,540,000**9. **500,000**10. **962,400**11. **700,000**12. **90,000**



Mark the location (approximate) on the numberline and then solve.

**Answers**

2,000	60,400,000	700	90,000
90,000	700,000	3,000	8,540,000
962,400	300	500,000	890,000

1) Round 60,393,636 to the nearest hundred thousand.



2) Round 94,001 to the nearest ten thousand.



3) Round 665 to the nearest hundred.



4) Round 257 to the nearest hundred.



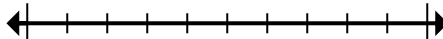
5) Round 888,081 to the nearest ten thousand.



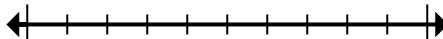
6) Round 2,138 to the nearest thousand.



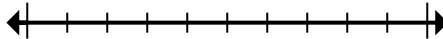
7) Round 3,390 to the nearest thousand.



8) Round 8,542,890 to the nearest ten thousand.



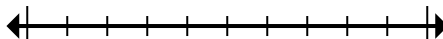
9) Round 515,011 to the nearest hundred thousand.



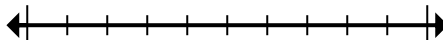
10) Round 962,363 to the nearest hundred.



11) Round 656,429 to the nearest hundred thousand.



12) Round 87,606 to the nearest ten thousand.



1. \_\_\_\_\_
2. \_\_\_\_\_
3. \_\_\_\_\_
4. \_\_\_\_\_
5. \_\_\_\_\_
6. \_\_\_\_\_
7. \_\_\_\_\_
8. \_\_\_\_\_
9. \_\_\_\_\_
10. \_\_\_\_\_
11. \_\_\_\_\_
12. \_\_\_\_\_