



Use the numberlines to round each number to the nearest 100.

Ex)

356



Ex. 400

1)

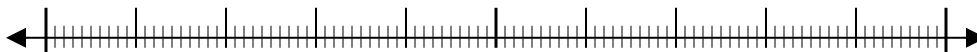
1,360



1. _____

2)

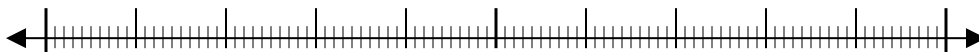
7,216



2. _____

3)

51,669



3. _____

4)

670



4. _____

5)

171



5. _____

6)

80,458



6. _____

7)

9,425



7. _____

8)

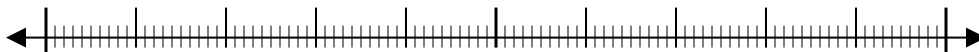
616



8. _____

9)

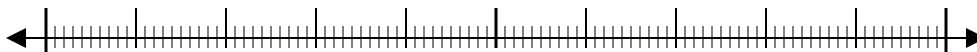
88,299



9. _____

10)

5,076

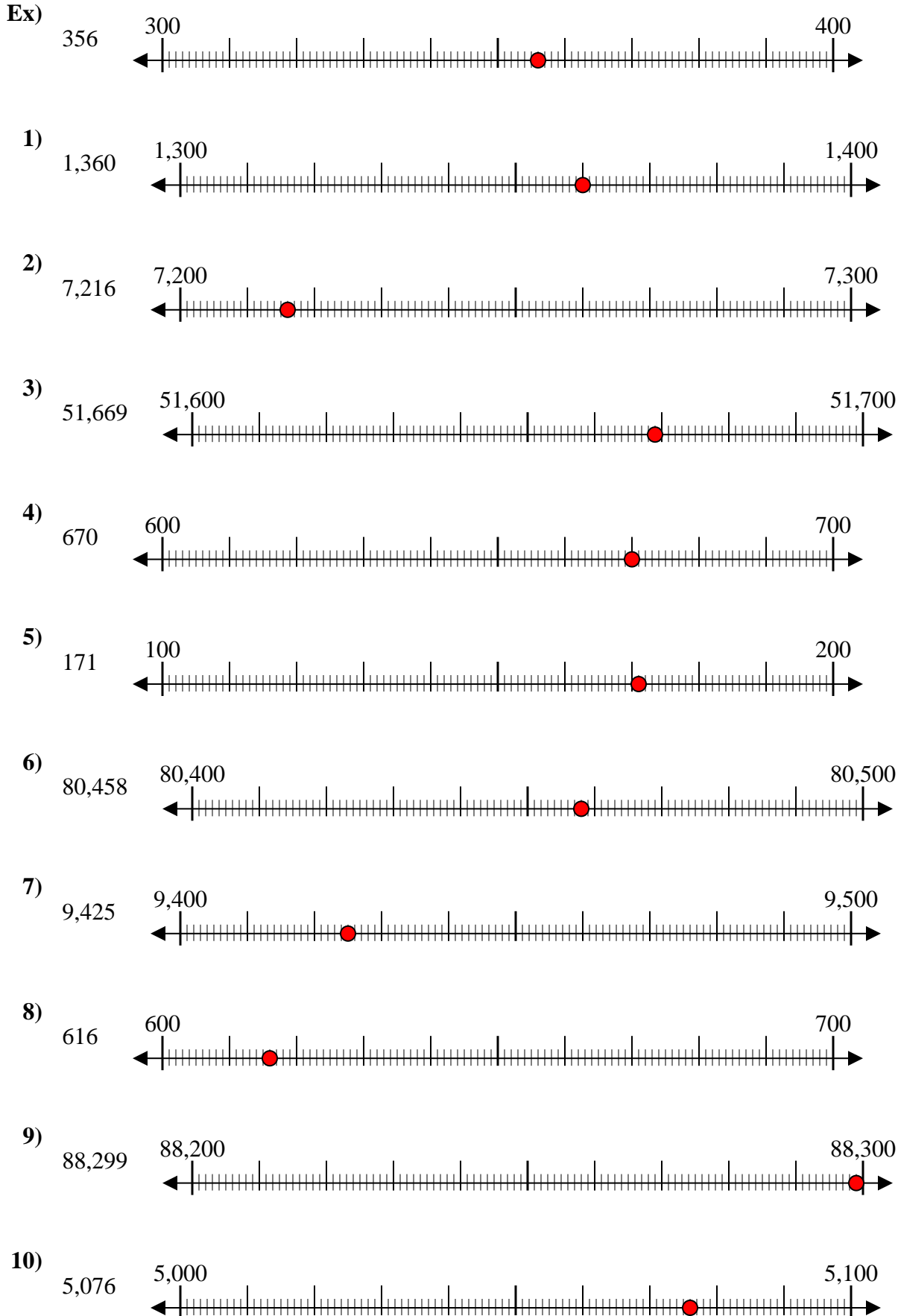


10. _____

Answers



Use the numberlines to round each number to the nearest 100.



Answers

- Ex. 400
1. 1,400
2. 7,200
3. 51,700
4. 700
5. 200
6. 80,500
7. 9,400
8. 600
9. 88,300
10. 5,100