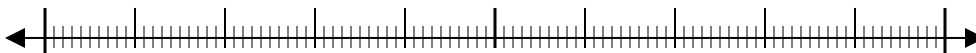




Use the numberlines to round each number to the nearest 100.

Ex)

612



Ex. 600

1)

9,223



1. _____

2)

17,922



2. _____

3)

87,465



3. _____

4)

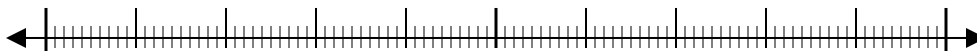
653



4. _____

5)

3,616



5. _____

6)

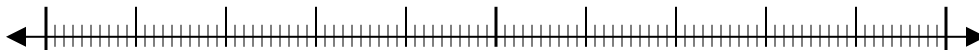
6,677



6. _____

7)

22,598



7. _____

8)

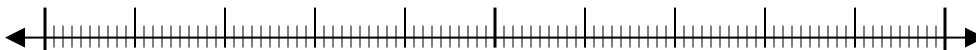
1,241



8. _____

9)

960



9. _____

10)

873

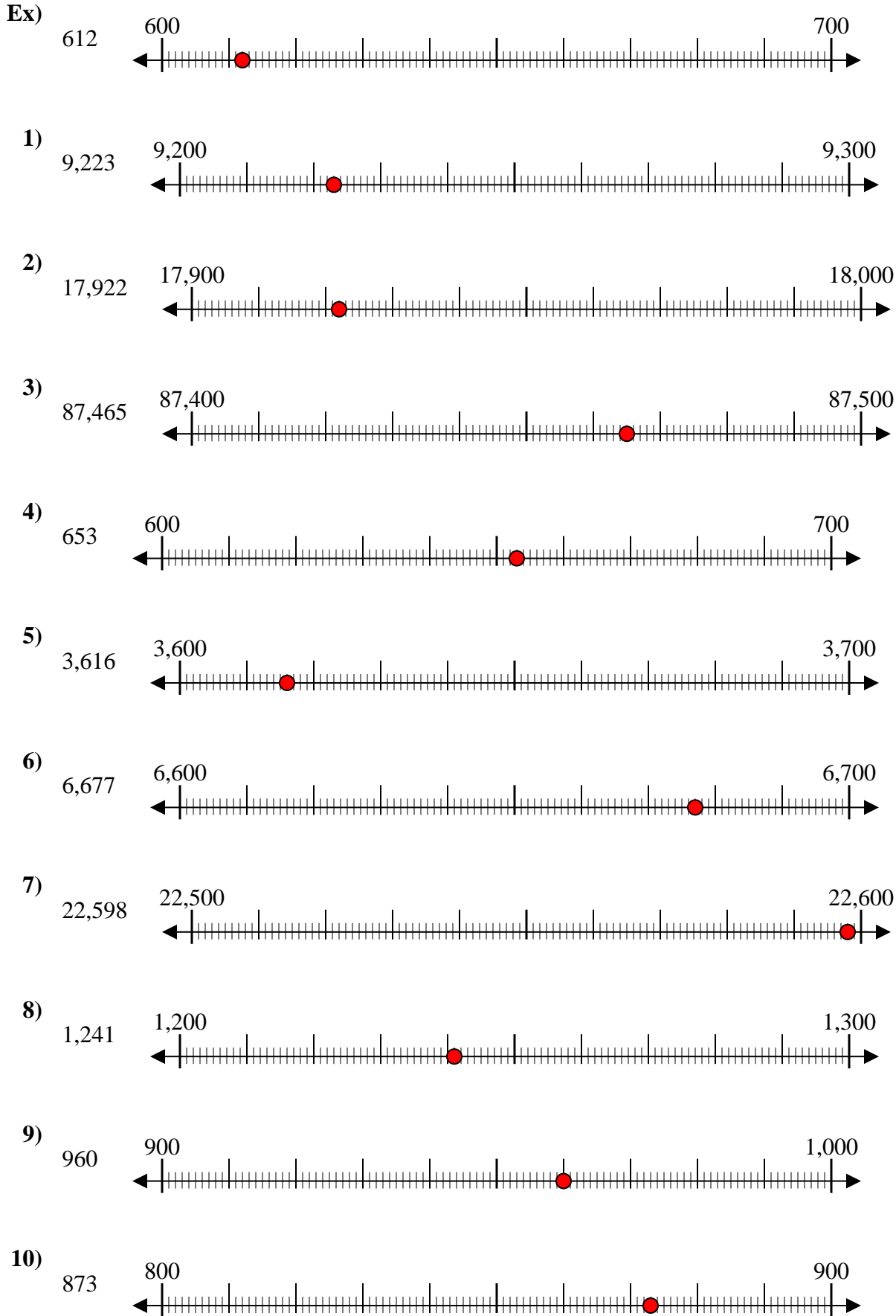


10. _____

Answers



Use the numberlines to round each number to the nearest 100.



Answers

- Ex. 600
- 1. 9,200
- 2. 17,900
- 3. 87,500
- 4. 700
- 5. 3,600
- 6. 6,700
- 7. 22,600
- 8. 1,200
- 9. 1,000
- 10. 900