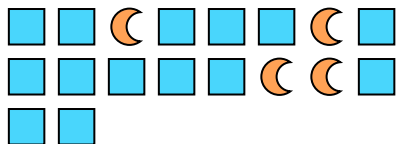




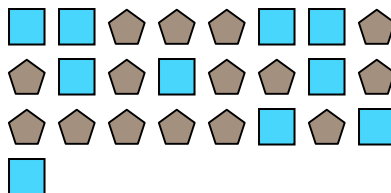


Solve each problem.

Ex) What is the ratio of squares to moons?




1) What is the ratio of squares to pentagons?




Answers

Ex. 14:4

2) What is the ratio of pentagons to triangles?



3) What is the ratio of moons to circles?




1. 10:15

2. 12:4

4) What is the ratio of triangles to hearts?



5) What is the ratio of circles to moons?



3. 9:10


4. 7:4

5. 8:8

6) What is the ratio of squares to circles?



7) What is the ratio of moons to squares?



6. 4:2

7. 8:13

8. 8:15

9. 6:11


10. 12:2

11. 6:9

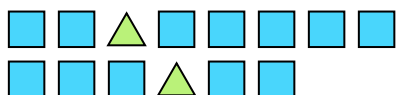
8) What is the ratio of pentagons to stars?



9) What is the ratio of squares to moons?



10) What is the ratio of squares to triangles?



11) What is the ratio of moons to triangles?

