



Solve each problem using the distributive property of division.

Answers

1) $295 \div 5 =$

2) $368 \div 8 =$

3) $216 \div 9 =$

4) $240 \div 5 =$

5) $800 \div 8 =$

6) $480 \div 5 =$

7) $320 \div 5 =$

8) $104 \div 4 =$

9) $495 \div 5 =$

10) $495 \div 9 =$

1. _____

2. _____

3. _____

4. _____

5. _____

6. _____

7. _____

8. _____


9. _____

10. _____

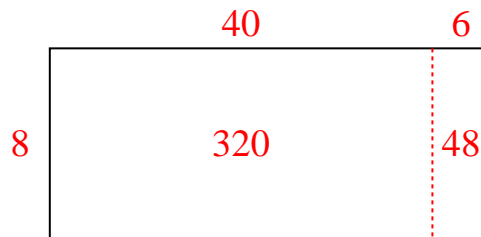


Solve each problem using the distributive property of division.

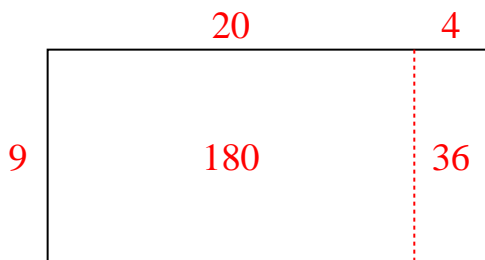
1) $295 \div 5 =$



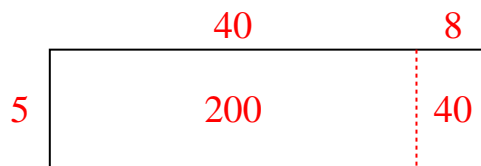
2) $368 \div 8 =$



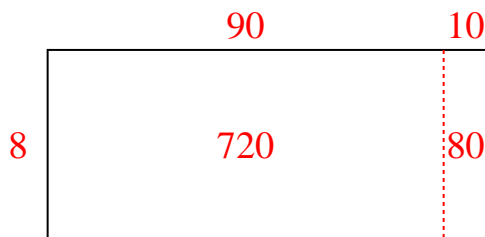
3) $216 \div 9 =$



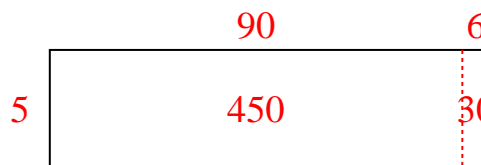
4) $240 \div 5 =$



5) $800 \div 8 =$



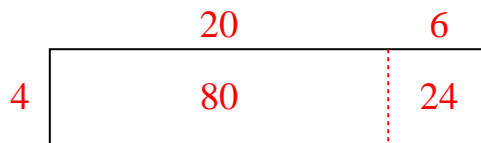
6) $480 \div 5 =$



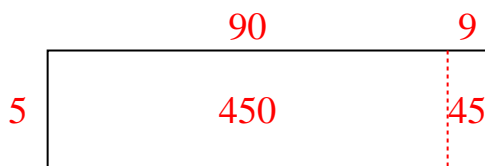
7) $320 \div 5 =$



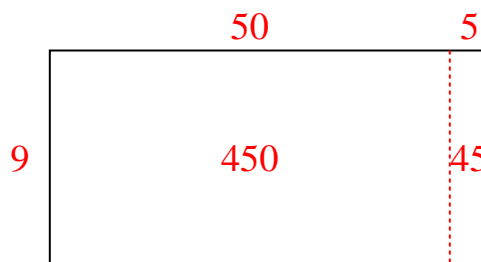
8) $104 \div 4 =$



9) $495 \div 5 =$



10) $495 \div 9 =$

Answers1. **59**2. **46**3. **24**4. **48**5. **100**6. **96**7. **64**8. **26**9. **99**10. **55**