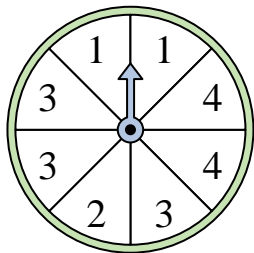


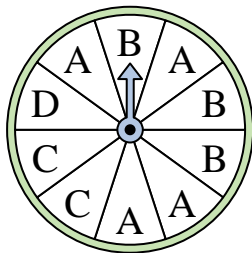


Solve each problem.

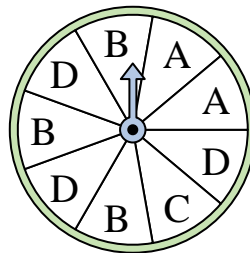
- 1) Which two numbers is the spinner equally likely to land on?



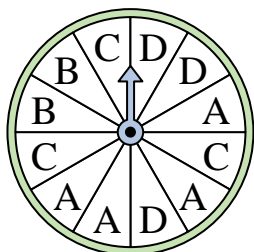
- 2) Which letter is the spinner least likely to land on?




- 3) Which two letters is the spinner equally likely to land on?



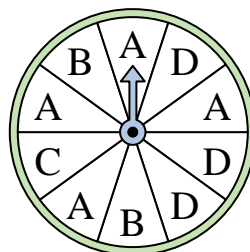
- 4) Which letter is the spinner least likely to land on?




- 5) Which number is the spinner least likely to land on?



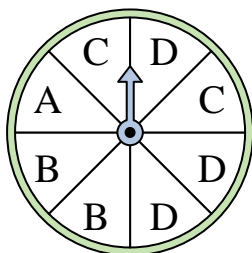
- 6) Which letter is the spinner most likely to land on?



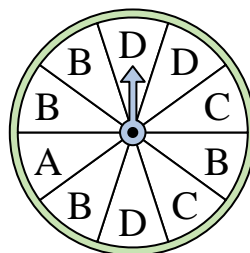
- 7) Which number is the spinner least likely to land on?



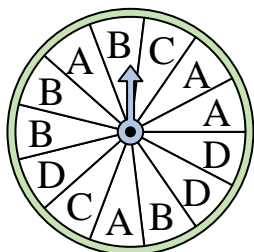
- 8) Which letter is the spinner most likely to land on?




- 9) Which letter is the spinner least likely to land on?



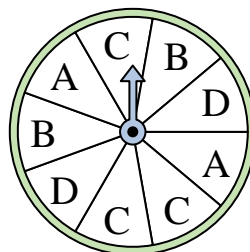
- 10) Which letter is the spinner least likely to land on?



- 11) Which two numbers is the spinner equally likely to land on?



- 12) Which letter is the spinner most likely to land on?



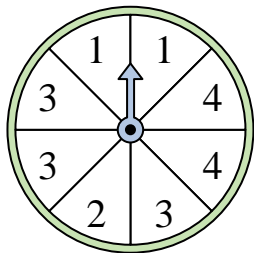
Answers

1. _____
2. _____
3. _____
4. _____
5. _____
6. _____
7. _____
8. _____
9. _____
10. _____
11. _____
12. _____

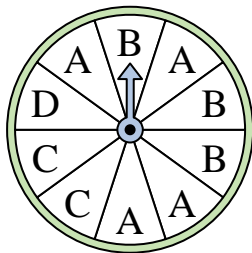


Solve each problem.

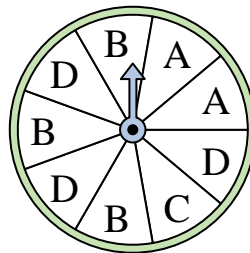
- 1) Which two numbers is the spinner equally likely to land on?



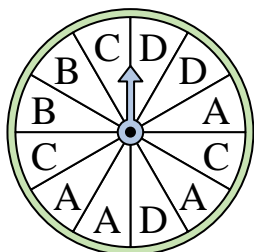
- 2) Which letter is the spinner least likely to land on?




- 3) Which two letters is the spinner equally likely to land on?



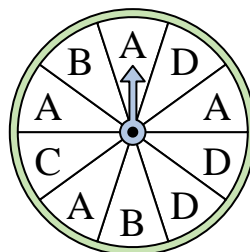
- 4) Which letter is the spinner least likely to land on?




- 5) Which number is the spinner least likely to land on?



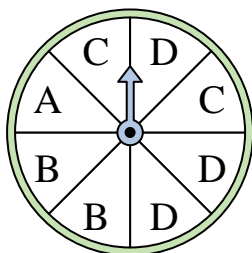
- 6) Which letter is the spinner most likely to land on?



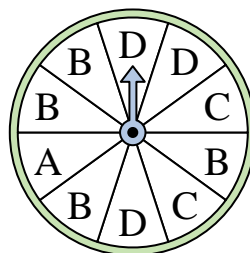
- 7) Which number is the spinner least likely to land on?



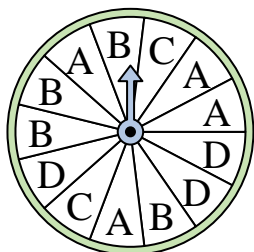
- 8) Which letter is the spinner most likely to land on?




- 9) Which letter is the spinner least likely to land on?



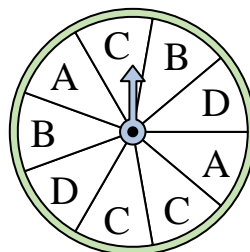
- 10) Which letter is the spinner least likely to land on?



- 11) Which two numbers is the spinner equally likely to land on?



- 12) Which letter is the spinner most likely to land on?



Answers

1. **1 & 4**
2. **D**
3. **B & D**
4. **B**
5. **4**
6. **A**
7. **1**
8. **D**
9. **A**
10. **C**
11. **2 & 3**
12. **C**